



Convert each decimal to a fraction.

Converting from a decimal to a fraction is simple as long as you remember the place values.



0.9

The example above is nine-tenths. Lets look at how we'd write that as a fraction.

$$\frac{9}{10}$$

0.63

We do the same thing for the problem above. But because it is into the hundredths place we put our number over 100.

$$\frac{63}{100}$$

Answers

Ex. $\frac{12}{100}$

1. _____

2. _____

3. _____

4. _____

5. _____

6. _____

7. _____

8. _____

9. _____

10. _____

11. _____

12. _____

13. _____

14. _____

15. _____

16. _____

17. _____

18. _____

19. _____

20. _____

Ex) $0.12 = \frac{12}{100}$

1) $0.78 = \frac{\quad}{\quad}$

2) $0.97 = \frac{\quad}{\quad}$

3) $0.8 = \frac{\quad}{\quad}$

4) $0.25 = \frac{\quad}{\quad}$

5) $0.82 = \frac{\quad}{\quad}$

6) $0.5 = \frac{\quad}{\quad}$

7) $0.06 = \frac{\quad}{\quad}$

8) $0.03 = \frac{\quad}{\quad}$

9) $0.4 = \frac{\quad}{\quad}$

10) $0.33 = \frac{\quad}{\quad}$

11) $0.2 = \frac{\quad}{\quad}$

12) $0.95 = \frac{\quad}{\quad}$

13) $0.07 = \frac{\quad}{\quad}$

14) $0.1 = \frac{\quad}{\quad}$

15) $0.9 = \frac{\quad}{\quad}$

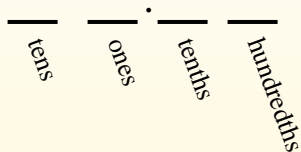
16) $0.09 = \frac{\quad}{\quad}$

17) $0.01 = \frac{\quad}{\quad}$



Convert each decimal to a fraction.

Converting from a decimal to a fraction is simple as long as you remember the place values.



0.9

The example above is nine-tenths. Lets look at how we'd write that as a fraction.

$$\frac{9}{10}$$

0.63

We do the same thing for the problem above. But because it is into the hundredths place we put our number over 100.

$$\frac{63}{100}$$

Answers

- Ex. $\frac{12}{100}$
- 1. $\frac{78}{100}$
- 2. $\frac{97}{100}$
- 3. $\frac{8}{10}$
- 4. $\frac{25}{100}$
- 5. $\frac{82}{100}$
- 6. $\frac{5}{10}$
- 7. $\frac{6}{100}$
- 8. $\frac{3}{100}$
- 9. $\frac{4}{10}$
- 10. $\frac{33}{100}$
- 11. $\frac{2}{10}$
- 12. $\frac{95}{100}$
- 13. $\frac{7}{100}$
- 14. $\frac{1}{10}$
- 15. $\frac{9}{10}$
- 16. $\frac{9}{100}$
- 17. $\frac{1}{100}$
- 18. $\frac{17}{100}$
- 19. $\frac{8}{100}$
- 20. $\frac{94}{100}$

Ex) $0.12 = \frac{12}{100}$

1) $0.78 = \frac{78}{100}$

2) $0.97 = \frac{97}{100}$

3) $0.8 = \frac{8}{10}$

4) $0.25 = \frac{25}{100}$

5) $0.82 = \frac{82}{100}$

6) $0.5 = \frac{5}{10}$

7) $0.06 = \frac{6}{100}$

8) $0.03 = \frac{3}{100}$

9) $0.4 = \frac{4}{10}$

10) $0.33 = \frac{33}{100}$

11) $0.2 = \frac{2}{10}$

12) $0.95 = \frac{95}{100}$

13) $0.07 = \frac{7}{100}$

14) $0.1 = \frac{1}{10}$

15) $0.9 = \frac{9}{10}$

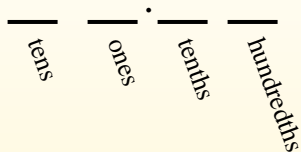
16) $0.09 = \frac{9}{100}$

17) $0.01 = \frac{1}{100}$



Convert each decimal to a fraction.

Converting from a decimal to a fraction is simple as long as you remember the place values.



0.9

The example above is nine-tenths. Lets look at how we'd write that as a fraction.

$$\frac{9}{10}$$

0.63

We do the same thing for the problem above. But because it is into the hundredths place we put our number over 100.

$$\frac{63}{100}$$

Answers

Ex. $\frac{98}{100}$

1. _____

2. _____

3. _____

4. _____

5. _____

6. _____

7. _____

8. _____

9. _____

10. _____

11. _____

12. _____

13. _____

14. _____

15. _____

16. _____

17. _____

18. _____

19. _____

20. _____

Ex) $0.98 = \frac{98}{100}$

1) $0.36 = \frac{\quad}{\quad}$

2) $0.03 = \frac{\quad}{\quad}$

3) $0.77 = \frac{\quad}{\quad}$

4) $0.2 = \frac{\quad}{\quad}$

5) $0.44 = \frac{\quad}{\quad}$

6) $0.87 = \frac{\quad}{\quad}$

7) $0.01 = \frac{\quad}{\quad}$

8) $0.7 = \frac{\quad}{\quad}$

9) $0.06 = \frac{\quad}{\quad}$

10) $0.02 = \frac{\quad}{\quad}$

11) $0.67 = \frac{\quad}{\quad}$

12) $0.1 = \frac{\quad}{\quad}$

13) $0.09 = \frac{\quad}{\quad}$

14) $0.32 = \frac{\quad}{\quad}$

15) $0.05 = \frac{\quad}{\quad}$

16) $0.65 = \frac{\quad}{\quad}$

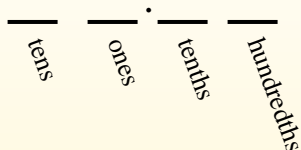
17) $0.3 = \frac{\quad}{\quad}$

1-10	95	90	85	80	75	70	65	60	55	50
11-20	45	40	35	30	25	20	15	10	5	0



Convert each decimal to a fraction.

Converting from a decimal to a fraction is simple as long as you remember the place values.



0.9

The example above is nine-tenths. Lets look at how we'd write that as a fraction.

$$\frac{9}{10}$$

0.63

We do the same thing for the problem above. But because it is into the hundredths place we put our number over 100.

$$\frac{63}{100}$$

Answers

Ex. $\frac{98}{100}$

1. $\frac{36}{100}$

2. $\frac{3}{100}$

3. $\frac{77}{100}$

4. $\frac{2}{10}$

5. $\frac{44}{100}$

6. $\frac{87}{100}$

7. $\frac{1}{100}$

8. $\frac{7}{10}$

9. $\frac{6}{100}$

10. $\frac{2}{100}$

11. $\frac{67}{100}$

12. $\frac{1}{10}$

13. $\frac{9}{100}$

14. $\frac{32}{100}$

15. $\frac{5}{100}$

16. $\frac{65}{100}$

17. $\frac{3}{10}$

18. $\frac{6}{10}$

19. $\frac{70}{100}$

20. $\frac{9}{10}$

Ex) $0.98 = \frac{98}{100}$

1) $0.36 = \frac{36}{100}$

2) $0.03 = \frac{3}{100}$

3) $0.77 = \frac{77}{100}$

4) $0.2 = \frac{2}{10}$

5) $0.44 = \frac{44}{100}$

6) $0.87 = \frac{87}{100}$

7) $0.01 = \frac{1}{100}$

8) $0.7 = \frac{7}{10}$

9) $0.06 = \frac{6}{100}$

10) $0.02 = \frac{2}{100}$

11) $0.67 = \frac{67}{100}$

12) $0.1 = \frac{1}{10}$

13) $0.09 = \frac{9}{100}$

14) $0.32 = \frac{32}{100}$

15) $0.05 = \frac{5}{100}$

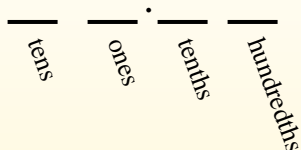
16) $0.65 = \frac{65}{100}$

17) $0.3 = \frac{3}{10}$



Convert each decimal to a fraction.

Converting from a decimal to a fraction is simple as long as you remember the place values.



0.9

The example above is nine-tenths. Lets look at how we'd write that as a fraction.

$$\frac{9}{10}$$

0.63

We do the same thing for the problem above. But because it is into the hundredths place we put our number over 100.

$$\frac{63}{100}$$

Answers

Ex. $\frac{44}{100}$

1. _____

2. _____

3. _____

4. _____

5. _____

6. _____

7. _____

8. _____

9. _____

10. _____

11. _____

12. _____

13. _____

14. _____

15. _____

16. _____

17. _____

18. _____

19. _____

20. _____

Ex) $0.44 = \frac{44}{100}$

1) $0.05 = \frac{\quad}{\quad}$

2) $0.28 = \frac{\quad}{\quad}$

3) $0.9 = \frac{\quad}{\quad}$

4) $0.2 = \frac{\quad}{\quad}$

5) $0.59 = \frac{\quad}{\quad}$

6) $0.8 = \frac{\quad}{\quad}$

7) $0.08 = \frac{\quad}{\quad}$

8) $0.3 = \frac{\quad}{\quad}$

9) $0.86 = \frac{\quad}{\quad}$

10) $0.06 = \frac{\quad}{\quad}$

11) $0.90 = \frac{\quad}{\quad}$

12) $0.7 = \frac{\quad}{\quad}$

13) $0.4 = \frac{\quad}{\quad}$

14) $0.1 = \frac{\quad}{\quad}$

15) $0.01 = \frac{\quad}{\quad}$

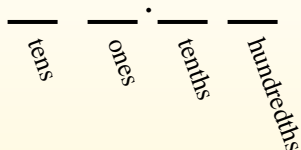
16) $0.76 = \frac{\quad}{\quad}$

17) $0.83 = \frac{\quad}{\quad}$



Convert each decimal to a fraction.

Converting from a decimal to a fraction is simple as long as you remember the place values.



0.9

The example above is nine-tenths. Lets look at how we'd write that as a fraction.

$$\frac{9}{10}$$

0.63

We do the same thing for the problem above. But because it is into the hundredths place we put our number over 100.

$$\frac{63}{100}$$

Answers

Ex. $\frac{44}{100}$

1. $\frac{5}{100}$

2. $\frac{28}{100}$

3. $\frac{9}{10}$

4. $\frac{2}{10}$

5. $\frac{59}{100}$

6. $\frac{8}{10}$

7. $\frac{8}{100}$

8. $\frac{3}{10}$

9. $\frac{86}{100}$

10. $\frac{6}{100}$

11. $\frac{90}{100}$

12. $\frac{7}{10}$

13. $\frac{4}{10}$

14. $\frac{1}{10}$

15. $\frac{1}{100}$

16. $\frac{76}{100}$

17. $\frac{83}{100}$

18. $\frac{36}{100}$

19. $\frac{9}{100}$

20. $\frac{17}{100}$

Ex) $0.44 = \frac{44}{100}$

1) $0.05 = \frac{5}{100}$

2) $0.28 = \frac{28}{100}$

3) $0.9 = \frac{9}{10}$

4) $0.2 = \frac{2}{10}$

5) $0.59 = \frac{59}{100}$

6) $0.8 = \frac{8}{10}$

7) $0.08 = \frac{8}{100}$

8) $0.3 = \frac{3}{10}$

9) $0.86 = \frac{86}{100}$

10) $0.06 = \frac{6}{100}$

11) $0.90 = \frac{90}{100}$

12) $0.7 = \frac{7}{10}$

13) $0.4 = \frac{4}{10}$

14) $0.1 = \frac{1}{10}$

15) $0.01 = \frac{1}{100}$

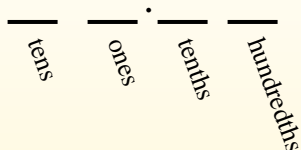
16) $0.76 = \frac{76}{100}$

17) $0.83 = \frac{83}{100}$



Convert each decimal to a fraction.

Converting from a decimal to a fraction is simple as long as you remember the place values.



0.9

The example above is nine-tenths. Lets look at how we'd write that as a fraction.

9/10

0.63

We do the same thing for the problem above. But because it is into the hundredths place we put our number over 100.

63/100

Answers

Ex. 7/100

- 1. _____
- 2. _____
- 3. _____
- 4. _____
- 5. _____
- 6. _____
- 7. _____
- 8. _____
- 9. _____
- 10. _____
- 11. _____
- 12. _____
- 13. _____
- 14. _____
- 15. _____
- 16. _____
- 17. _____
- 18. _____
- 19. _____
- 20. _____

Ex) 0.07 = 7/100

1) 0.89 = _____

2) 0.03 = _____

3) 0.44 = _____

4) 0.20 = _____

5) 0.04 = _____

6) 0.8 = _____

7) 0.45 = _____

8) 0.4 = _____

9) 0.1 = _____

10) 0.2 = _____

11) 0.02 = _____

12) 0.72 = _____

13) 0.6 = _____

14) 0.01 = _____

15) 0.35 = _____

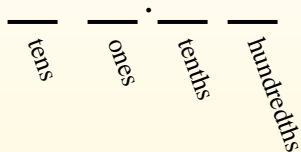
16) 0.80 = _____

17) 0.11 = _____



Convert each decimal to a fraction.

Converting from a decimal to a fraction is simple as long as you remember the place values.



0.9

The example above is nine-tenths. Lets look at how we'd write that as a fraction.

$$\frac{9}{10}$$

0.63

We do the same thing for the problem above. But because it is into the hundredths place we put our number over 100.

$$\frac{63}{100}$$

Answers

- Ex. $\frac{7}{100}$
- 1. $\frac{89}{100}$
- 2. $\frac{3}{100}$
- 3. $\frac{44}{100}$
- 4. $\frac{20}{100}$
- 5. $\frac{4}{100}$
- 6. $\frac{8}{10}$
- 7. $\frac{45}{100}$
- 8. $\frac{4}{10}$
- 9. $\frac{1}{10}$
- 10. $\frac{2}{10}$
- 11. $\frac{2}{100}$
- 12. $\frac{72}{100}$
- 13. $\frac{6}{10}$
- 14. $\frac{1}{100}$
- 15. $\frac{35}{100}$
- 16. $\frac{80}{100}$
- 17. $\frac{11}{100}$
- 18. $\frac{6}{100}$
- 19. $\frac{28}{100}$
- 20. $\frac{7}{10}$

Ex) $0.07 = \frac{7}{100}$

1) $0.89 = \frac{89}{100}$

2) $0.03 = \frac{3}{100}$

3) $0.44 = \frac{44}{100}$

4) $0.20 = \frac{20}{100}$

5) $0.04 = \frac{4}{100}$

6) $0.8 = \frac{8}{10}$

7) $0.45 = \frac{45}{100}$

8) $0.4 = \frac{4}{10}$

9) $0.1 = \frac{1}{10}$

10) $0.2 = \frac{2}{10}$

11) $0.02 = \frac{2}{100}$

12) $0.72 = \frac{72}{100}$

13) $0.6 = \frac{6}{10}$

14) $0.01 = \frac{1}{100}$

15) $0.35 = \frac{35}{100}$

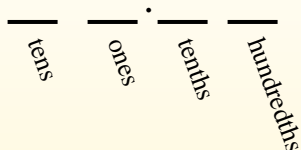
16) $0.80 = \frac{80}{100}$

17) $0.11 = \frac{11}{100}$



Convert each decimal to a fraction.

Converting from a decimal to a fraction is simple as long as you remember the place values.



0.9

The example above is nine-tenths. Lets look at how we'd write that as a fraction.

$$\frac{9}{10}$$

0.63

We do the same thing for the problem above. But because it is into the hundredths place we put our number over 100.

$$\frac{63}{100}$$

Answers

Ex. $\frac{63}{100}$

1. _____

2. _____

3. _____

4. _____

5. _____

6. _____

7. _____

8. _____

9. _____

10. _____

11. _____

12. _____

13. _____

14. _____

15. _____

16. _____

17. _____

18. _____

19. _____

20. _____

Ex) $0.63 = \frac{63}{100}$

1) $0.09 = \frac{\quad}{\quad}$

2) $0.14 = \frac{\quad}{\quad}$

3) $0.9 = \frac{\quad}{\quad}$

4) $0.69 = \frac{\quad}{\quad}$

5) $0.20 = \frac{\quad}{\quad}$

6) $0.80 = \frac{\quad}{\quad}$

7) $0.90 = \frac{\quad}{\quad}$

8) $0.04 = \frac{\quad}{\quad}$

9) $0.05 = \frac{\quad}{\quad}$

10) $0.8 = \frac{\quad}{\quad}$

11) $0.02 = \frac{\quad}{\quad}$

12) $0.4 = \frac{\quad}{\quad}$

13) $0.42 = \frac{\quad}{\quad}$

14) $0.19 = \frac{\quad}{\quad}$

15) $0.5 = \frac{\quad}{\quad}$

16) $0.49 = \frac{\quad}{\quad}$

17) $0.08 = \frac{\quad}{\quad}$



Convert each decimal to a fraction.

Converting from a decimal to a fraction is simple as long as you remember the place values.



0.9

The example above is nine-tenths. Lets look at how we'd write that as a fraction.

$$\frac{9}{10}$$

0.63

We do the same thing for the problem above. But because it is into the hundredths place we put our number over 100.

$$\frac{63}{100}$$

Answers

- Ex. $\frac{63}{100}$
- 1. $\frac{9}{100}$
- 2. $\frac{14}{100}$
- 3. $\frac{9}{10}$
- 4. $\frac{69}{100}$
- 5. $\frac{20}{100}$
- 6. $\frac{80}{100}$
- 7. $\frac{90}{100}$
- 8. $\frac{4}{100}$
- 9. $\frac{5}{100}$
- 10. $\frac{8}{10}$
- 11. $\frac{2}{100}$
- 12. $\frac{4}{10}$
- 13. $\frac{42}{100}$
- 14. $\frac{19}{100}$
- 15. $\frac{5}{10}$
- 16. $\frac{49}{100}$
- 17. $\frac{8}{100}$
- 18. $\frac{2}{10}$
- 19. $\frac{3}{100}$
- 20. $\frac{6}{10}$

Ex) $0.63 = \frac{63}{100}$

1) $0.09 = \frac{9}{100}$

2) $0.14 = \frac{14}{100}$

3) $0.9 = \frac{9}{10}$

4) $0.69 = \frac{69}{100}$

5) $0.20 = \frac{20}{100}$

6) $0.80 = \frac{80}{100}$

7) $0.90 = \frac{90}{100}$

8) $0.04 = \frac{4}{100}$

9) $0.05 = \frac{5}{100}$

10) $0.8 = \frac{8}{10}$

11) $0.02 = \frac{2}{100}$

12) $0.4 = \frac{4}{10}$

13) $0.42 = \frac{42}{100}$

14) $0.19 = \frac{19}{100}$

15) $0.5 = \frac{5}{10}$

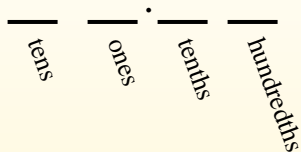
16) $0.49 = \frac{49}{100}$

17) $0.08 = \frac{8}{100}$



Convert each decimal to a fraction.

Converting from a decimal to a fraction is simple as long as you remember the place values.



0.9

The example above is nine-tenths. Lets look at how we'd write that as a fraction.

9/10

0.63

We do the same thing for the problem above. But because it is into the hundredths place we put our number over 100.

63/100

Answers

Ex. 8/10

1. _____
2. _____
3. _____
4. _____
5. _____
6. _____
7. _____
8. _____
9. _____
10. _____
11. _____
12. _____
13. _____
14. _____
15. _____
16. _____
17. _____
18. _____
19. _____
20. _____

Ex) 0.8 = 8/10

1) 0.6 = _____

2) 0.4 = _____

3) 0.73 = _____

4) 0.64 = _____

5) 0.3 = _____

6) 0.94 = _____

7) 0.9 = _____

8) 0.03 = _____

9) 0.02 = _____

10) 0.09 = _____

11) 0.08 = _____

12) 0.71 = _____

13) 0.04 = _____

14) 0.42 = _____

15) 0.01 = _____

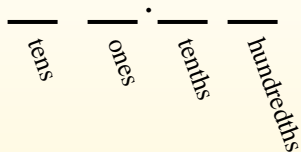
16) 0.93 = _____

17) 0.67 = _____



Convert each decimal to a fraction.

Converting from a decimal to a fraction is simple as long as you remember the place values.



0.9

The example above is nine-tenths. Lets look at how we'd write that as a fraction.

$$\frac{9}{10}$$

0.63

We do the same thing for the problem above. But because it is into the hundredths place we put our number over 100.

$$\frac{63}{100}$$

Answers

Ex) $0.8 = \frac{8}{10}$

1) $0.6 = \frac{6}{10}$

2) $0.4 = \frac{4}{10}$

3) $0.73 = \frac{73}{100}$

4) $0.64 = \frac{64}{100}$

5) $0.3 = \frac{3}{10}$

6) $0.94 = \frac{94}{100}$

7) $0.9 = \frac{9}{10}$

8) $0.03 = \frac{3}{100}$

9) $0.02 = \frac{2}{100}$

10) $0.09 = \frac{9}{100}$

11) $0.08 = \frac{8}{100}$

12) $0.71 = \frac{71}{100}$

13) $0.04 = \frac{4}{100}$

14) $0.42 = \frac{42}{100}$

15) $0.01 = \frac{1}{100}$

16) $0.93 = \frac{93}{100}$

17) $0.67 = \frac{67}{100}$

Ex. $\frac{8}{10}$

1. $\frac{6}{10}$

2. $\frac{4}{10}$

3. $\frac{73}{100}$

4. $\frac{64}{100}$

5. $\frac{3}{10}$

6. $\frac{94}{100}$

7. $\frac{9}{10}$

8. $\frac{3}{100}$

9. $\frac{2}{100}$

10. $\frac{9}{100}$

11. $\frac{8}{100}$

12. $\frac{71}{100}$

13. $\frac{4}{100}$

14. $\frac{42}{100}$

15. $\frac{1}{100}$

16. $\frac{93}{100}$

17. $\frac{67}{100}$

18. $\frac{7}{10}$

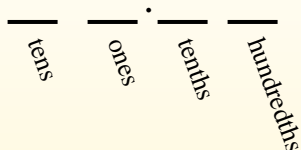
19. $\frac{58}{100}$

20. $\frac{46}{100}$



Convert each decimal to a fraction.

Converting from a decimal to a fraction is simple as long as you remember the place values.



0.9

The example above is nine-tenths. Lets look at how we'd write that as a fraction.

$$\frac{9}{10}$$

0.63

We do the same thing for the problem above. But because it is into the hundredths place we put our number over 100.

$$\frac{63}{100}$$

Answers

- Ex. $\frac{6}{100}$
1. _____
2. _____
3. _____
4. _____
5. _____
6. _____
7. _____
8. _____
9. _____
10. _____
11. _____
12. _____
13. _____
14. _____
15. _____
16. _____
17. _____
18. _____
19. _____
20. _____

Ex) $0.06 = \frac{6}{100}$

1) $0.70 = \underline{\hspace{2cm}}$

2) $0.05 = \underline{\hspace{2cm}}$

3) $0.49 = \underline{\hspace{2cm}}$

4) $0.09 = \underline{\hspace{2cm}}$

5) $0.7 = \underline{\hspace{2cm}}$

6) $0.08 = \underline{\hspace{2cm}}$

7) $0.44 = \underline{\hspace{2cm}}$

8) $0.69 = \underline{\hspace{2cm}}$

9) $0.02 = \underline{\hspace{2cm}}$

10) $0.8 = \underline{\hspace{2cm}}$

11) $0.50 = \underline{\hspace{2cm}}$

12) $0.6 = \underline{\hspace{2cm}}$

13) $0.2 = \underline{\hspace{2cm}}$

14) $0.07 = \underline{\hspace{2cm}}$

15) $0.80 = \underline{\hspace{2cm}}$

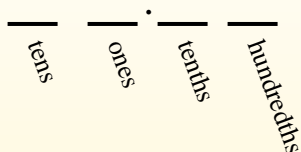
16) $0.4 = \underline{\hspace{2cm}}$

17) $0.1 = \underline{\hspace{2cm}}$



Convert each decimal to a fraction.

Converting from a decimal to a fraction is simple as long as you remember the place values.



0.9

The example above is nine-tenths. Lets look at how we'd write that as a fraction.

$$\frac{9}{10}$$

0.63

We do the same thing for the problem above. But because it is into the hundredths place we put our number over 100.

$$\frac{63}{100}$$

Answers

Ex. $\frac{6}{100}$

1. $\frac{70}{100}$

2. $\frac{5}{100}$

3. $\frac{49}{100}$

4. $\frac{9}{100}$

5. $\frac{7}{10}$

6. $\frac{8}{100}$

7. $\frac{44}{100}$

8. $\frac{69}{100}$

9. $\frac{2}{100}$

10. $\frac{8}{10}$

11. $\frac{50}{100}$

12. $\frac{6}{10}$

13. $\frac{2}{10}$

14. $\frac{7}{100}$

15. $\frac{80}{100}$

16. $\frac{4}{10}$

17. $\frac{1}{10}$

18. $\frac{3}{10}$

19. $\frac{96}{100}$

20. $\frac{57}{100}$

Ex) $0.06 = \frac{6}{100}$

1) $0.70 = \frac{70}{100}$

2) $0.05 = \frac{5}{100}$

3) $0.49 = \frac{49}{100}$

4) $0.09 = \frac{9}{100}$

5) $0.7 = \frac{7}{10}$

6) $0.08 = \frac{8}{100}$

7) $0.44 = \frac{44}{100}$

8) $0.69 = \frac{69}{100}$

9) $0.02 = \frac{2}{100}$

10) $0.8 = \frac{8}{10}$

11) $0.50 = \frac{50}{100}$

12) $0.6 = \frac{6}{10}$

13) $0.2 = \frac{2}{10}$

14) $0.07 = \frac{7}{100}$

15) $0.80 = \frac{80}{100}$

16) $0.4 = \frac{4}{10}$

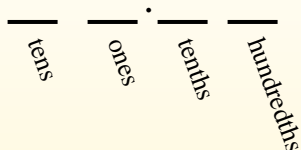
17) $0.1 = \frac{1}{10}$

1-10	95	90	85	80	75	70	65	60	55	50
11-20	45	40	35	30	25	20	15	10	5	0



Convert each decimal to a fraction.

Converting from a decimal to a fraction is simple as long as you remember the place values.



0.9

The example above is nine-tenths. Lets look at how we'd write that as a fraction.

9/10

0.63

We do the same thing for the problem above. But because it is into the hundredths place we put our number over 100.

63/100

Answers

Ex. 5/10

- 1. _____
- 2. _____
- 3. _____
- 4. _____
- 5. _____
- 6. _____
- 7. _____
- 8. _____
- 9. _____
- 10. _____
- 11. _____
- 12. _____
- 13. _____
- 14. _____
- 15. _____
- 16. _____
- 17. _____
- 18. _____
- 19. _____
- 20. _____

Ex) 0.5 = 5/10

1) 0.28 = _____

2) 0.2 = _____

3) 0.11 = _____

4) 0.8 = _____

5) 0.6 = _____

6) 0.3 = _____

7) 0.7 = _____

8) 0.1 = _____

9) 0.07 = _____

10) 0.31 = _____

11) 0.83 = _____

12) 0.77 = _____

13) 0.02 = _____

14) 0.62 = _____

15) 0.04 = _____

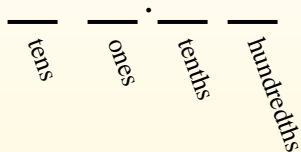
16) 0.43 = _____

17) 0.01 = _____



Convert each decimal to a fraction.

Converting from a decimal to a fraction is simple as long as you remember the place values.



0.9

The example above is nine-tenths. Lets look at how we'd write that as a fraction.

$$\frac{9}{10}$$

0.63

We do the same thing for the problem above. But because it is into the hundredths place we put our number over 100.

$$\frac{63}{100}$$

Answers

Ex. $\frac{5}{10}$

1. $\frac{28}{100}$

2. $\frac{2}{10}$

3. $\frac{11}{100}$

4. $\frac{8}{10}$

5. $\frac{6}{10}$

6. $\frac{3}{10}$

7. $\frac{7}{10}$

8. $\frac{1}{10}$

9. $\frac{7}{100}$

10. $\frac{31}{100}$

11. $\frac{83}{100}$

12. $\frac{77}{100}$

13. $\frac{2}{100}$

14. $\frac{62}{100}$

15. $\frac{4}{100}$

16. $\frac{43}{100}$

17. $\frac{1}{100}$

18. $\frac{20}{100}$

19. $\frac{21}{100}$

20. $\frac{6}{100}$

Ex) $0.5 = \frac{5}{10}$

1) $0.28 = \frac{28}{100}$

2) $0.2 = \frac{2}{10}$

3) $0.11 = \frac{11}{100}$

4) $0.8 = \frac{8}{10}$

5) $0.6 = \frac{6}{10}$

6) $0.3 = \frac{3}{10}$

7) $0.7 = \frac{7}{10}$

8) $0.1 = \frac{1}{10}$

9) $0.07 = \frac{7}{100}$

10) $0.31 = \frac{31}{100}$

11) $0.83 = \frac{83}{100}$

12) $0.77 = \frac{77}{100}$

13) $0.02 = \frac{2}{100}$

14) $0.62 = \frac{62}{100}$

15) $0.04 = \frac{4}{100}$

16) $0.43 = \frac{43}{100}$

17) $0.01 = \frac{1}{100}$



Convert each decimal to a fraction.

Converting from a decimal to a fraction is simple as long as you remember the place values.



0.9

The example above is nine-tenths. Lets look at how we'd write that as a fraction.

$$\frac{9}{10}$$

0.63

We do the same thing for the problem above. But because it is into the hundredths place we put our number over 100.

$$\frac{63}{100}$$

Answers

Ex. $\frac{8}{10}$

1. _____

2. _____

3. _____

4. _____

5. _____

6. _____

7. _____

8. _____

9. _____

10. _____

11. _____

12. _____

13. _____

14. _____

15. _____

16. _____

17. _____

18. _____

19. _____

20. _____

Ex) $0.8 = \frac{8}{10}$

1) $0.7 = \frac{\quad}{\quad}$

2) $0.05 = \frac{\quad}{\quad}$

3) $0.55 = \frac{\quad}{\quad}$

4) $0.1 = \frac{\quad}{\quad}$

5) $0.02 = \frac{\quad}{\quad}$

6) $0.9 = \frac{\quad}{\quad}$

7) $0.09 = \frac{\quad}{\quad}$

8) $0.43 = \frac{\quad}{\quad}$

9) $0.15 = \frac{\quad}{\quad}$

10) $0.34 = \frac{\quad}{\quad}$

11) $0.4 = \frac{\quad}{\quad}$

12) $0.07 = \frac{\quad}{\quad}$

13) $0.68 = \frac{\quad}{\quad}$

14) $0.13 = \frac{\quad}{\quad}$

15) $0.39 = \frac{\quad}{\quad}$

16) $0.06 = \frac{\quad}{\quad}$

17) $0.6 = \frac{\quad}{\quad}$



Convert each decimal to a fraction.

Converting from a decimal to a fraction is simple as long as you remember the place values.



0.9

The example above is nine-tenths. Lets look at how we'd write that as a fraction.

$$\frac{9}{10}$$

0.63

We do the same thing for the problem above. But because it is into the hundredths place we put our number over 100.

$$\frac{63}{100}$$

Answers

Ex) $0.8 = \frac{8}{10}$

1) $0.7 = \frac{7}{10}$

2) $0.05 = \frac{5}{100}$

3) $0.55 = \frac{55}{100}$

4) $0.1 = \frac{1}{10}$

5) $0.02 = \frac{2}{100}$

6) $0.9 = \frac{9}{10}$

7) $0.09 = \frac{9}{100}$

8) $0.43 = \frac{43}{100}$

9) $0.15 = \frac{15}{100}$

10) $0.34 = \frac{34}{100}$

11) $0.4 = \frac{4}{10}$

12) $0.07 = \frac{7}{100}$

13) $0.68 = \frac{68}{100}$

14) $0.13 = \frac{13}{100}$

15) $0.39 = \frac{39}{100}$

16) $0.06 = \frac{6}{100}$

17) $0.6 = \frac{6}{10}$

Ex. $\frac{8}{10}$

1. $\frac{7}{10}$

2. $\frac{5}{100}$

3. $\frac{55}{100}$

4. $\frac{1}{10}$

5. $\frac{2}{100}$

6. $\frac{9}{10}$

7. $\frac{9}{100}$

8. $\frac{43}{100}$

9. $\frac{15}{100}$

10. $\frac{34}{100}$

11. $\frac{4}{10}$

12. $\frac{7}{100}$

13. $\frac{68}{100}$

14. $\frac{13}{100}$

15. $\frac{39}{100}$

16. $\frac{6}{100}$

17. $\frac{6}{10}$

18. $\frac{5}{10}$

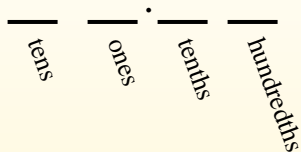
19. $\frac{49}{100}$

20. $\frac{1}{100}$



Convert each decimal to a fraction.

Converting from a decimal to a fraction is simple as long as you remember the place values.



0.9

The example above is nine-tenths. Lets look at how we'd write that as a fraction.

$$\frac{9}{10}$$

0.63

We do the same thing for the problem above. But because it is into the hundredths place we put our number over 100.

$$\frac{63}{100}$$

Answers

Ex. $\frac{5}{10}$

1. _____

2. _____

3. _____

4. _____

5. _____

6. _____

7. _____

8. _____

9. _____

10. _____

11. _____

12. _____

13. _____

14. _____

15. _____

16. _____

17. _____

18. _____

19. _____

20. _____

Ex) $0.5 = \frac{5}{10}$

1) $0.32 = \frac{\quad}{\quad}$

2) $0.8 = \frac{\quad}{\quad}$

3) $0.04 = \frac{\quad}{\quad}$

4) $0.7 = \frac{\quad}{\quad}$

5) $0.08 = \frac{\quad}{\quad}$

6) $0.21 = \frac{\quad}{\quad}$

7) $0.03 = \frac{\quad}{\quad}$

8) $0.81 = \frac{\quad}{\quad}$

9) $0.9 = \frac{\quad}{\quad}$

10) $0.53 = \frac{\quad}{\quad}$

11) $0.2 = \frac{\quad}{\quad}$

12) $0.1 = \frac{\quad}{\quad}$

13) $0.87 = \frac{\quad}{\quad}$

14) $0.05 = \frac{\quad}{\quad}$

15) $0.90 = \frac{\quad}{\quad}$

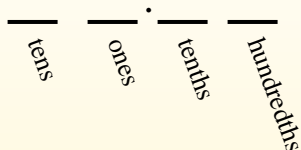
16) $0.06 = \frac{\quad}{\quad}$

17) $0.31 = \frac{\quad}{\quad}$



Convert each decimal to a fraction.

Converting from a decimal to a fraction is simple as long as you remember the place values.



0.9

The example above is nine-tenths. Lets look at how we'd write that as a fraction.

$$\frac{9}{10}$$

0.63

We do the same thing for the problem above. But because it is into the hundredths place we put our number over 100.

$$\frac{63}{100}$$

Answers

Ex. $\frac{5}{10}$

1. $\frac{32}{100}$

2. $\frac{8}{10}$

3. $\frac{4}{100}$

4. $\frac{7}{10}$

5. $\frac{8}{100}$

6. $\frac{21}{100}$

7. $\frac{3}{100}$

8. $\frac{81}{100}$

9. $\frac{9}{10}$

10. $\frac{53}{100}$

11. $\frac{2}{10}$

12. $\frac{1}{10}$

13. $\frac{87}{100}$

14. $\frac{5}{100}$

15. $\frac{90}{100}$

16. $\frac{6}{100}$

17. $\frac{31}{100}$

18. $\frac{35}{100}$

19. $\frac{99}{100}$

20. $\frac{6}{10}$

Ex) $0.5 = \frac{5}{10}$

1) $0.32 = \frac{32}{100}$

2) $0.8 = \frac{8}{10}$

3) $0.04 = \frac{4}{100}$

4) $0.7 = \frac{7}{10}$

5) $0.08 = \frac{8}{100}$

6) $0.21 = \frac{21}{100}$

7) $0.03 = \frac{3}{100}$

8) $0.81 = \frac{81}{100}$

9) $0.9 = \frac{9}{10}$

10) $0.53 = \frac{53}{100}$

11) $0.2 = \frac{2}{10}$

12) $0.1 = \frac{1}{10}$

13) $0.87 = \frac{87}{100}$

14) $0.05 = \frac{5}{100}$

15) $0.90 = \frac{90}{100}$

16) $0.06 = \frac{6}{100}$

17) $0.31 = \frac{31}{100}$