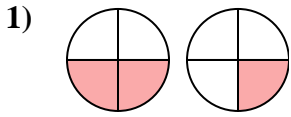


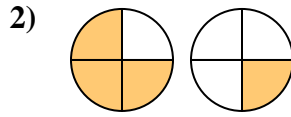


Determine which letter best compares the fractions shown.

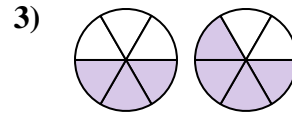
**Answers**



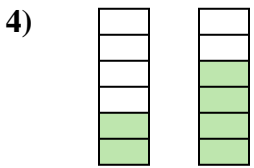
- A.  $\frac{2}{2} < \frac{1}{3}$
- B.  $\frac{2}{2} > \frac{1}{3}$
- C.  $\frac{2}{4} > \frac{1}{4}$
- D.  $\frac{2}{4} < \frac{1}{4}$



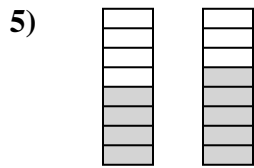
- A.  $\frac{1}{3} > \frac{3}{1}$
- B.  $\frac{3}{1} > \frac{1}{3}$
- C.  $\frac{3}{4} > \frac{1}{4}$
- D.  $\frac{3}{4} < \frac{1}{4}$



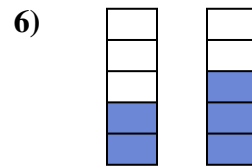
- A.  $\frac{3}{6} < \frac{4}{6}$
- B.  $\frac{3}{3} < \frac{2}{4}$
- C.  $\frac{6}{3} > \frac{6}{4}$
- D.  $\frac{3}{6} > \frac{4}{6}$



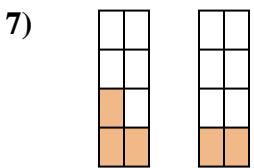
- A.  $\frac{2}{4} < \frac{4}{2}$
- B.  $\frac{2}{6} < \frac{4}{6}$
- C.  $\frac{2}{4} > \frac{4}{2}$
- D.  $\frac{2}{6} > \frac{4}{6}$



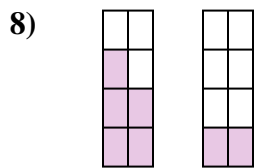
- A.  $\frac{8}{4} > \frac{8}{5}$
- B.  $\frac{4}{8} > \frac{5}{8}$
- C.  $\frac{4}{4} > \frac{5}{3}$
- D.  $\frac{4}{8} < \frac{5}{8}$



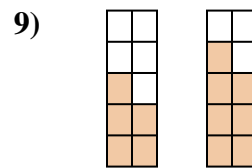
- A.  $\frac{2}{5} > \frac{3}{5}$
- B.  $\frac{2}{3} > \frac{3}{2}$
- C.  $\frac{5}{2} > \frac{5}{3}$
- D.  $\frac{2}{5} < \frac{3}{5}$



- A.  $\frac{3}{5} > \frac{2}{6}$
- B.  $\frac{3}{8} < \frac{2}{8}$
- C.  $\frac{3}{8} > \frac{2}{8}$
- D.  $\frac{5}{3} < \frac{6}{2}$



- A.  $\frac{5}{3} < \frac{2}{6}$
- B.  $\frac{5}{3} > \frac{2}{6}$
- C.  $\frac{5}{8} > \frac{2}{8}$
- D.  $\frac{3}{5} > \frac{6}{2}$

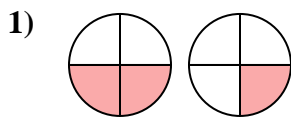


- A.  $\frac{10}{5} > \frac{10}{7}$
- B.  $\frac{5}{5} < \frac{7}{3}$
- C.  $\frac{5}{5} < \frac{3}{7}$
- D.  $\frac{5}{10} < \frac{7}{10}$

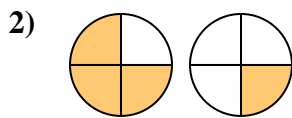
- 1. \_\_\_\_\_
- 2. \_\_\_\_\_
- 3. \_\_\_\_\_
- 4. \_\_\_\_\_
- 5. \_\_\_\_\_
- 6. \_\_\_\_\_
- 7. \_\_\_\_\_
- 8. \_\_\_\_\_
- 9. \_\_\_\_\_



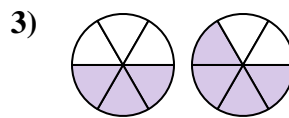
Determine which letter best compares the fractions shown.



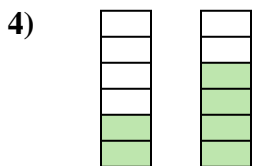
- A.  $\frac{2}{2} < \frac{1}{3}$
- B.  $\frac{2}{2} > \frac{1}{3}$
- C.  $\frac{2}{4} > \frac{1}{4}$
- D.  $\frac{2}{4} < \frac{1}{4}$



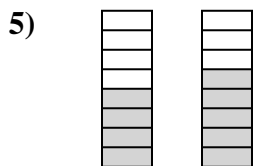
- A.  $\frac{1}{3} > \frac{3}{1}$
- B.  $\frac{3}{1} > \frac{1}{3}$
- C.  $\frac{3}{4} > \frac{1}{4}$
- D.  $\frac{3}{4} < \frac{1}{4}$



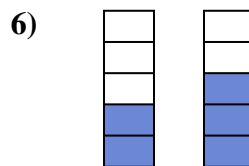
- A.  $\frac{3}{6} < \frac{4}{6}$
- B.  $\frac{3}{3} < \frac{2}{4}$
- C.  $\frac{6}{3} > \frac{6}{4}$
- D.  $\frac{3}{6} > \frac{4}{6}$



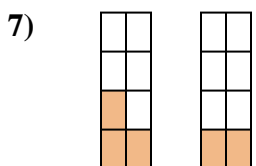
- A.  $\frac{2}{4} < \frac{4}{2}$
- B.  $\frac{2}{6} < \frac{4}{6}$
- C.  $\frac{2}{4} > \frac{4}{2}$
- D.  $\frac{2}{6} > \frac{4}{6}$



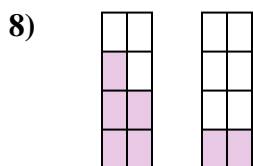
- A.  $\frac{8}{4} > \frac{8}{5}$
- B.  $\frac{4}{8} > \frac{5}{8}$
- C.  $\frac{4}{4} > \frac{5}{3}$
- D.  $\frac{4}{8} < \frac{5}{8}$



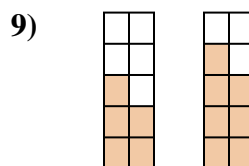
- A.  $\frac{2}{5} > \frac{3}{5}$
- B.  $\frac{2}{3} > \frac{3}{2}$
- C.  $\frac{5}{2} > \frac{5}{3}$
- D.  $\frac{2}{5} < \frac{3}{5}$



- A.  $\frac{3}{5} > \frac{2}{6}$
- B.  $\frac{3}{8} < \frac{2}{8}$
- C.  $\frac{3}{8} > \frac{2}{8}$
- D.  $\frac{5}{3} < \frac{6}{2}$



- A.  $\frac{5}{3} < \frac{2}{6}$
- B.  $\frac{5}{3} > \frac{2}{6}$
- C.  $\frac{5}{8} > \frac{2}{8}$
- D.  $\frac{3}{5} > \frac{6}{2}$



- A.  $\frac{10}{5} > \frac{10}{7}$
- B.  $\frac{5}{5} < \frac{7}{3}$
- C.  $\frac{5}{5} < \frac{3}{7}$
- D.  $\frac{5}{10} < \frac{7}{10}$

**Answers**

- 1.     **C**
- 2.     **C**
- 3.     **A**
- 4.     **B**
- 5.     **D**
- 6.     **D**
- 7.     **C**
- 8.     **C**
- 9.     **D**