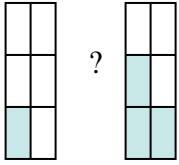




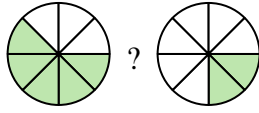
Compare the size of the fractions using  $<$ ,  $>$  or  $=$ .

Ex)



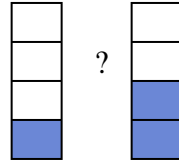
?

1)



?

2)



?

**Answers**

Ex.  $\frac{1}{6}$   $<$   $\frac{3}{6}$

1. \_\_\_\_\_

2. \_\_\_\_\_

3. \_\_\_\_\_

4. \_\_\_\_\_

5. \_\_\_\_\_

6. \_\_\_\_\_

7. \_\_\_\_\_

8. \_\_\_\_\_

9. \_\_\_\_\_

10. \_\_\_\_\_

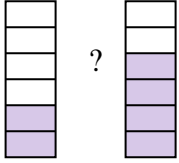
11. \_\_\_\_\_

12. \_\_\_\_\_

13. \_\_\_\_\_

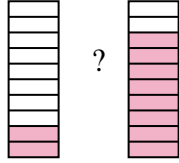
14. \_\_\_\_\_

3)



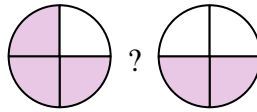
?

4)



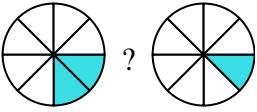
?

5)



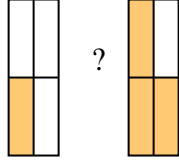
?

6)



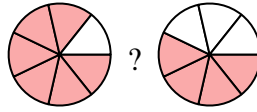
?

7)



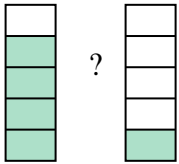
?

8)



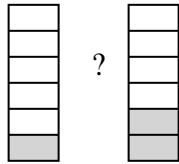
?

9)



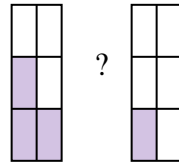
?

10)



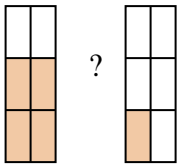
?

11)



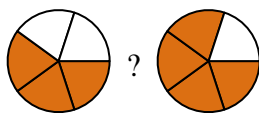
?

12)



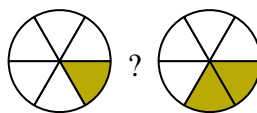
?

13)



?

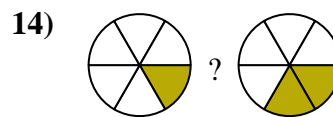
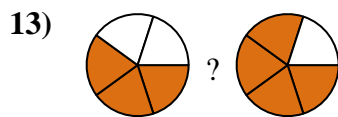
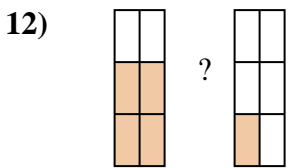
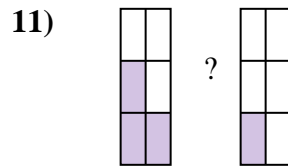
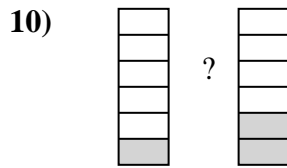
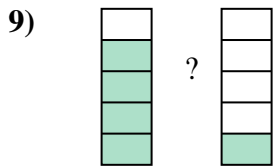
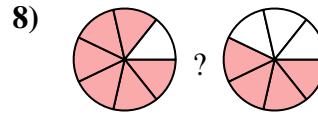
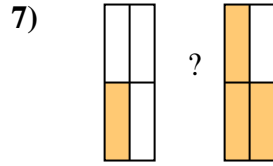
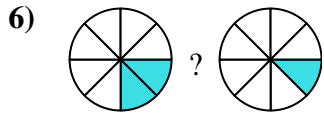
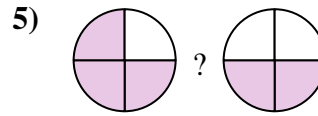
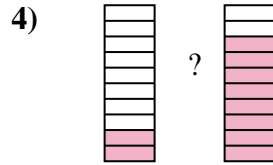
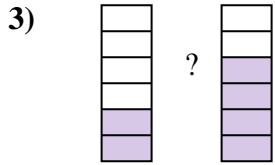
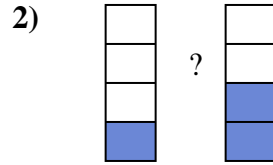
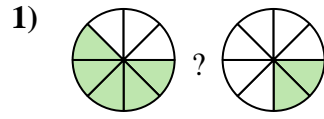
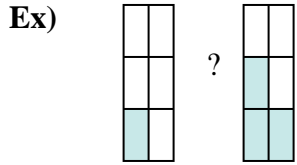
14)



?



Compare the size of the fractions using  $<$ ,  $>$  or  $=$ .



**Answers**

Ex.	$\frac{1}{6}$	$<$	$\frac{3}{6}$
1.	$\frac{5}{8}$	$>$	$\frac{2}{8}$
2.	$\frac{1}{4}$	$<$	$\frac{2}{4}$
3.	$\frac{2}{6}$	$<$	$\frac{4}{6}$
4.	$\frac{2}{10}$	$<$	$\frac{8}{10}$
5.	$\frac{3}{4}$	$>$	$\frac{2}{4}$
6.	$\frac{2}{8}$	$>$	$\frac{1}{8}$
7.	$\frac{1}{4}$	$<$	$\frac{3}{4}$
8.	$\frac{6}{7}$	$>$	$\frac{4}{7}$
9.	$\frac{4}{5}$	$>$	$\frac{1}{5}$
10.	$\frac{1}{6}$	$<$	$\frac{2}{6}$
11.	$\frac{3}{6}$	$>$	$\frac{1}{6}$
12.	$\frac{4}{6}$	$>$	$\frac{1}{6}$
13.	$\frac{3}{5}$	$<$	$\frac{4}{5}$
14.	$\frac{1}{6}$	$<$	$\frac{2}{6}$