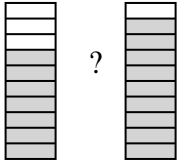


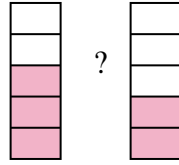


Compare the size of the fractions using  $<$ ,  $>$  or  $=$ .

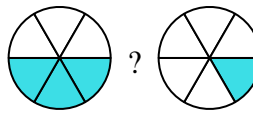
Ex)



1)



2)



**Answers**

Ex.  $\frac{7}{10} < \frac{9}{10}$

1. \_\_\_\_\_

2. \_\_\_\_\_

3. \_\_\_\_\_

4. \_\_\_\_\_

5. \_\_\_\_\_

6. \_\_\_\_\_

7. \_\_\_\_\_

8. \_\_\_\_\_

9. \_\_\_\_\_

10. \_\_\_\_\_

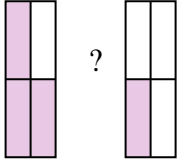
11. \_\_\_\_\_

12. \_\_\_\_\_

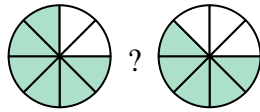
13. \_\_\_\_\_

14. \_\_\_\_\_

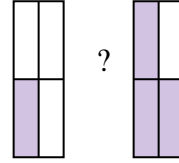
3)



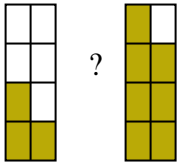
4)



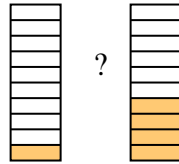
5)



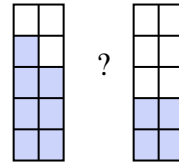
6)



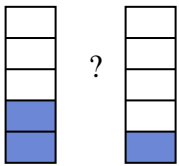
7)



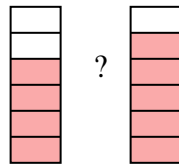
8)



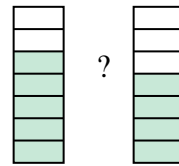
9)



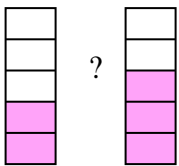
10)



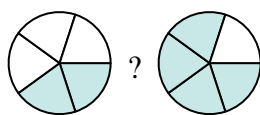
11)



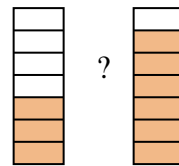
12)



13)

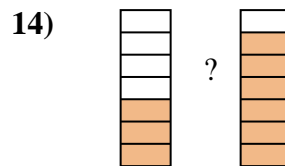
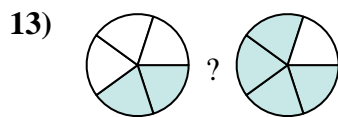
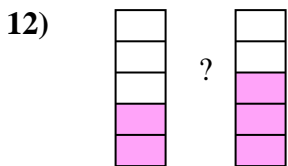
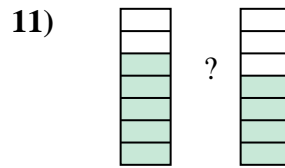
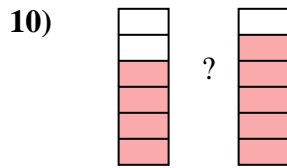
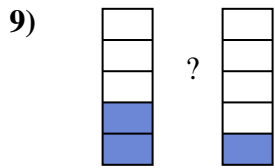
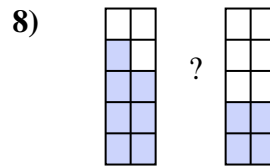
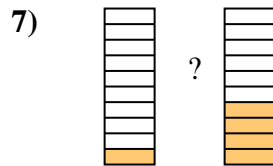
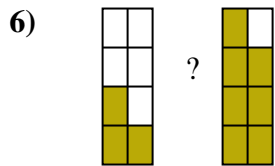
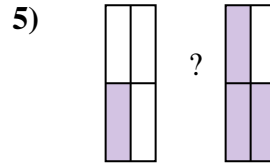
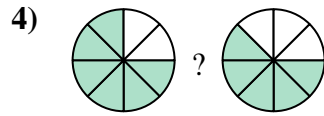
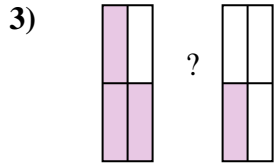
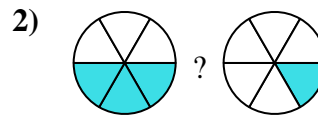
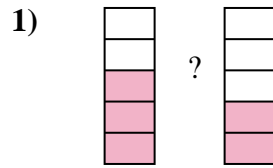
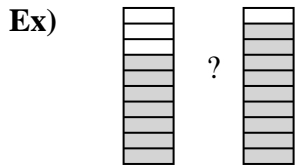


14)





Compare the size of the fractions using  $<$ ,  $>$  or  $=$ .



**Answers**

Ex.  $\frac{7}{10} < \frac{9}{10}$

1.  $\frac{3}{5} > \frac{2}{5}$

2.  $\frac{3}{6} > \frac{1}{6}$

3.  $\frac{3}{4} > \frac{1}{4}$

4.  $\frac{6}{8} > \frac{5}{8}$

5.  $\frac{1}{4} < \frac{3}{4}$

6.  $\frac{3}{8} < \frac{7}{8}$

7.  $\frac{1}{10} < \frac{4}{10}$

8.  $\frac{7}{10} > \frac{4}{10}$

9.  $\frac{2}{5} > \frac{1}{5}$

10.  $\frac{4}{6} < \frac{5}{6}$

11.  $\frac{5}{7} > \frac{4}{7}$

12.  $\frac{2}{5} < \frac{3}{5}$

13.  $\frac{2}{5} < \frac{4}{5}$

14.  $\frac{3}{7} < \frac{6}{7}$