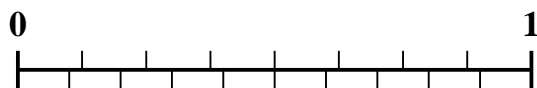


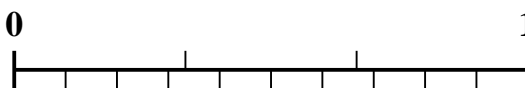


Use the number line to solve each problem.


1) Which amount is larger, $\frac{4}{8}$ or 0.35?



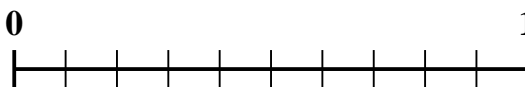
2) Which amount is larger, $\frac{1}{3}$ or 0.18?




3) Which amount is larger, $\frac{2}{5}$ or 0.56?



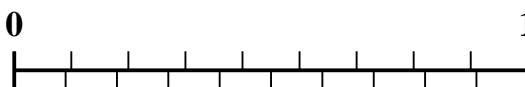
4) Which amount is larger, $\frac{7}{10}$ or 0.53?



5) Which amount is larger, $\frac{1}{2}$ or 0.64?



6) Which amount is larger, $\frac{6}{9}$ or 0.57?




7) Which amount is larger, $\frac{3}{7}$ or 0.24?



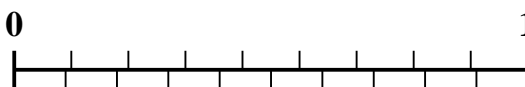
8) Which amount is larger, $\frac{3}{8}$ or 0.24?



9) Which amount is larger, $\frac{2}{3}$ or 0.85?



10) Which amount is larger, $\frac{2}{9}$ or 0.11?



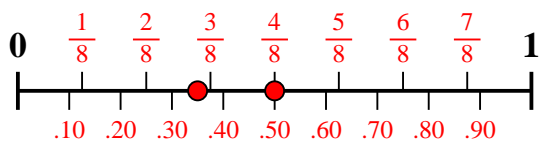
Answers

1. _____
2. _____
3. _____
4. _____
5. _____
6. _____
7. _____
8. _____
9. _____
10. _____

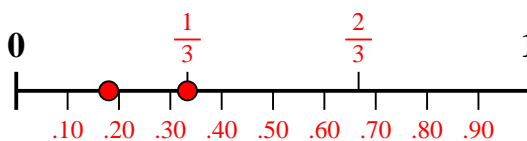


Use the number line to solve each problem.

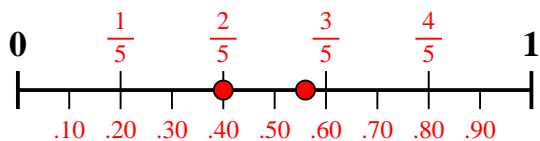
1) Which amount is larger, $\frac{4}{8}$ or 0.35?



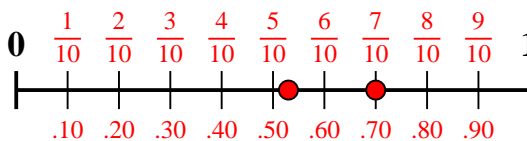
2) Which amount is larger, $\frac{1}{3}$ or 0.18?



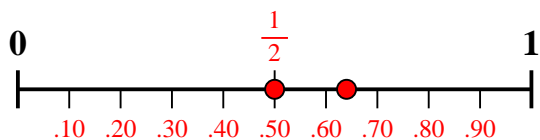
3) Which amount is larger, $\frac{2}{5}$ or 0.56?



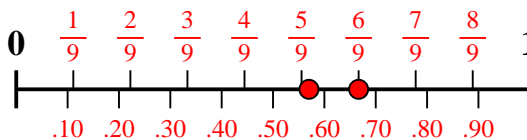
4) Which amount is larger, $\frac{7}{10}$ or 0.53?



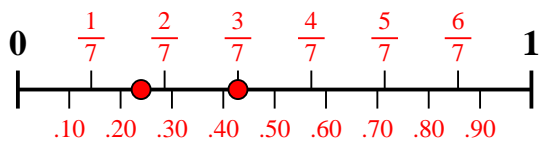
5) Which amount is larger, $\frac{1}{2}$ or 0.64?



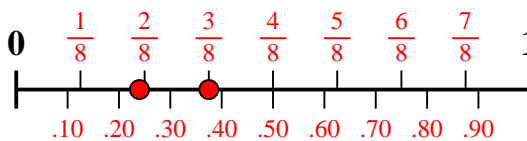
6) Which amount is larger, $\frac{6}{9}$ or 0.57?



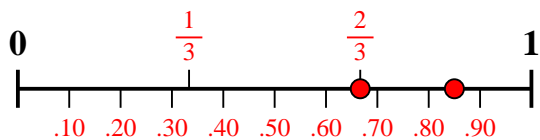
7) Which amount is larger, $\frac{3}{7}$ or 0.24?



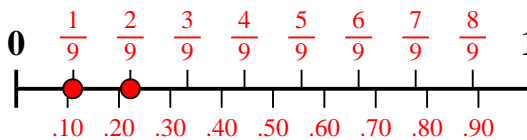
8) Which amount is larger, $\frac{3}{8}$ or 0.24?



9) Which amount is larger, $\frac{2}{3}$ or 0.85?



10) Which amount is larger, $\frac{2}{9}$ or 0.11?



Answers

1. $\frac{4}{8}$
2. $\frac{1}{3}$
3. **0.56**
4. $\frac{7}{10}$
5. **0.64**
6. $\frac{6}{9}$
7. $\frac{3}{7}$
8. $\frac{3}{8}$
9. **0.85**
10. $\frac{2}{9}$