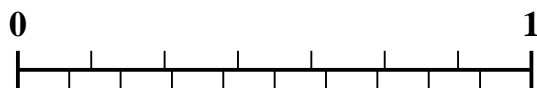




Use the number line to solve each problem.

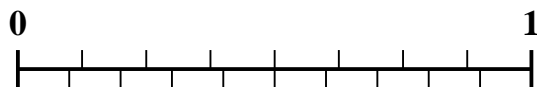
1) Which amount is larger,  $\frac{5}{7}$  or 0.6?



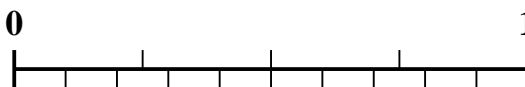
2) Which amount is larger,  $\frac{3}{7}$  or 0.24?




3) Which amount is larger,  $\frac{4}{8}$  or 0.4?



4) Which amount is larger,  $\frac{1}{4}$  or 0.4?



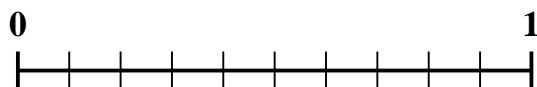
5) Which amount is larger,  $\frac{1}{3}$  or 0.49?



6) Which amount is larger,  $\frac{2}{3}$  or 0.79?



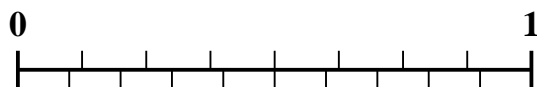
7) Which amount is larger,  $\frac{6}{10}$  or 0.42?



8) Which amount is larger,  $\frac{3}{4}$  or 0.9?



9) Which amount is larger,  $\frac{7}{8}$  or 0.75?



10) Which amount is larger,  $\frac{1}{2}$  or 0.33?



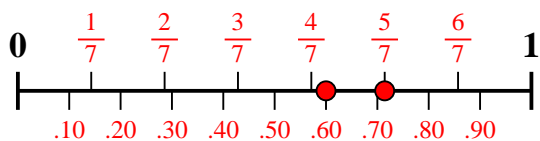
Answers

1. \_\_\_\_\_
2. \_\_\_\_\_
3. \_\_\_\_\_
4. \_\_\_\_\_
5. \_\_\_\_\_
6. \_\_\_\_\_
7. \_\_\_\_\_
8. \_\_\_\_\_
9. \_\_\_\_\_
10. \_\_\_\_\_

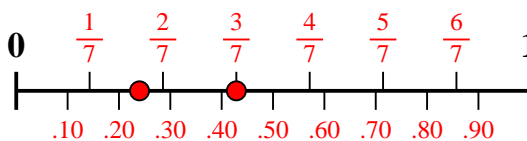


Use the number line to solve each problem.

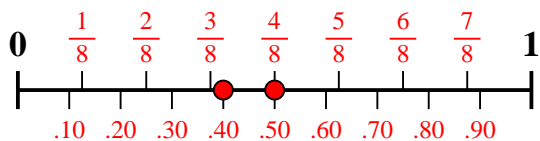
1) Which amount is larger,  $\frac{5}{7}$  or 0.6?



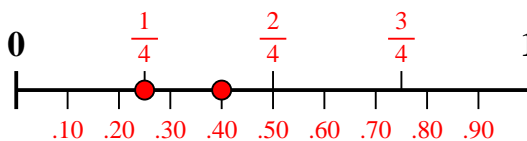
2) Which amount is larger,  $\frac{3}{7}$  or 0.24?



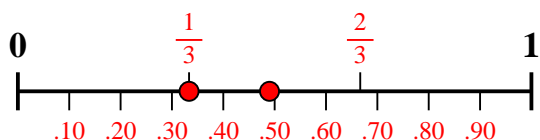
3) Which amount is larger,  $\frac{4}{8}$  or 0.4?



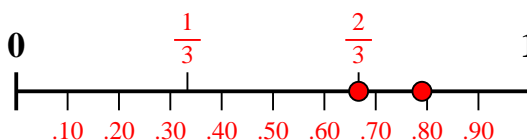
4) Which amount is larger,  $\frac{1}{4}$  or 0.4?



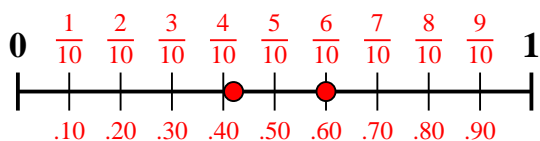
5) Which amount is larger,  $\frac{1}{3}$  or 0.49?



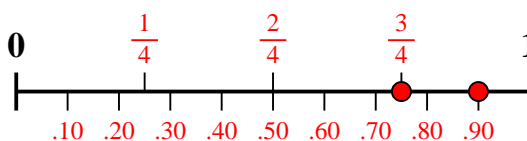
6) Which amount is larger,  $\frac{2}{3}$  or 0.79?



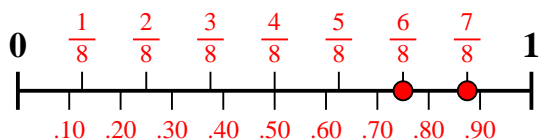
7) Which amount is larger,  $\frac{6}{10}$  or 0.42?



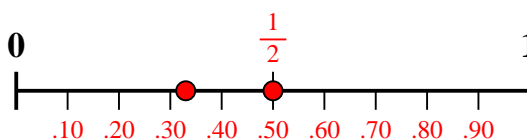
8) Which amount is larger,  $\frac{3}{4}$  or 0.9?



9) Which amount is larger,  $\frac{7}{8}$  or 0.75?



10) Which amount is larger,  $\frac{1}{2}$  or 0.33?



**Answers**

1.  $\frac{5}{7}$
2.  $\frac{3}{7}$
3.  $\frac{4}{8}$
4. **0.4**
5. **0.49**
6. **0.79**
7.  $\frac{6}{10}$
8. **0.9**
9.  $\frac{7}{8}$
10.  $\frac{1}{2}$