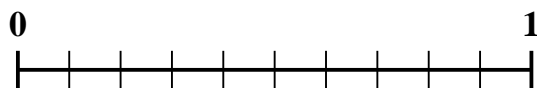




Use the number line to solve each problem.

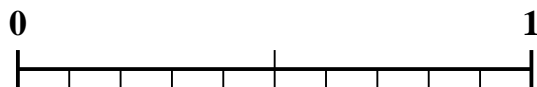
1) Which amount is larger, $\frac{4}{10}$ or 0.52?



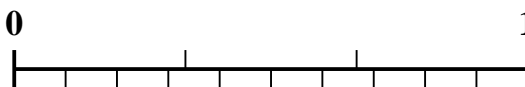
2) Which amount is larger, $\frac{1}{4}$ or 0.39?




3) Which amount is larger, $\frac{1}{2}$ or 0.64?



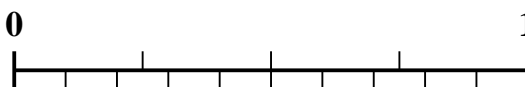
4) Which amount is larger, $\frac{2}{3}$ or 0.55?



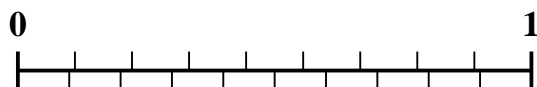
5) Which amount is larger, $\frac{4}{6}$ or 0.85?



6) Which amount is larger, $\frac{2}{4}$ or 0.38?



7) Which amount is larger, $\frac{8}{9}$ or 0.76?



8) Which amount is larger, $\frac{6}{8}$ or 0.6?



9) Which amount is larger, $\frac{5}{7}$ or 0.54?



10) Which amount is larger, $\frac{6}{7}$ or 0.69?



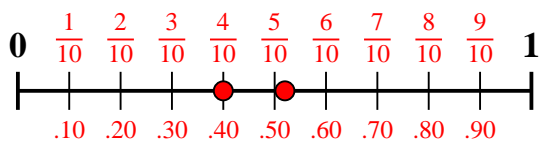
Answers

1. _____
2. _____
3. _____
4. _____
5. _____
6. _____
7. _____
8. _____
9. _____
10. _____

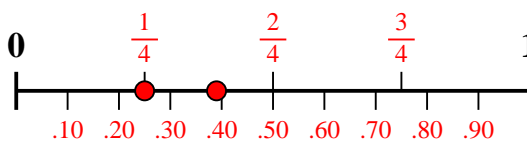


Use the number line to solve each problem.

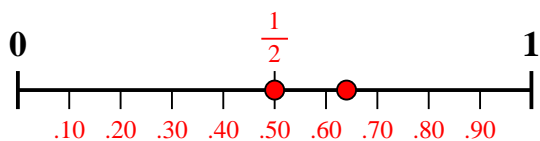
1) Which amount is larger, $\frac{4}{10}$ or 0.52?



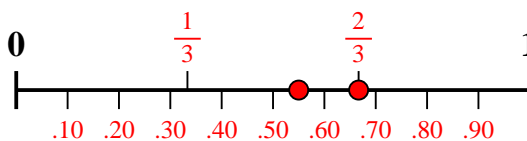
2) Which amount is larger, $\frac{1}{4}$ or 0.39?



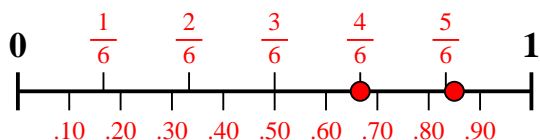
3) Which amount is larger, $\frac{1}{2}$ or 0.64?



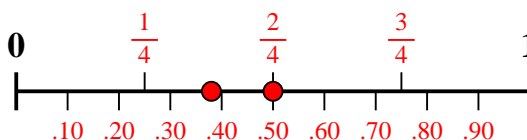
4) Which amount is larger, $\frac{2}{3}$ or 0.55?



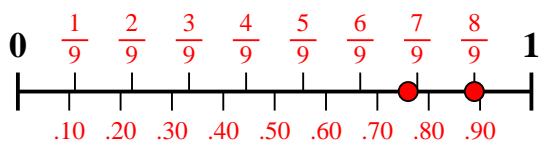
5) Which amount is larger, $\frac{4}{6}$ or 0.85?



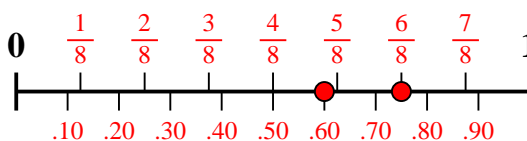
6) Which amount is larger, $\frac{2}{4}$ or 0.38?



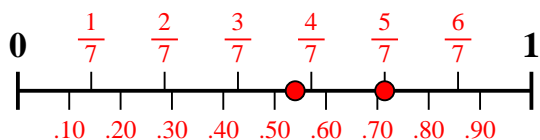
7) Which amount is larger, $\frac{8}{9}$ or 0.76?



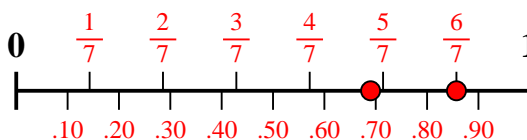
8) Which amount is larger, $\frac{6}{8}$ or 0.6?



9) Which amount is larger, $\frac{5}{7}$ or 0.54?



10) Which amount is larger, $\frac{6}{7}$ or 0.69?



Answers

1. **0.52**
2. **0.39**
3. **0.64**
4. **$\frac{2}{3}$**
5. **0.85**
6. **$\frac{2}{4}$**
7. **$\frac{8}{9}$**
8. **$\frac{6}{8}$**
9. **$\frac{5}{7}$**
10. **$\frac{6}{7}$**