



Match each equation to the answer and write the answer.

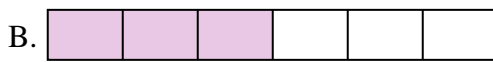
Answers

Ex) $\frac{1}{4} + \frac{1}{4}$



Ex. **I**

1) $\frac{1}{10} + \frac{1}{10} + \frac{1}{10} + \frac{1}{10} + \frac{1}{10} + \frac{1}{10} + \frac{1}{10}$



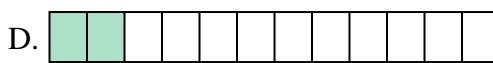
1. _____

2) $\frac{1}{5} + \frac{1}{5}$




2. _____

3) $\frac{1}{5} + \frac{1}{5} + \frac{1}{5}$




3. _____

4) $\frac{1}{8} + \frac{1}{8}$



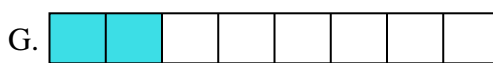
4. _____

5) $\frac{1}{10} + \frac{1}{10} + \frac{1}{10} + \frac{1}{10} + \frac{1}{10}$



5. _____

6) $\frac{1}{3} + \frac{1}{3}$




6. _____

7) $\frac{1}{10} + \frac{1}{10} + \frac{1}{10} + \frac{1}{10}$



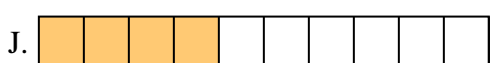
7. _____

8) $\frac{1}{4} + \frac{1}{4} + \frac{1}{4}$



8. _____

9) $\frac{1}{12} + \frac{1}{12}$



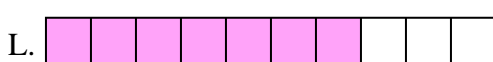
9. _____

10) $\frac{1}{8} + \frac{1}{8} + \frac{1}{8} + \frac{1}{8} + \frac{1}{8} + \frac{1}{8}$




10. _____

11) $\frac{1}{12} + \frac{1}{12} + \frac{1}{12} + \frac{1}{12}$



11. _____

12) $\frac{1}{6} + \frac{1}{6} + \frac{1}{6}$




12. _____

13) $\frac{1}{5} + \frac{1}{5} + \frac{1}{5} + \frac{1}{5}$




13. _____

14) $\frac{1}{8} + \frac{1}{8} + \frac{1}{8} + \frac{1}{8}$



14. _____

15) $\frac{1}{10} + \frac{1}{10} + \frac{1}{10}$



15. _____

16. _____

17. _____

18. _____

19. _____

20. _____

21. _____

22. _____

23. _____

24. _____

25. _____

26. _____

27. _____

28. _____

29. _____

30. _____

31. _____

32. _____

33. _____

34. _____

35. _____

36. _____

37. _____

38. _____

39. _____

40. _____

41. _____

42. _____

43. _____

44. _____

45. _____

46. _____

47. _____

48. _____

49. _____

50. _____



Match each equation to the answer and write the answer.

Ex) $\frac{1}{4} + \frac{1}{4}$



Answers

Ex. I

1) $\frac{1}{10} + \frac{1}{10} + \frac{1}{10} + \frac{1}{10} + \frac{1}{10} + \frac{1}{10} + \frac{1}{10}$



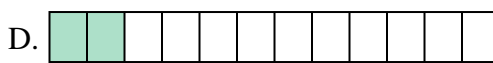
1. L

2) $\frac{1}{5} + \frac{1}{5}$




2. K

3) $\frac{1}{5} + \frac{1}{5} + \frac{1}{5}$




3. M

4) $\frac{1}{8} + \frac{1}{8}$



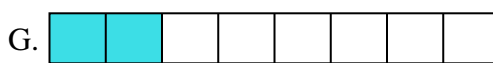
4. G

5) $\frac{1}{10} + \frac{1}{10} + \frac{1}{10} + \frac{1}{10} + \frac{1}{10}$



5. E

6) $\frac{1}{3} + \frac{1}{3}$




6. N

7) $\frac{1}{10} + \frac{1}{10} + \frac{1}{10} + \frac{1}{10}$



7. J

8) $\frac{1}{4} + \frac{1}{4} + \frac{1}{4}$



8. A

9) $\frac{1}{12} + \frac{1}{12}$



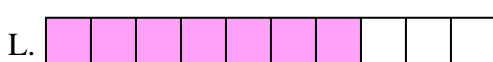
9. D

10) $\frac{1}{8} + \frac{1}{8} + \frac{1}{8} + \frac{1}{8} + \frac{1}{8} + \frac{1}{8}$




10. C

11) $\frac{1}{12} + \frac{1}{12} + \frac{1}{12} + \frac{1}{12}$



11. H

12) $\frac{1}{6} + \frac{1}{6} + \frac{1}{6}$




12. B

13) $\frac{1}{5} + \frac{1}{5} + \frac{1}{5} + \frac{1}{5}$




13. P

14) $\frac{1}{8} + \frac{1}{8} + \frac{1}{8} + \frac{1}{8}$



14. O

15) $\frac{1}{10} + \frac{1}{10} + \frac{1}{10}$



15. F