



Match each equation to the answer and write the answer.

**Answers**

Ex)  $\frac{1}{5} + \frac{1}{5}$



Ex.         **G**        

1)  $\frac{1}{10} + \frac{1}{10}$



1. \_\_\_\_\_

2)  $\frac{1}{5} + \frac{1}{5} + \frac{1}{5}$



2. \_\_\_\_\_

3)  $\frac{1}{3} + \frac{1}{3}$




3. \_\_\_\_\_

4)  $\frac{1}{12} + \frac{1}{12}$



4. \_\_\_\_\_

5)  $\frac{1}{12} + \frac{1}{12} + \frac{1}{12} + \frac{1}{12}$



5. \_\_\_\_\_

6)  $\frac{1}{4} + \frac{1}{4}$



6. \_\_\_\_\_

7)  $\frac{1}{6} + \frac{1}{6}$



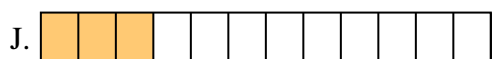
7. \_\_\_\_\_

8)  $\frac{1}{4} + \frac{1}{4} + \frac{1}{4}$



8. \_\_\_\_\_

9)  $\frac{1}{10} + \frac{1}{10} + \frac{1}{10} + \frac{1}{10}$




9. \_\_\_\_\_

10)  $\frac{1}{6} + \frac{1}{6} + \frac{1}{6} + \frac{1}{6} + \frac{1}{6}$



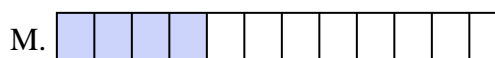
10. \_\_\_\_\_

11)  $\frac{1}{8} + \frac{1}{8} + \frac{1}{8} + \frac{1}{8}$



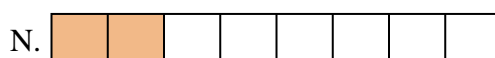
11. \_\_\_\_\_

12)  $\frac{1}{12} + \frac{1}{12} + \frac{1}{12}$




12. \_\_\_\_\_

13)  $\frac{1}{8} + \frac{1}{8}$




13. \_\_\_\_\_

14)  $\frac{1}{6} + \frac{1}{6} + \frac{1}{6} + \frac{1}{6}$



14. \_\_\_\_\_

15)  $\frac{1}{8} + \frac{1}{8} + \frac{1}{8} + \frac{1}{8} + \frac{1}{8}$



15. \_\_\_\_\_

\_\_\_\_\_

\_\_\_\_\_

\_\_\_\_\_

\_\_\_\_\_

\_\_\_\_\_

\_\_\_\_\_

\_\_\_\_\_

\_\_\_\_\_

\_\_\_\_\_

\_\_\_\_\_

\_\_\_\_\_

\_\_\_\_\_

\_\_\_\_\_

\_\_\_\_\_

\_\_\_\_\_

\_\_\_\_\_



Match each equation to the answer and write the answer.

Ex)  $\frac{1}{5} + \frac{1}{5}$



Answers

Ex.     **G**    

1)  $\frac{1}{10} + \frac{1}{10}$




1.     **E**    

2)  $\frac{1}{5} + \frac{1}{5} + \frac{1}{5}$




2.     **O**    

3)  $\frac{1}{3} + \frac{1}{3}$




3.     **K**    

4)  $\frac{1}{12} + \frac{1}{12}$



4.     **F**    

5)  $\frac{1}{12} + \frac{1}{12} + \frac{1}{12} + \frac{1}{12}$



6.     **D**    

6)  $\frac{1}{4} + \frac{1}{4}$



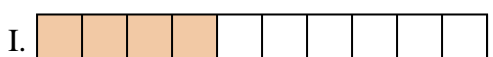
7.     **A**    

7)  $\frac{1}{6} + \frac{1}{6}$



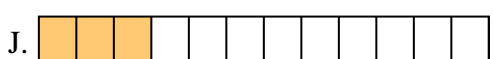
8.     **P**    

8)  $\frac{1}{4} + \frac{1}{4} + \frac{1}{4}$



9.     **I**    

9)  $\frac{1}{10} + \frac{1}{10} + \frac{1}{10} + \frac{1}{10}$




10.     **B**    

10)  $\frac{1}{6} + \frac{1}{6} + \frac{1}{6} + \frac{1}{6} + \frac{1}{6}$



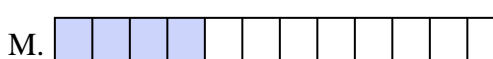
11.     **C**    

11)  $\frac{1}{8} + \frac{1}{8} + \frac{1}{8} + \frac{1}{8}$



12.     **J**    

12)  $\frac{1}{12} + \frac{1}{12} + \frac{1}{12}$




13.     **N**    

13)  $\frac{1}{8} + \frac{1}{8}$



14.     **L**    

14)  $\frac{1}{6} + \frac{1}{6} + \frac{1}{6} + \frac{1}{6}$



15.     **H**    

15)  $\frac{1}{8} + \frac{1}{8} + \frac{1}{8} + \frac{1}{8} + \frac{1}{8}$

