



Use the visual model to solve each problem.

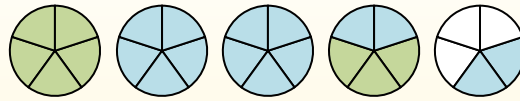
$$1 \frac{3}{5} + 2 \frac{4}{5} = ?$$



To solve a fraction addition problem one strategy is to shade in the whole amounts first (1 & 2).



Next fill in the fraction amounts ($\frac{3}{5}$ & $\frac{4}{5}$).



When all of the pieces are filled in we can see that $1 \frac{3}{5} + 2 \frac{4}{5} = 4 \frac{2}{5}$

1) $3 \frac{3}{4} + 2 \frac{3}{4} =$

2) $2 \frac{1}{5} + 1 \frac{4}{5} =$

3) $2 \frac{2}{8} + 3 \frac{5}{8} =$

4) $3 \frac{2}{3} + 3 \frac{1}{3} =$

5) $2 \frac{1}{3} + 2 \frac{1}{3} =$

6) $2 \frac{1}{5} + 3 \frac{1}{5} =$

7) $3 \frac{1}{3} + 2 \frac{1}{3} =$

8) $2 \frac{1}{3} + 2 \frac{2}{3} =$

9) $2 \frac{4}{8} + 2 \frac{4}{8} =$

10) $2 \frac{4}{10} + 2 \frac{5}{10} =$

Answers

1. _____
2. _____
3. _____
4. _____
5. _____
6. _____
7. _____
8. _____
9. _____
10. _____



Use the visual model to solve each problem.

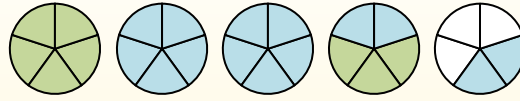
$$1 \frac{3}{5} + 2 \frac{4}{5} = ?$$



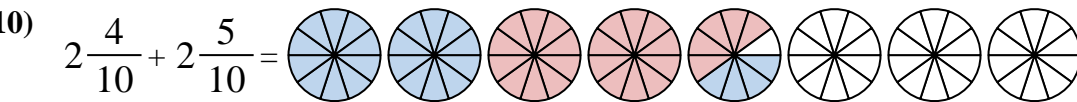
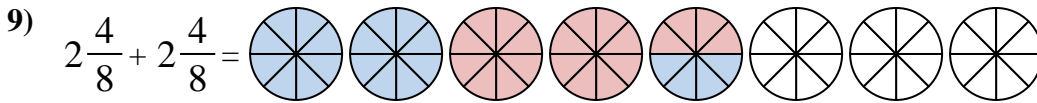
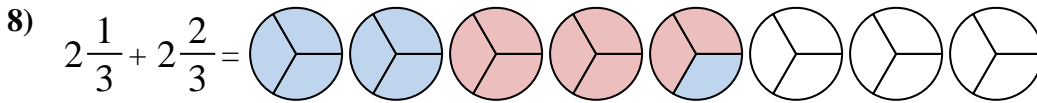
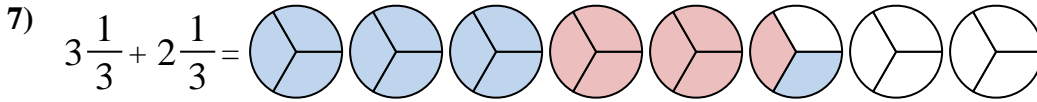
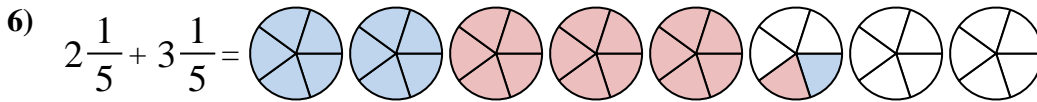
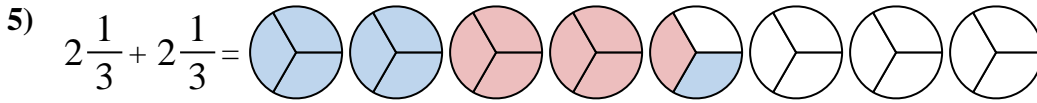
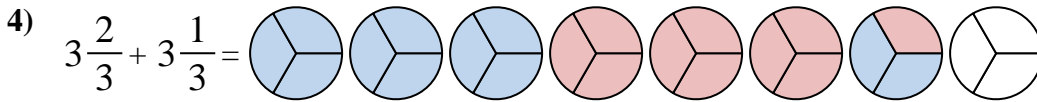
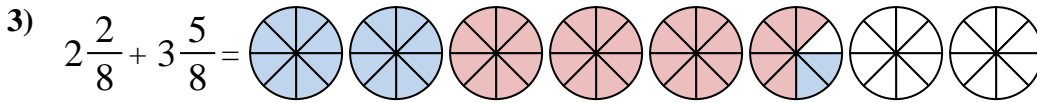
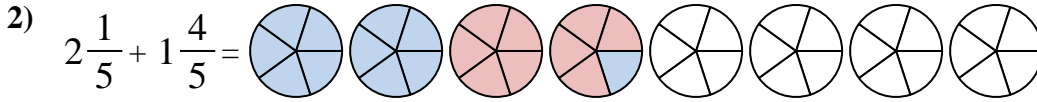
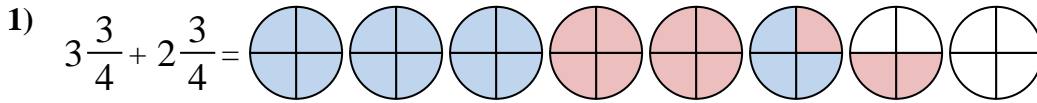
To solve a fraction addition problem one strategy is to shade in the whole amounts first (1 & 2).



Next fill in the fraction amounts ($\frac{3}{5}$ & $\frac{4}{5}$).



When all of the pieces are filled in we can see that $1 \frac{3}{5} + 2 \frac{4}{5} = 4 \frac{2}{5}$



Answers

1. $6 \frac{2}{4}$

2. $4 \frac{0}{5}$

3. $5 \frac{7}{8}$

4. $7 \frac{0}{3}$

5. $4 \frac{2}{3}$

6. $5 \frac{2}{5}$

7. $5 \frac{2}{3}$

8. $5 \frac{0}{3}$

9. $5 \frac{0}{8}$

10. $4 \frac{9}{10}$