



Use the visual model to solve each problem.

$$1 \frac{3}{5} + 2 \frac{4}{5} = ?$$



To solve a fraction addition problem one strategy is to shade in the whole amounts first (1 & 2).



Next fill in the fraction amounts ($\frac{3}{5}$ & $\frac{4}{5}$).



When all of the pieces are filled in we can see that $1 \frac{3}{5} + 2 \frac{4}{5} = 4 \frac{2}{5}$

Answers

1. _____
2. _____
3. _____
4. _____
5. _____
6. _____
7. _____
8. _____
9. _____
10. _____

1) $3 \frac{8}{10} + 1 \frac{3}{10} =$

2) $3 \frac{4}{5} + 1 \frac{4}{5} =$

3) $2 \frac{1}{10} + 1 \frac{6}{10} =$

4) $3 \frac{7}{12} + 1 \frac{5}{12} =$

5) $3 \frac{2}{3} + 3 \frac{2}{3} =$

6) $3 \frac{2}{5} + 1 \frac{1}{5} =$

7) $3 \frac{1}{8} + 3 \frac{2}{8} =$

8) $3 \frac{8}{12} + 1 \frac{2}{12} =$


9) $2 \frac{3}{4} + 2 \frac{3}{4} =$

10) $1 \frac{1}{3} + 3 \frac{2}{3} =$




Use the visual model to solve each problem.


$1\frac{3}{5} + 2\frac{4}{5} = ?$



To solve a fraction addition problem one strategy is to shade in the whole amounts first (1 & 2).

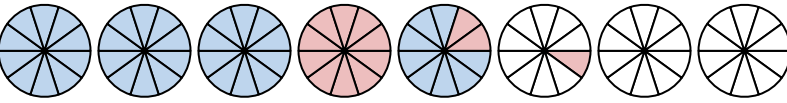


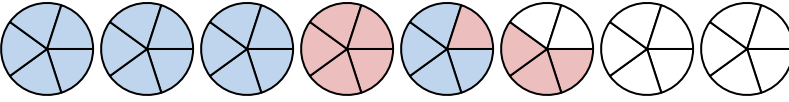
Next fill in the fraction amounts ($\frac{3}{5}$ & $\frac{4}{5}$).

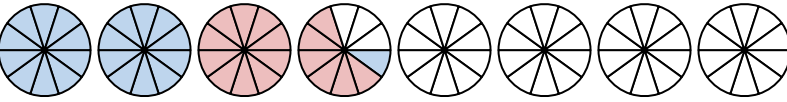


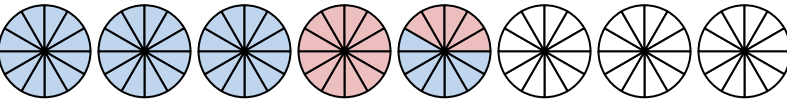
When all of the pieces are filled in we can see that $1\frac{3}{5} + 2\frac{4}{5} = 4\frac{2}{5}$

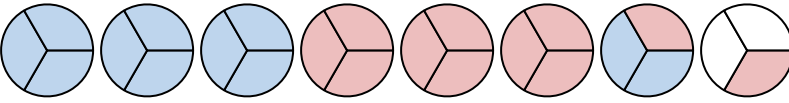
Answers

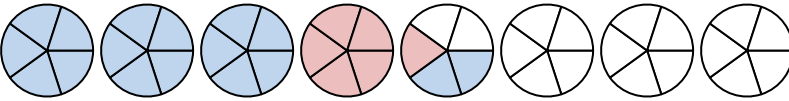
1) $3\frac{8}{10} + 1\frac{3}{10} =$ 

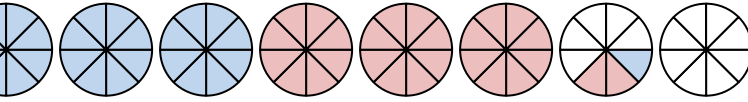
2) $3\frac{4}{5} + 1\frac{4}{5} =$ 

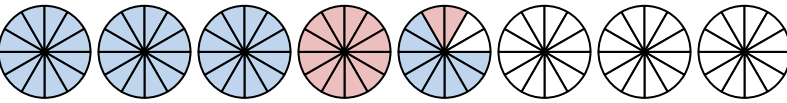
3) $2\frac{1}{10} + 1\frac{6}{10} =$ 

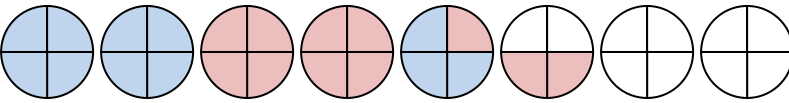
4) $3\frac{7}{12} + 1\frac{5}{12} =$ 

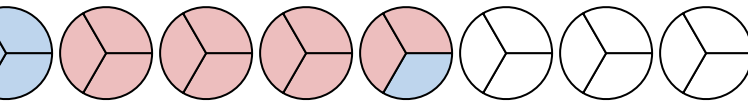
5) $3\frac{2}{3} + 3\frac{2}{3} =$ 

6) $3\frac{2}{5} + 1\frac{1}{5} =$ 

7) $3\frac{1}{8} + 3\frac{2}{8} =$ 

8) $3\frac{8}{12} + 1\frac{2}{12} =$ 

9) $2\frac{3}{4} + 2\frac{3}{4} =$ 

10) $1\frac{1}{3} + 3\frac{2}{3} =$ 

1. 5¹/₁₀
2. 5³/₅
3. 3⁷/₁₀
4. 5⁰/₁₂
5. 7¹/₃
6. 4³/₅
7. 6³/₈
8. 4¹⁰/₁₂
9. 5²/₄
10. 5⁰/₃