



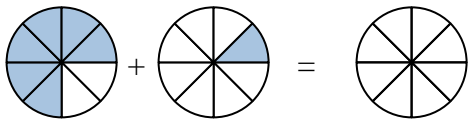
Shade in the fraction to solve the problem.

Ex)



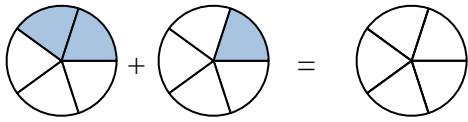
Ex.  $\frac{3}{7}$     $\frac{2}{7}$     $\frac{5}{7}$

1)



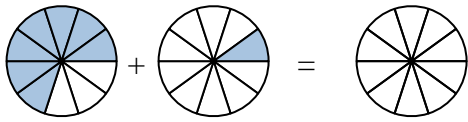
1. \_\_\_\_\_

2)



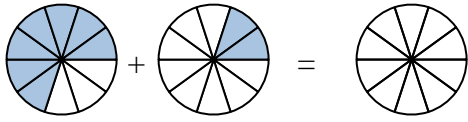
2. \_\_\_\_\_

3)



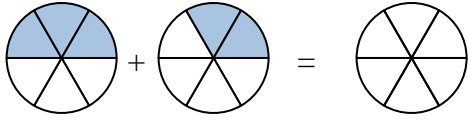
3. \_\_\_\_\_

4)



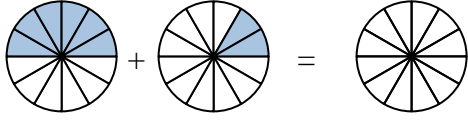
4. \_\_\_\_\_

5)



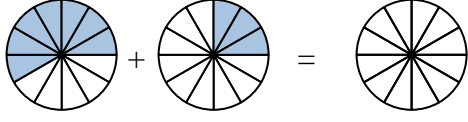
5. \_\_\_\_\_

6)



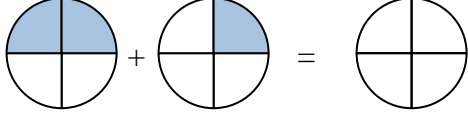
6. \_\_\_\_\_

7)



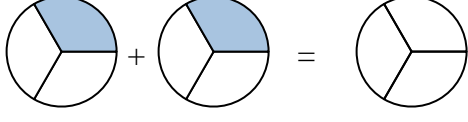
7. \_\_\_\_\_

8)



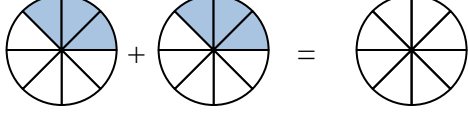
8. \_\_\_\_\_

9)



9. \_\_\_\_\_

10)

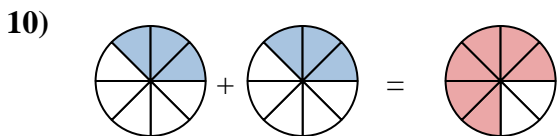
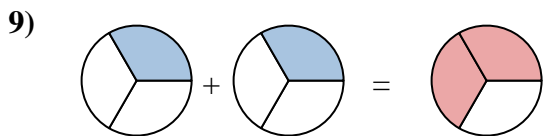
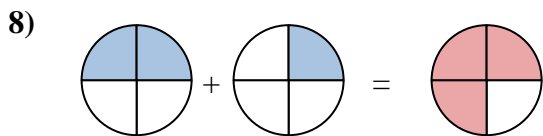
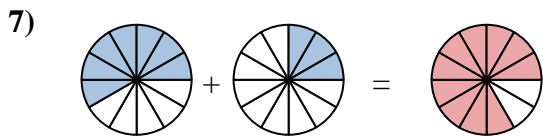
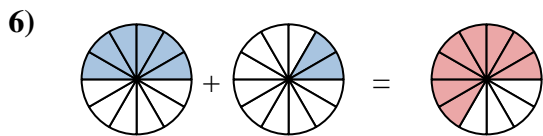
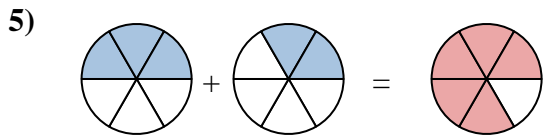
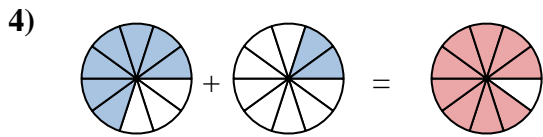
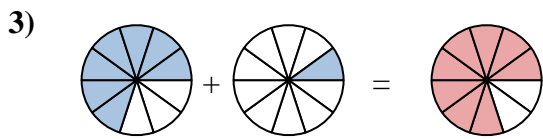
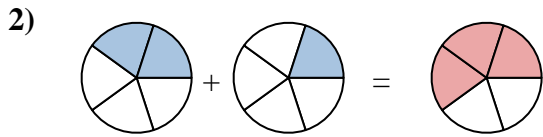
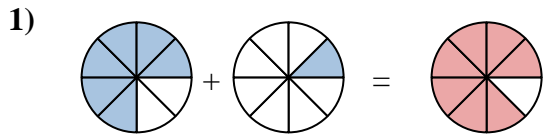


10. \_\_\_\_\_

**Answers**



Shade in the fraction to solve the problem.



**Answers**

Ex.	$\frac{3}{7}$	$\frac{2}{7}$	$\frac{5}{7}$
1.	$\frac{6}{8}$	$\frac{1}{8}$	$\frac{7}{8}$
2.	$\frac{2}{5}$	$\frac{1}{5}$	$\frac{3}{5}$
3.	$\frac{7}{10}$	$\frac{1}{10}$	$\frac{8}{10}$
4.	$\frac{7}{10}$	$\frac{2}{10}$	$\frac{9}{10}$
5.	$\frac{3}{6}$	$\frac{2}{6}$	$\frac{5}{6}$
6.	$\frac{6}{12}$	$\frac{2}{12}$	$\frac{8}{12}$
7.	$\frac{7}{12}$	$\frac{3}{12}$	$\frac{10}{12}$
8.	$\frac{2}{4}$	$\frac{1}{4}$	$\frac{3}{4}$
9.	$\frac{1}{3}$	$\frac{1}{3}$	$\frac{2}{3}$
10.	$\frac{3}{8}$	$\frac{3}{8}$	$\frac{6}{8}$