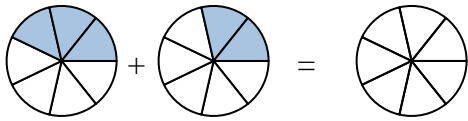




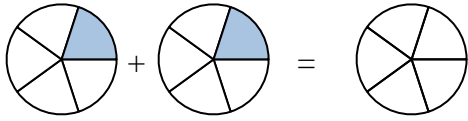
Shade in the fraction to solve the problem.

Ex)



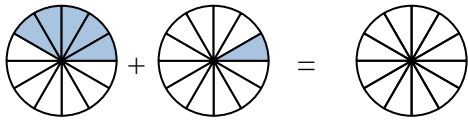
Ex. $\frac{3}{7}$ $\frac{2}{7}$ $\frac{5}{7}$

1)



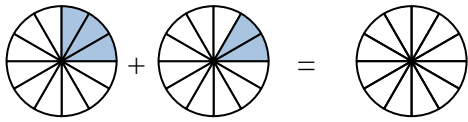
1. _____

2)



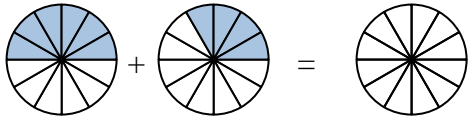
2. _____

3)



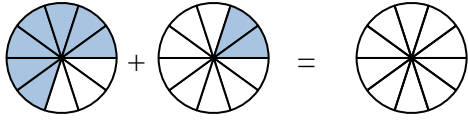
3. _____

4)



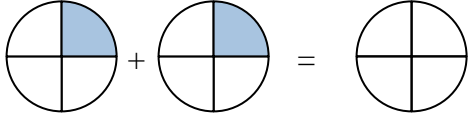
4. _____

5)



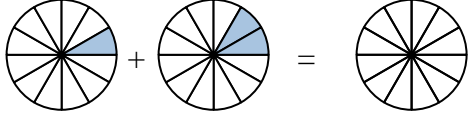
5. _____

6)



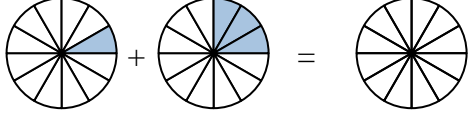
6. _____

7)



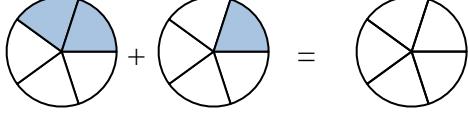
7. _____

8)



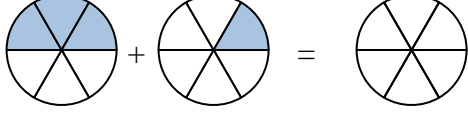
8. _____

9)



9. _____

10)

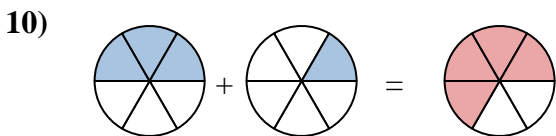
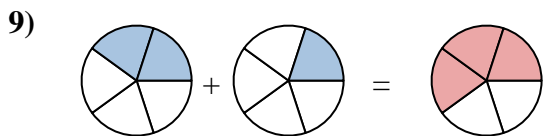
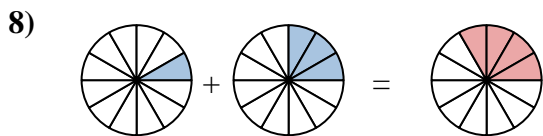
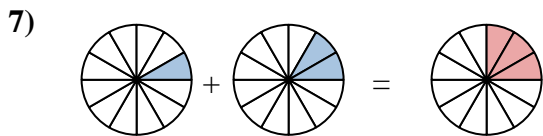
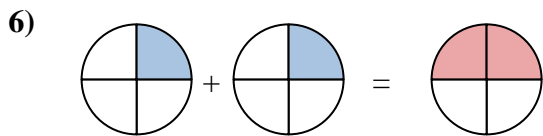
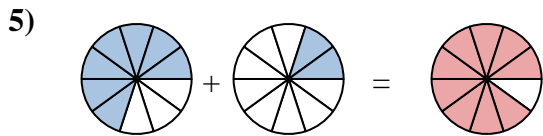
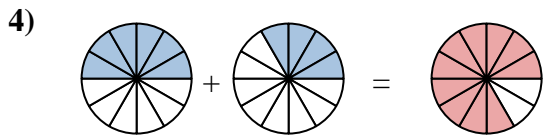
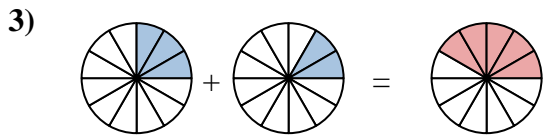
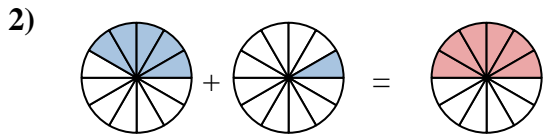
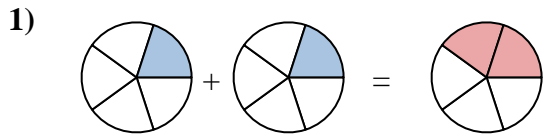
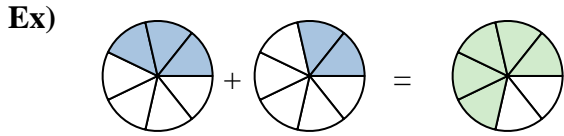


10. _____

Answers



Shade in the fraction to solve the problem.



Answers

Ex. $\frac{3}{7}$ $\frac{2}{7}$ $\frac{5}{7}$

1. $\frac{1}{5}$ $\frac{1}{5}$ $\frac{2}{5}$

2. $\frac{5}{12}$ $\frac{1}{12}$ $\frac{6}{12}$

3. $\frac{3}{12}$ $\frac{2}{12}$ $\frac{5}{12}$

4. $\frac{6}{12}$ $\frac{4}{12}$ $\frac{10}{12}$

5. $\frac{7}{10}$ $\frac{2}{10}$ $\frac{9}{10}$

6. $\frac{1}{4}$ $\frac{1}{4}$ $\frac{2}{4}$

7. $\frac{1}{12}$ $\frac{2}{12}$ $\frac{3}{12}$

8. $\frac{1}{12}$ $\frac{3}{12}$ $\frac{4}{12}$

9. $\frac{2}{5}$ $\frac{1}{5}$ $\frac{3}{5}$

10. $\frac{3}{6}$ $\frac{1}{6}$ $\frac{4}{6}$