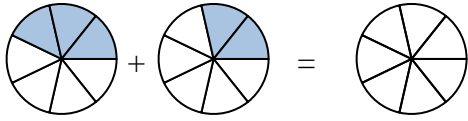




Shade in the fraction to solve the problem.

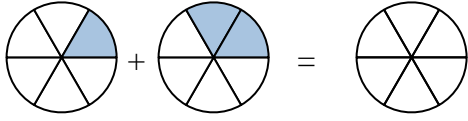
**Answers**

Ex)



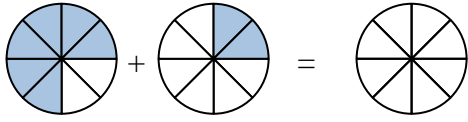
Ex.  $\frac{3}{7}$     $\frac{2}{7}$     $\frac{5}{7}$

1)



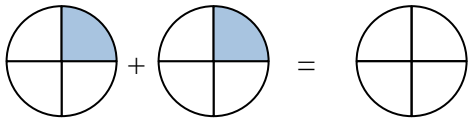
1. \_\_\_\_\_

2)



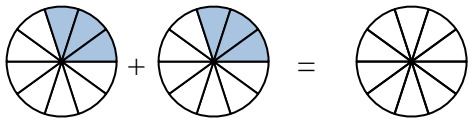
2. \_\_\_\_\_

3)



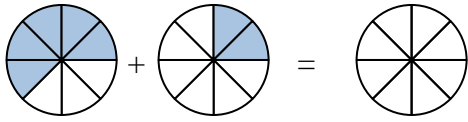
3. \_\_\_\_\_

4)



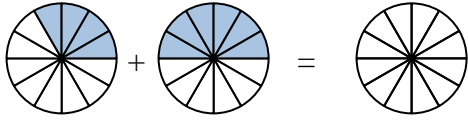
4. \_\_\_\_\_

5)



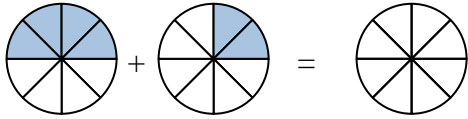
5. \_\_\_\_\_

6)



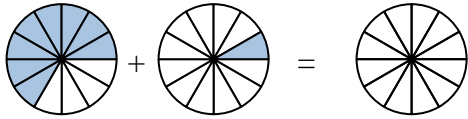
6. \_\_\_\_\_

7)



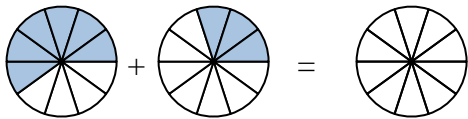
7. \_\_\_\_\_

8)



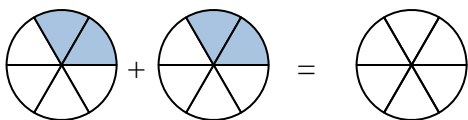
8. \_\_\_\_\_

9)



9. \_\_\_\_\_

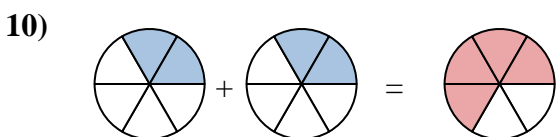
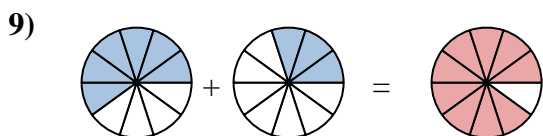
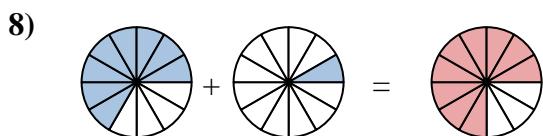
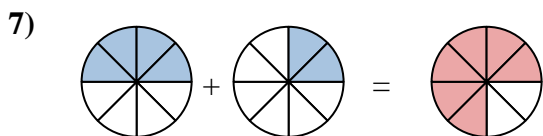
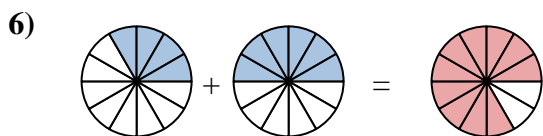
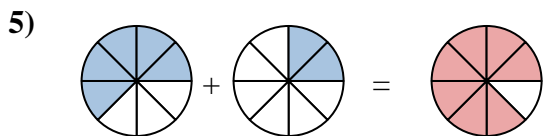
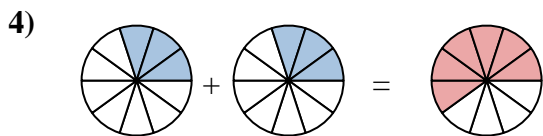
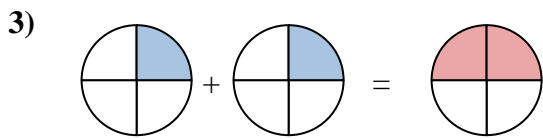
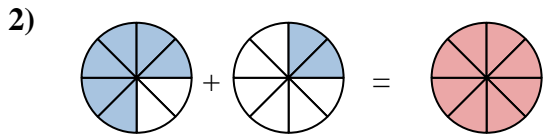
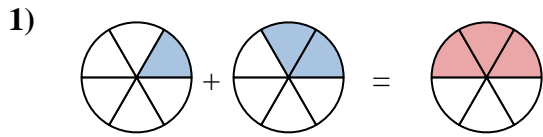
10)



10. \_\_\_\_\_



Shade in the fraction to solve the problem.



Answers

Ex.  $\frac{3}{7}$     $\frac{2}{7}$     $\frac{5}{7}$

1.  $\frac{1}{6}$     $\frac{2}{6}$     $\frac{3}{6}$

2.  $\frac{6}{8}$     $\frac{2}{8}$     $\frac{8}{8}$

3.  $\frac{1}{4}$     $\frac{1}{4}$     $\frac{2}{4}$

4.  $\frac{3}{10}$     $\frac{3}{10}$     $\frac{6}{10}$

5.  $\frac{5}{8}$     $\frac{2}{8}$     $\frac{7}{8}$

6.  $\frac{4}{12}$     $\frac{6}{12}$     $\frac{10}{12}$

7.  $\frac{4}{8}$     $\frac{2}{8}$     $\frac{6}{8}$

8.  $\frac{8}{12}$     $\frac{1}{12}$     $\frac{9}{12}$

9.  $\frac{6}{10}$     $\frac{3}{10}$     $\frac{9}{10}$

10.  $\frac{2}{6}$     $\frac{2}{6}$     $\frac{4}{6}$