



Determine which letter best represents the sum.

1)  $\frac{3}{4} + \frac{1}{4}$

3)  $\frac{1}{3} + \frac{2}{3}$

5)  $\frac{1}{3} + \frac{1}{3}$

7)  $\frac{3}{5} + \frac{2}{5}$

9)  $\frac{1}{2} + \frac{1}{2}$

11)  $\frac{1}{10} + \frac{9}{10}$

13)  $\frac{5}{12} + \frac{7}{12}$

2)  $\frac{8}{10} + \frac{1}{10}$

4)  $\frac{2}{8} + \frac{7}{8}$

6)  $\frac{8}{10} + \frac{5}{10}$

8)  $\frac{1}{8} + \frac{2}{8}$

10)  $\frac{2}{6} + \frac{4}{6}$

12)  $\frac{1}{4} + \frac{1}{4}$

14)  $\frac{7}{8} + \frac{6}{8}$

Answers

1. \_\_\_\_\_

2. \_\_\_\_\_

3. \_\_\_\_\_

4. \_\_\_\_\_

5. \_\_\_\_\_

6. \_\_\_\_\_

7. \_\_\_\_\_

8. \_\_\_\_\_

9. \_\_\_\_\_

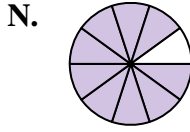
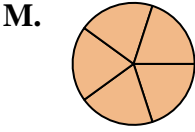
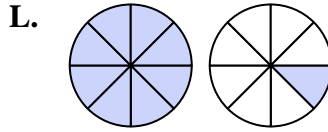
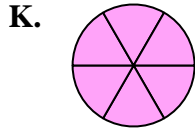
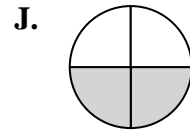
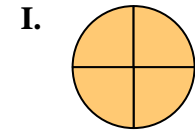
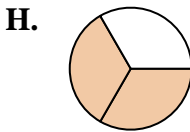
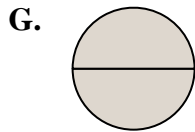
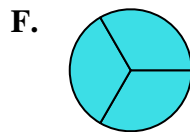
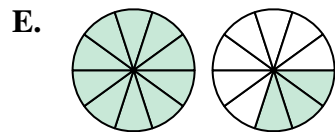
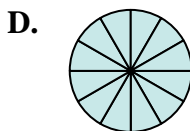
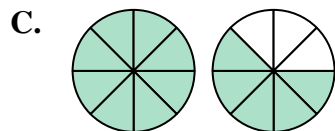
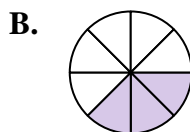
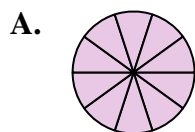
10. \_\_\_\_\_

11. \_\_\_\_\_

12. \_\_\_\_\_

13. \_\_\_\_\_

14. \_\_\_\_\_





Determine which letter best represents the sum.

1)  $\frac{3}{4} + \frac{1}{4}$

3)  $\frac{1}{3} + \frac{2}{3}$

5)  $\frac{1}{3} + \frac{1}{3}$

7)  $\frac{3}{5} + \frac{2}{5}$

9)  $\frac{1}{2} + \frac{1}{2}$

11)  $\frac{1}{10} + \frac{9}{10}$

13)  $\frac{5}{12} + \frac{7}{12}$

2)  $\frac{8}{10} + \frac{1}{10}$

4)  $\frac{2}{8} + \frac{7}{8}$

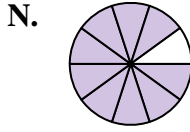
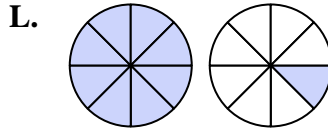
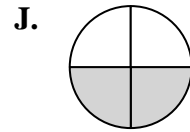
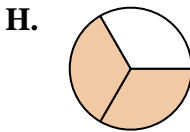
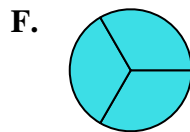
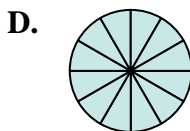
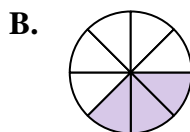
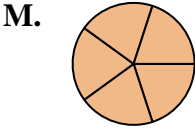
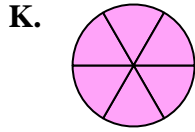
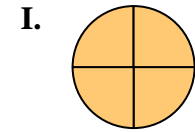
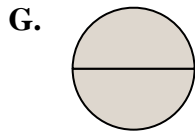
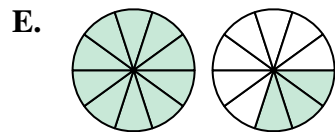
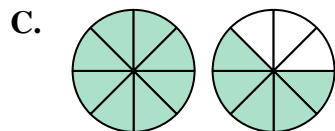
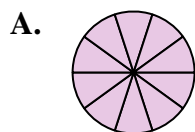
6)  $\frac{8}{10} + \frac{5}{10}$

8)  $\frac{1}{8} + \frac{2}{8}$

10)  $\frac{2}{6} + \frac{4}{6}$

12)  $\frac{1}{4} + \frac{1}{4}$

14)  $\frac{7}{8} + \frac{6}{8}$



**Answers**

1. **I**  $\frac{4}{4}$

2. **N**  $\frac{9}{10}$

3. **F**  $\frac{3}{3}$

4. **L**  $1\frac{1}{8}$

5. **H**  $\frac{2}{3}$

6. **E**  $1\frac{3}{10}$

7. **M**  $\frac{5}{5}$

8. **B**  $\frac{3}{8}$

9. **G**  $\frac{2}{2}$

10. **K**  $\frac{6}{6}$

11. **A**  $\frac{10}{10}$

12. **J**  $\frac{2}{4}$

13. **D**  $\frac{12}{12}$

14. **C**  $1\frac{5}{8}$