



Determine which letter best represents the sum.

1)  $\frac{2}{3} + \frac{1}{3}$

3)  $\frac{3}{6} + \frac{1}{6}$

5)  $\frac{5}{6} + \frac{4}{6}$

7)  $\frac{5}{12} + \frac{1}{12}$

9)  $\frac{4}{8} + \frac{1}{8}$

11)  $\frac{1}{5} + \frac{1}{5}$

13)  $\frac{1}{4} + \frac{3}{4}$

2)  $\frac{1}{2} + \frac{1}{2}$

4)  $\frac{3}{5} + \frac{2}{5}$

6)  $\frac{4}{12} + \frac{8}{12}$

8)  $\frac{4}{6} + \frac{2}{6}$

10)  $\frac{2}{3} + \frac{2}{3}$

12)  $\frac{2}{10} + \frac{7}{10}$

14)  $\frac{3}{4} + \frac{2}{4}$

Answers

1. \_\_\_\_\_

2. \_\_\_\_\_

3. \_\_\_\_\_

4. \_\_\_\_\_

5. \_\_\_\_\_

6. \_\_\_\_\_

7. \_\_\_\_\_

8. \_\_\_\_\_

9. \_\_\_\_\_

10. \_\_\_\_\_

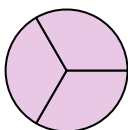
11. \_\_\_\_\_

12. \_\_\_\_\_

13. \_\_\_\_\_

14. \_\_\_\_\_

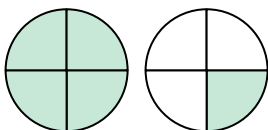
A.



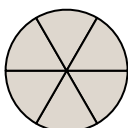
C.



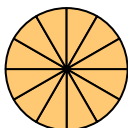
E.



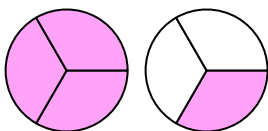
G.



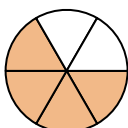
I.



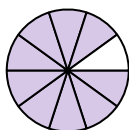
K.



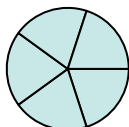
M.



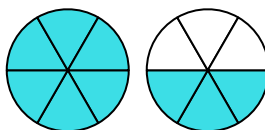
B.



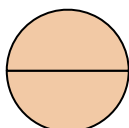
D.



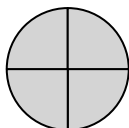
F.



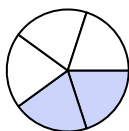
H.



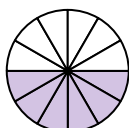
J.



L.



N.





Determine which letter best represents the sum.

1)  $\frac{2}{3} + \frac{1}{3}$

3)  $\frac{3}{6} + \frac{1}{6}$

5)  $\frac{5}{6} + \frac{4}{6}$

7)  $\frac{5}{12} + \frac{1}{12}$

9)  $\frac{4}{8} + \frac{1}{8}$

11)  $\frac{1}{5} + \frac{1}{5}$

13)  $\frac{1}{4} + \frac{3}{4}$

2)  $\frac{1}{2} + \frac{1}{2}$

4)  $\frac{3}{5} + \frac{2}{5}$

6)  $\frac{4}{12} + \frac{8}{12}$

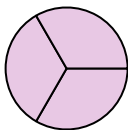
8)  $\frac{4}{6} + \frac{2}{6}$

10)  $\frac{2}{3} + \frac{2}{3}$

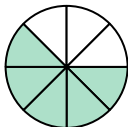
12)  $\frac{2}{10} + \frac{7}{10}$

14)  $\frac{3}{4} + \frac{2}{4}$

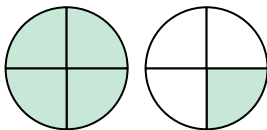
A.



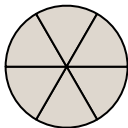
C.



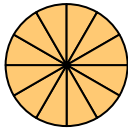
E.



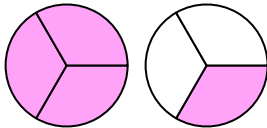
G.



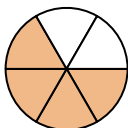
I.



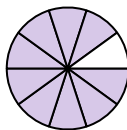
K.



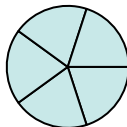
M.



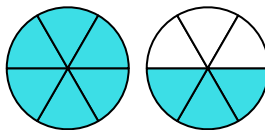
B.



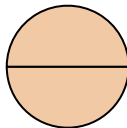
D.



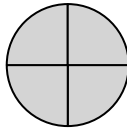
F.



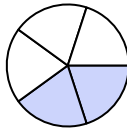
H.



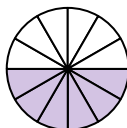
J.



L.



N.

**Answers**1. **A**  $\frac{3}{3}$ 2. **H**  $\frac{2}{2}$ 3. **M**  $\frac{4}{6}$ 4. **D**  $\frac{5}{5}$ 5. **F**  $1\frac{3}{6}$ 6. **I**  $\frac{12}{12}$ 7. **N**  $\frac{6}{12}$ 8. **G**  $\frac{6}{6}$ 9. **C**  $\frac{5}{8}$ 10. **K**  $1\frac{1}{3}$ 11. **L**  $\frac{2}{5}$ 12. **B**  $\frac{9}{10}$ 13. **J**  $\frac{4}{4}$ 14. **E**  $1\frac{1}{4}$