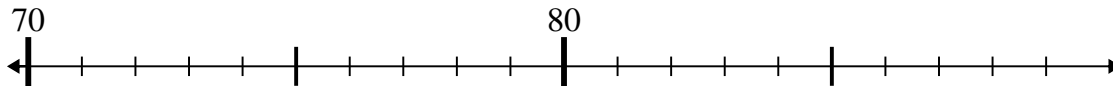




Use the numberlines to solve each problem.

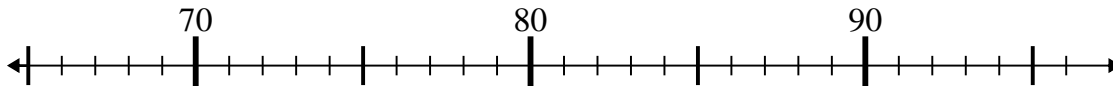
Answers

1)  $76 - 0 =$



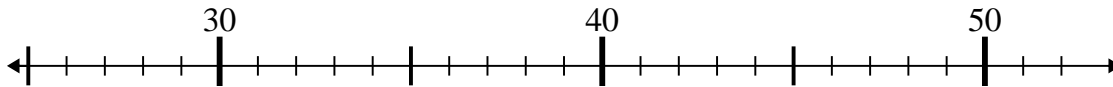
1. \_\_\_\_\_

2)  $66 + 21 =$



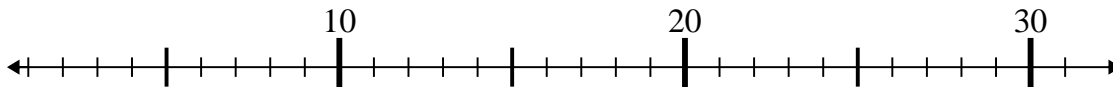
2. \_\_\_\_\_

3)  $35 + 12 =$



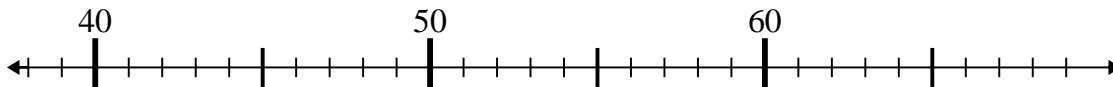
3. \_\_\_\_\_

4)  $18 + 8 =$



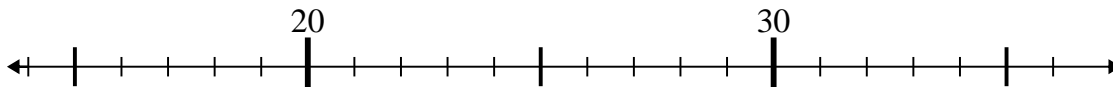
4. \_\_\_\_\_

5)  $43 - 4 =$



5. \_\_\_\_\_

6)  $36 - 17 =$



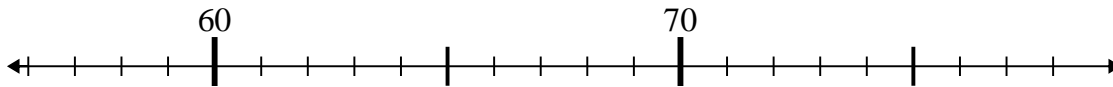
6. \_\_\_\_\_

7)  $29 - 9 =$



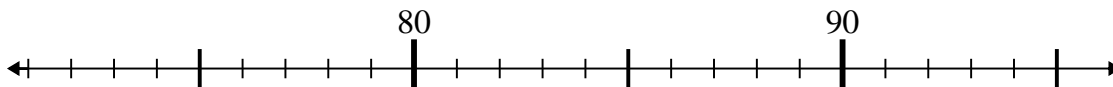
7. \_\_\_\_\_

8)  $71 - 12 =$



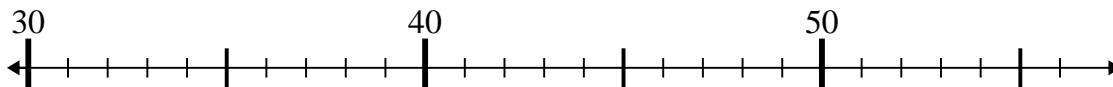
8. \_\_\_\_\_

9)  $95 - 0 =$



9. \_\_\_\_\_

10)  $56 - 13 =$

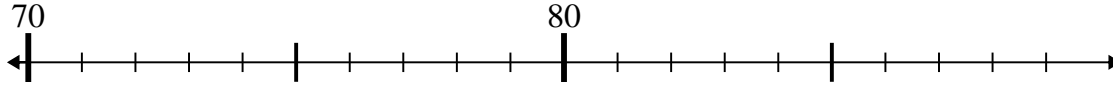


10. \_\_\_\_\_

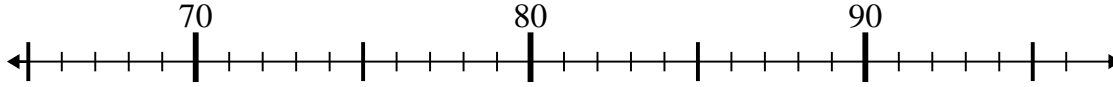


Use the numberlines to solve each problem.

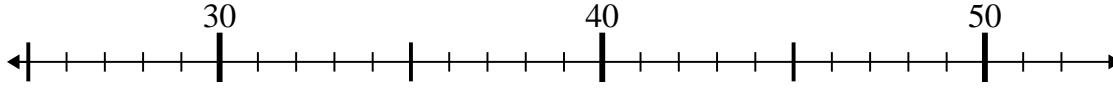
1)  $76 - 0 =$   
70



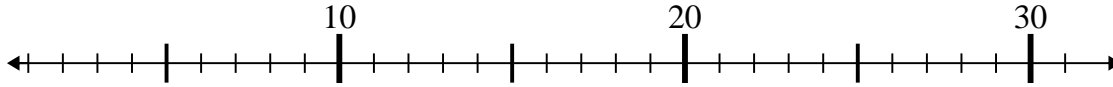
2)  $66 + 21 =$



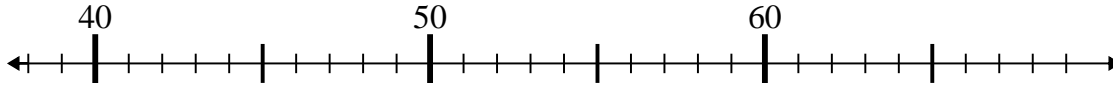
3)  $35 + 12 =$



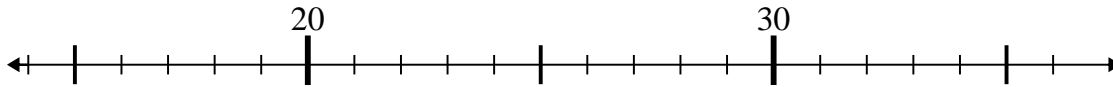
4)  $18 + 8 =$



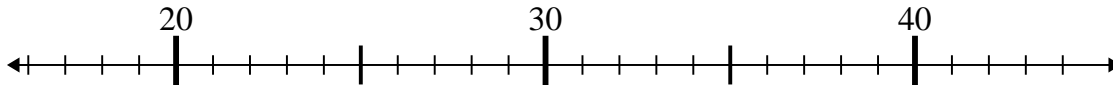
5)  $43 - 4 =$



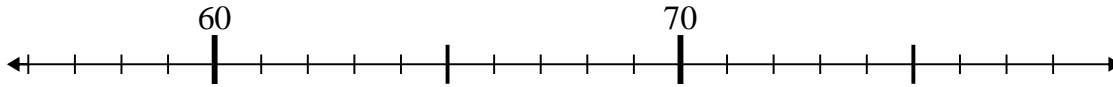
6)  $36 - 17 =$



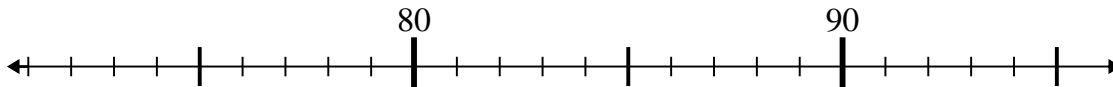
7)  $29 - 9 =$



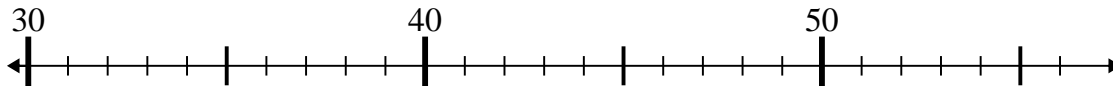
8)  $71 - 12 =$



9)  $95 - 0 =$



10)  $56 - 13 =$



Answers

1. 76

2. 87

3. 47

4. 26

5. 39

6. 19

7. 20

8. 59

9. 95

10. 43