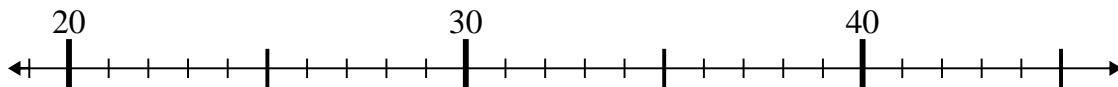




Use the numberlines to solve each problem.

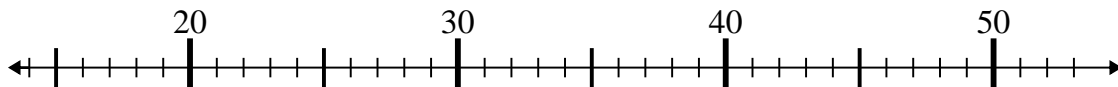
**Answers**

1)  $29 + 7 =$



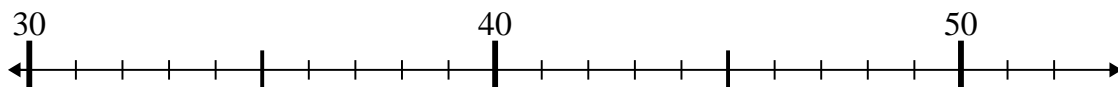
1. \_\_\_\_\_

2)  $36 - 6 =$



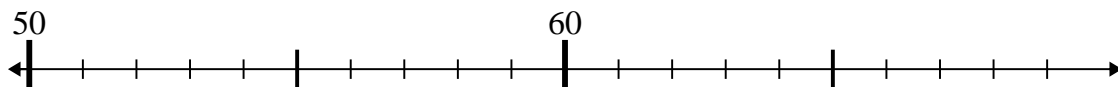
2. \_\_\_\_\_

3)  $50 - 1 =$



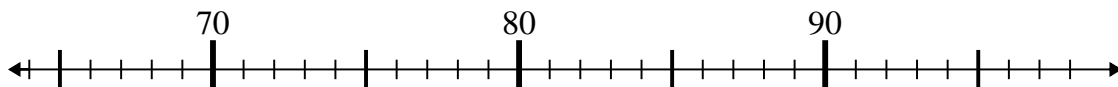
3. \_\_\_\_\_

4)  $68 - 6 =$



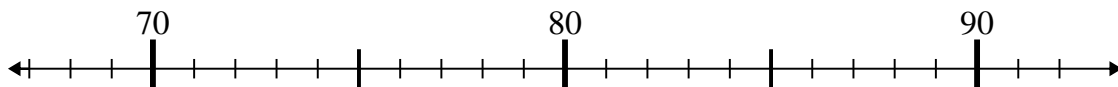
4. \_\_\_\_\_

5)  $71 + 11 =$



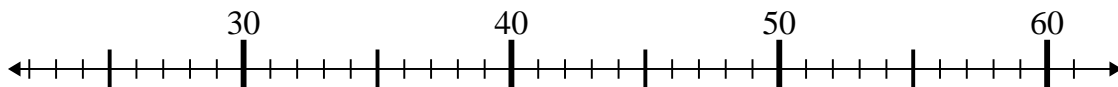
5. \_\_\_\_\_

6)  $68 + 4 =$



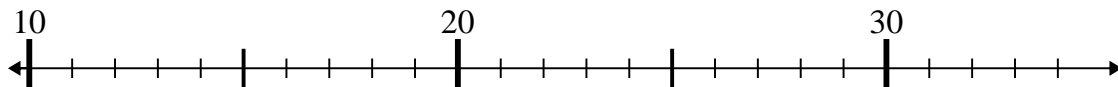
6. \_\_\_\_\_

7)  $35 - 9 =$



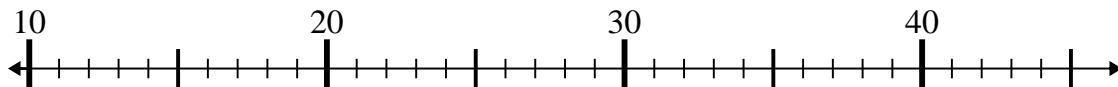
7. \_\_\_\_\_

8)  $34 + 0 =$



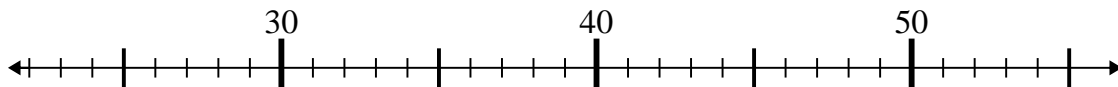
8. \_\_\_\_\_

9)  $42 - 21 =$



9. \_\_\_\_\_

10)  $45 - 3 =$

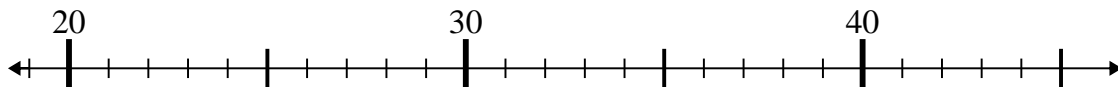


10. \_\_\_\_\_

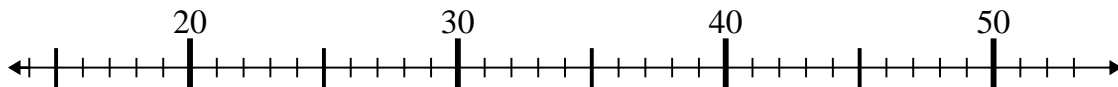


Use the numberlines to solve each problem.

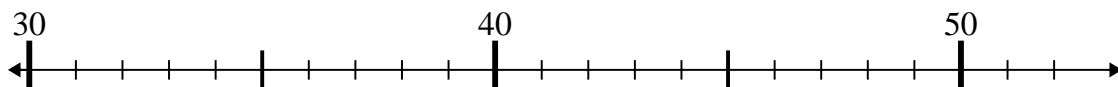
1)  $29 + 7 =$



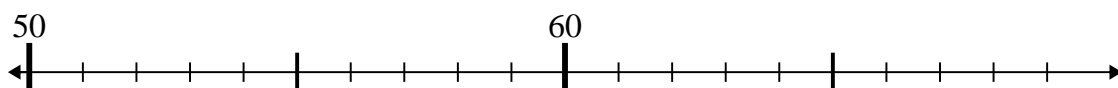
2)  $36 - 6 =$



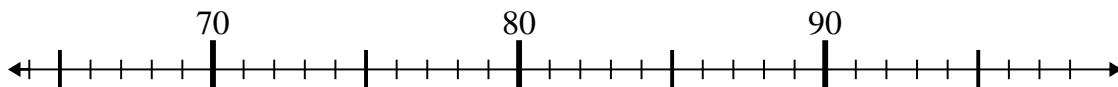
3)  $50 - 1 =$



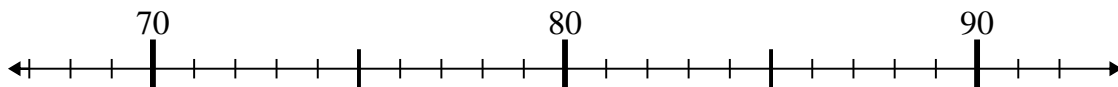
4)  $68 - 6 =$



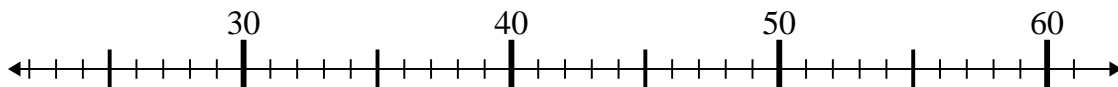
5)  $71 + 11 =$



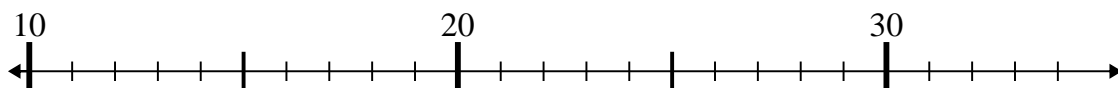
6)  $68 + 4 =$



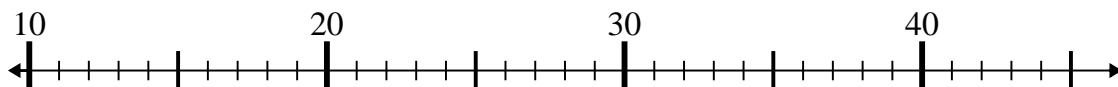
7)  $35 - 9 =$



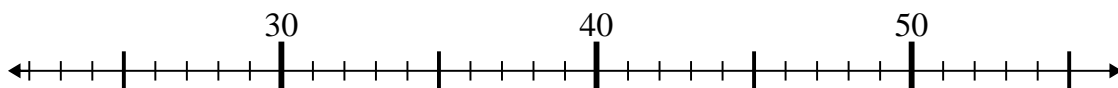
8)  $34 + 0 =$



9)  $42 - 21 =$



10)  $45 - 3 =$



Answers

1. 36

2. 30

3. 49

4. 62

5. 82

6. 72

7. 26

8. 34

9. 21

10. 42