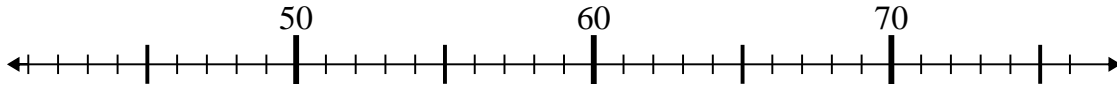




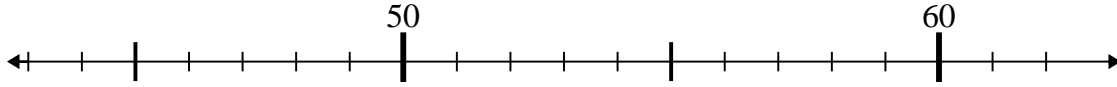
Use the numberlines to solve each problem.

Answers

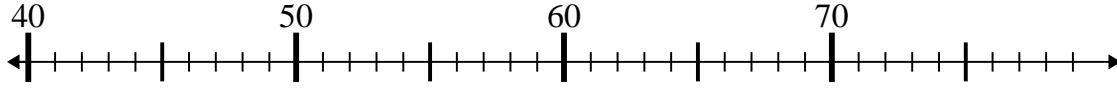
1) $52 - 10 =$



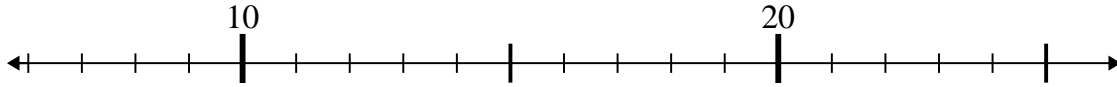
2) $60 - 1 =$



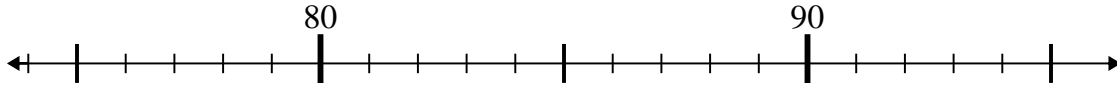
3) $58 - 6 =$



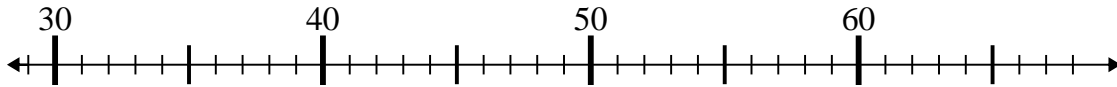
4) $13 - 1 =$



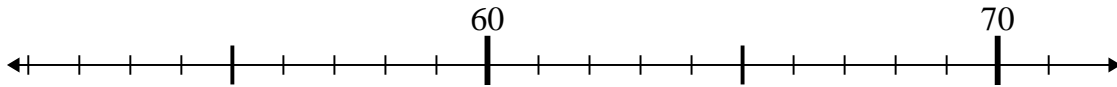
5) $86 + 9 =$



6) $31 + 26 =$



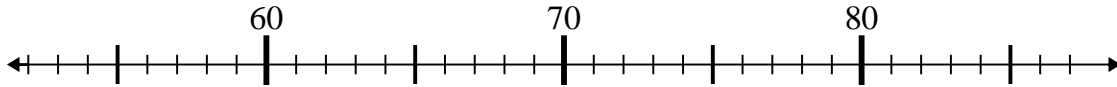
7) $55 + 2 =$



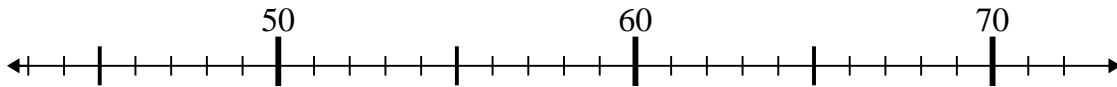
8) $35 - 18 =$



9) $76 - 24 =$



10) $46 + 15 =$

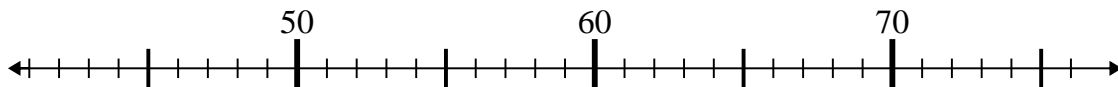


1. _____
2. _____
3. _____
4. _____
5. _____
6. _____
7. _____
8. _____
9. _____
10. _____

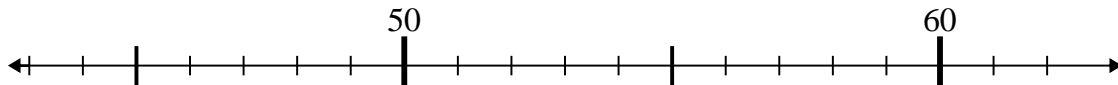


Use the numberlines to solve each problem.

1) $52 - 10 =$



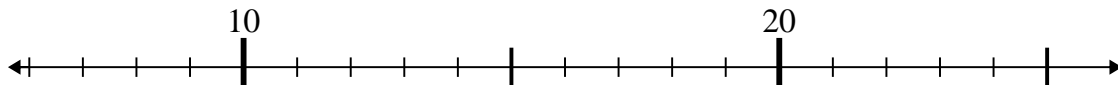
2) $60 - 1 =$



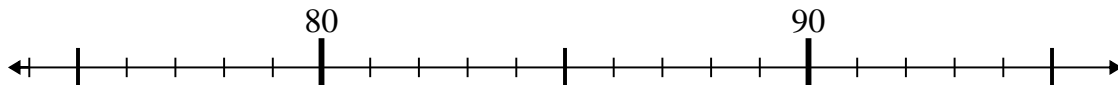
3) $58 - 6 =$



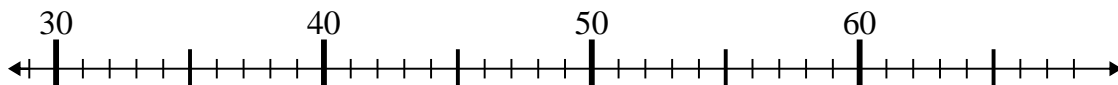
4) $13 - 1 =$



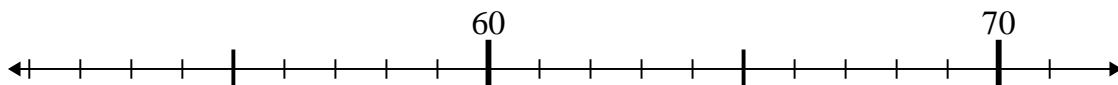
5) $86 + 9 =$



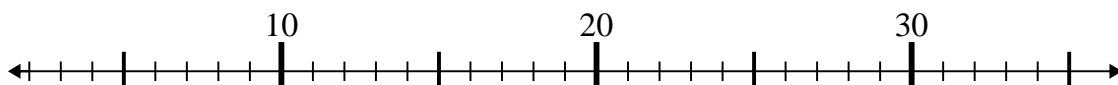
6) $31 + 26 =$



7) $55 + 2 =$



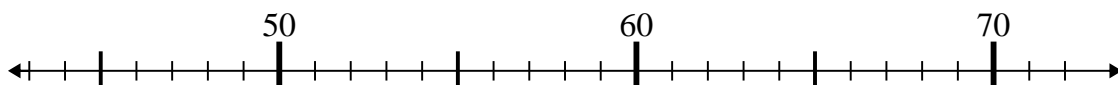
8) $35 - 18 =$



9) $76 - 24 =$



10) $46 + 15 =$



Answers

1. 42

2. 59

3. 52

4. 12

5. 95

6. 57

7. 57

8. 17

9. 52

10. 61