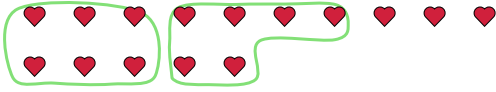




Use the shapes provided to answer the questions.

Answers

Ex) There are 15 shapes below. How many groups of 6 can you make with them? How many will you have left over?



1) There are 10 shapes below. How many groups of 2 can you make with them? How many will you have left over?




Ex. 2 3

2) There are 26 shapes below. How many groups of 2 can you make with them? How many will you have left over?



3) There are 16 shapes below. How many groups of 9 can you make with them? How many will you have left over?



1. _____

2. _____

3. _____

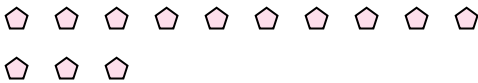
4. _____

5. _____

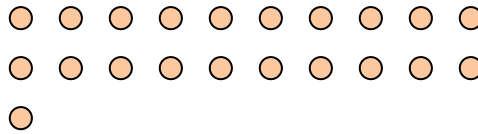
6. _____

7. _____

4) There are 13 shapes below. How many groups of 4 can you make with them? How many will you have left over?



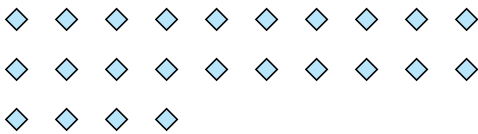
5) There are 21 shapes below. How many groups of 5 can you make with them? How many will you have left over?



8. _____

9. _____

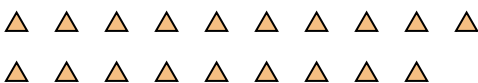
6) There are 24 shapes below. How many groups of 6 can you make with them? How many will you have left over?




7) There are 16 shapes below. How many groups of 4 can you make with them? How many will you have left over?



8) There are 19 shapes below. How many groups of 2 can you make with them? How many will you have left over?



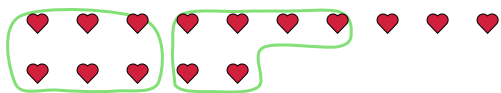
9) There are 14 shapes below. How many groups of 6 can you make with them? How many will you have left over?





Use the shapes provided to answer the questions.

Ex) There are 15 shapes below. How many groups of 6 can you make with them? How many will you have left over?



1) There are 10 shapes below. How many groups of 2 can you make with them? How many will you have left over?



Answers

Ex. 2 3

1. 5 0

2. 13 0

3. 1 7

4. 3 1

5. 4 1

6. 4 0

7. 4 0

8. 9 1

9. 2 2

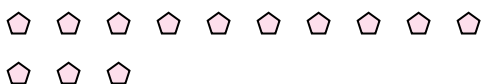
2) There are 26 shapes below. How many groups of 2 can you make with them? How many will you have left over?



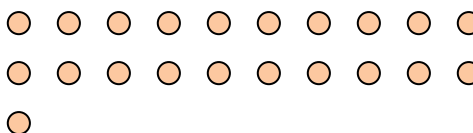
3) There are 16 shapes below. How many groups of 9 can you make with them? How many will you have left over?



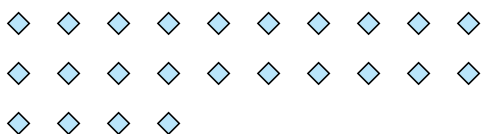
4) There are 13 shapes below. How many groups of 4 can you make with them? How many will you have left over?



5) There are 21 shapes below. How many groups of 5 can you make with them? How many will you have left over?




6) There are 24 shapes below. How many groups of 6 can you make with them? How many will you have left over?



7) There are 16 shapes below. How many groups of 4 can you make with them? How many will you have left over?



8) There are 19 shapes below. How many groups of 2 can you make with them? How many will you have left over?



9) There are 14 shapes below. How many groups of 6 can you make with them? How many will you have left over?

