






Use the shapes provided to answer the questions.


Ex) How many groups of 6 can you make with the 18 shapes below?



1) How many groups of 5 can you make with the 25 shapes below?



2) How many groups of 5 can you make with the 35 shapes below?



3) How many groups of 2 can you make with the 36 shapes below?



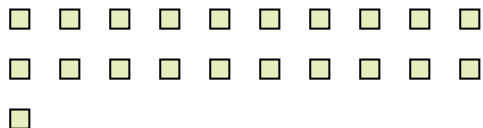
4) How many groups of 2 can you make with the 12 shapes below?



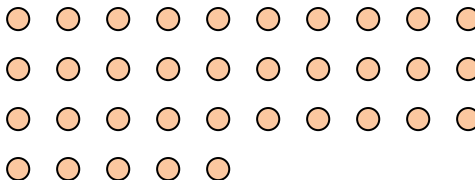
5) How many groups of 2 can you make with the 6 shapes below?



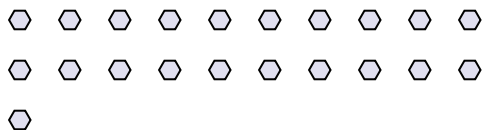
6) How many groups of 3 can you make with the 21 shapes below?



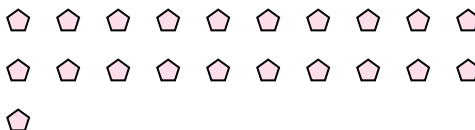
7) How many groups of 7 can you make with the 35 shapes below?



8) How many groups of 7 can you make with the 21 shapes below?



9) How many groups of 7 can you make with the 21 shapes below?



10) How many groups of 3 can you make with the 12 shapes below?



11) How many groups of 2 can you make with the 36 shapes below?



Answers

Ex. 3

1. 5

2. 7

3. 18

4. 6

5. 3

6. 7

7. 5

8. 3

9. 3

10. 4

11. 18