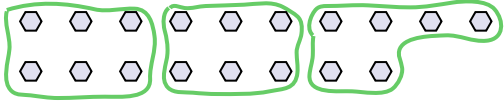






Use the shapes provided to answer the questions.

Ex) How many groups of 6 can you make with the 18 shapes below?



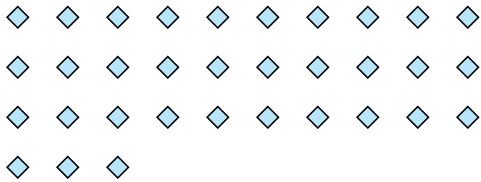
1) How many groups of 3 can you make with the 27 shapes below?



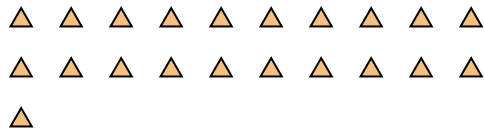
Answers

Ex. 3

2) How many groups of 3 can you make with the 33 shapes below?




3) How many groups of 7 can you make with the 21 shapes below?

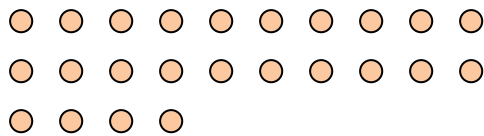


1. 9

4) How many groups of 7 can you make with the 14 shapes below?




5) How many groups of 8 can you make with the 24 shapes below?




2. 11

6) How many groups of 4 can you make with the 40 shapes below?




7) How many groups of 8 can you make with the 32 shapes below?

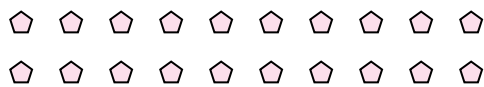


3. 3

8) How many groups of 7 can you make with the 28 shapes below?



9) How many groups of 5 can you make with the 20 shapes below?



4. 2

10) How many groups of 4 can you make with the 12 shapes below?



11) How many groups of 7 can you make with the 21 shapes below?



5. 3

6. 10

7. 4

8. 4

9. 4

10. 3

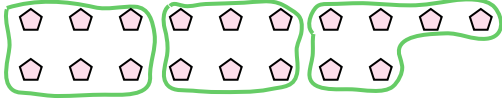
11. 3



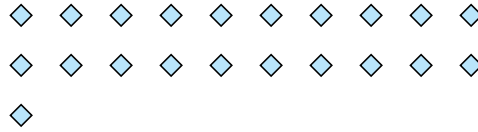


Use the shapes provided to answer the questions.

Ex) How many groups of 6 can you make with the 18 shapes below?



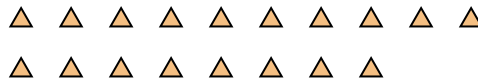
1) How many groups of 7 can you make with the 21 shapes below?



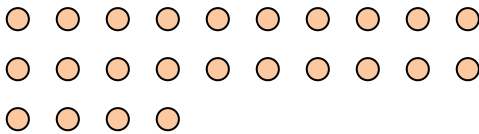
2) How many groups of 3 can you make with the 6 shapes below?



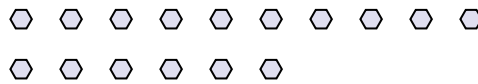
3) How many groups of 6 can you make with the 18 shapes below?




4) How many groups of 8 can you make with the 24 shapes below?




5) How many groups of 8 can you make with the 16 shapes below?



6) How many groups of 4 can you make with the 16 shapes below?



7) How many groups of 7 can you make with the 35 shapes below?



8) How many groups of 3 can you make with the 15 shapes below?



9) How many groups of 2 can you make with the 18 shapes below?



10) How many groups of 4 can you make with the 8 shapes below?



11) How many groups of 7 can you make with the 14 shapes below?



Answers

Ex. 3

1. 3

2. 2

3. 3

4. 3

5. 2

6. 4

7. 5

8. 5

9. 9

10. 2

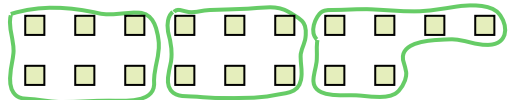
11. 2






Use the shapes provided to answer the questions.

Ex) How many groups of 6 can you make with the 18 shapes below?




1) How many groups of 3 can you make with the 30 shapes below?




Ex. 3

2) How many groups of 4 can you make with the 28 shapes below?

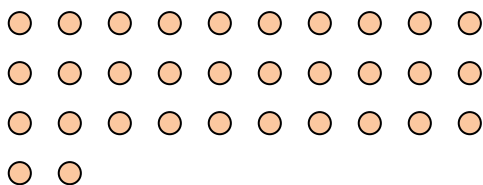


3) How many groups of 2 can you make with the 40 shapes below?

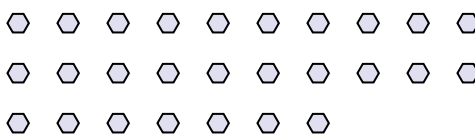


1. 10

4) How many groups of 4 can you make with the 32 shapes below?



5) How many groups of 9 can you make with the 27 shapes below?




2. 7

6) How many groups of 6 can you make with the 36 shapes below?




7) How many groups of 3 can you make with the 36 shapes below?

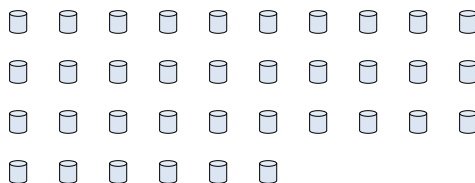


3. 20

8) How many groups of 6 can you make with the 36 shapes below?




9) How many groups of 4 can you make with the 36 shapes below?



4. 8

10) How many groups of 2 can you make with the 38 shapes below?



11) How many groups of 7 can you make with the 14 shapes below?



5. 3

6. 6

7. 12

8. 6

9. 9

10. 19

11. 2


Answers





Use the shapes provided to answer the questions.

Ex) How many groups of 6 can you make with the 18 shapes below?



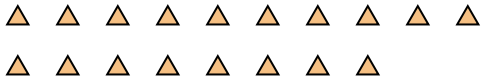
1) How many groups of 3 can you make with the 9 shapes below?



Answers

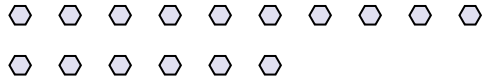
Ex. 3

2) How many groups of 6 can you make with the 18 shapes below?



1. 3

3) How many groups of 8 can you make with the 16 shapes below?



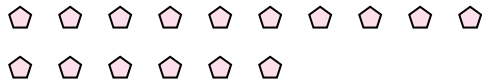
2. 3

4) How many groups of 4 can you make with the 8 shapes below?



3. 2

5) How many groups of 8 can you make with the 16 shapes below?



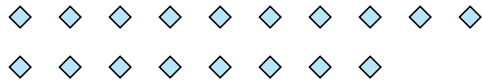
4. 2

6) How many groups of 2 can you make with the 24 shapes below?




5. 2

7) How many groups of 2 can you make with the 18 shapes below?



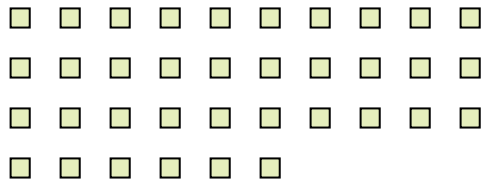
6. 12

8) How many groups of 9 can you make with the 27 shapes below?



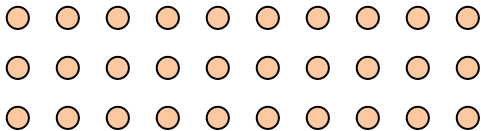
7. 9

9) How many groups of 9 can you make with the 36 shapes below?



8. 3

10) How many groups of 6 can you make with the 30 shapes below?



9. 4

11) How many groups of 3 can you make with the 39 shapes below?



10. 5

11. 13








Use the shapes provided to answer the questions.


Ex) How many groups of 6 can you make with the 18 shapes below?



1) How many groups of 5 can you make with the 40 shapes below?




2) How many groups of 7 can you make with the 21 shapes below?



3) How many groups of 6 can you make with the 12 shapes below?



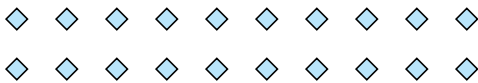
4) How many groups of 3 can you make with the 24 shapes below?



5) How many groups of 2 can you make with the 4 shapes below?




6) How many groups of 5 can you make with the 20 shapes below?



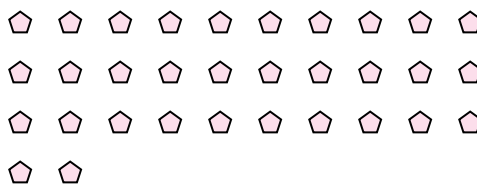
7) How many groups of 9 can you make with the 18 shapes below?



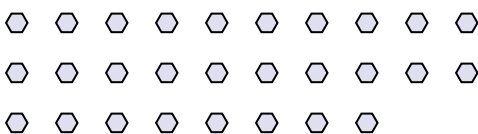
8) How many groups of 9 can you make with the 36 shapes below?



9) How many groups of 2 can you make with the 32 shapes below?



10) How many groups of 2 can you make with the 28 shapes below?



11) How many groups of 8 can you make with the 24 shapes below?



Answers

Ex. 3

1. 8

2. 3

3. 2

4. 8

5. 2

6. 4

7. 2

8. 4

9. 16

10. 14


11. 3





Use the shapes provided to answer the questions.

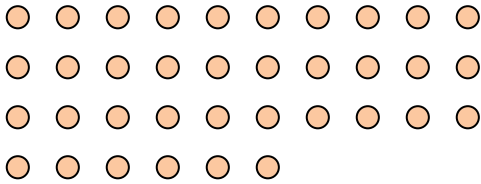
Ex) How many groups of 6 can you make with the 18 shapes below?




1) How many groups of 2 can you make with the 26 shapes below?




2) How many groups of 9 can you make with the 36 shapes below?



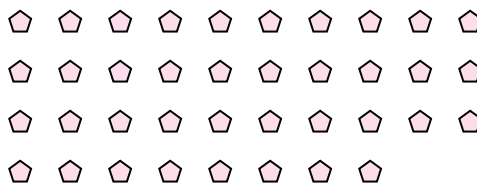
3) How many groups of 3 can you make with the 24 shapes below?



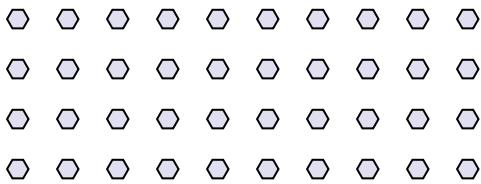
4) How many groups of 7 can you make with the 35 shapes below?




5) How many groups of 2 can you make with the 38 shapes below?




6) How many groups of 8 can you make with the 40 shapes below?



7) How many groups of 9 can you make with the 36 shapes below?



8) How many groups of 4 can you make with the 40 shapes below?




9) How many groups of 7 can you make with the 35 shapes below?



10) How many groups of 5 can you make with the 10 shapes below?



11) How many groups of 9 can you make with the 27 shapes below?



Answers

Ex. 3

1. 13

2. 4

3. 8

4. 5

5. 19

6. 5

7. 4

8. 10

9. 5

10. 2

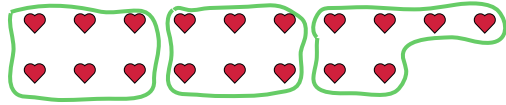
11. 3



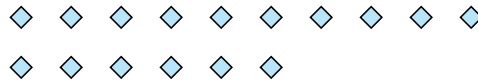
Use the shapes provided to answer the questions.

**Answers**

Ex) How many groups of 6 can you make with the 18 shapes below?




1) How many groups of 8 can you make with the 16 shapes below?



Ex. 3

2) How many groups of 6 can you make with the 36 shapes below?



3) How many groups of 5 can you make with the 25 shapes below?



1. \_\_\_\_\_

2. \_\_\_\_\_

3. \_\_\_\_\_

4. \_\_\_\_\_

5. \_\_\_\_\_

6. \_\_\_\_\_

7. \_\_\_\_\_

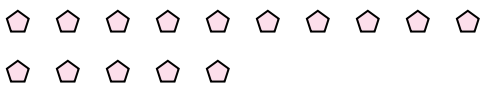
8. \_\_\_\_\_

9. \_\_\_\_\_

10. \_\_\_\_\_

11. \_\_\_\_\_

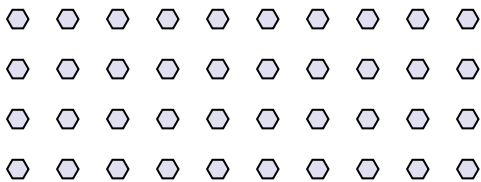
4) How many groups of 5 can you make with the 15 shapes below?



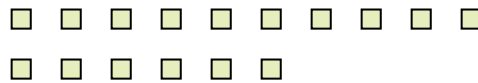
5) How many groups of 3 can you make with the 6 shapes below?




6) How many groups of 4 can you make with the 40 shapes below?




7) How many groups of 2 can you make with the 16 shapes below?



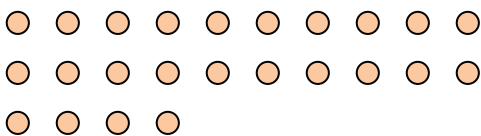
8) How many groups of 6 can you make with the 30 shapes below?




9) How many groups of 7 can you make with the 21 shapes below?



10) How many groups of 8 can you make with the 24 shapes below?



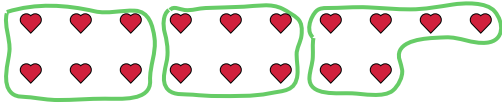
11) How many groups of 2 can you make with the 22 shapes below?



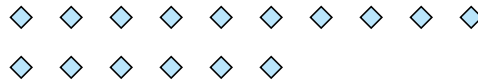


Use the shapes provided to answer the questions.


Ex) How many groups of 6 can you make with the 18 shapes below?



1) How many groups of 8 can you make with the 16 shapes below?



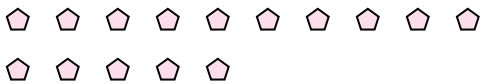
2) How many groups of 6 can you make with the 36 shapes below?



3) How many groups of 5 can you make with the 25 shapes below?



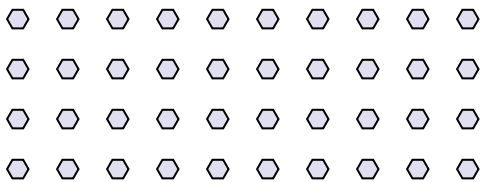
4) How many groups of 5 can you make with the 15 shapes below?



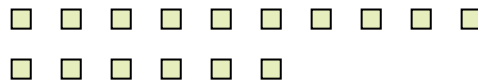
5) How many groups of 3 can you make with the 6 shapes below?




6) How many groups of 4 can you make with the 40 shapes below?



7) How many groups of 2 can you make with the 16 shapes below?



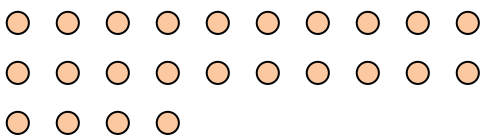
8) How many groups of 6 can you make with the 30 shapes below?




9) How many groups of 7 can you make with the 21 shapes below?



10) How many groups of 8 can you make with the 24 shapes below?



11) How many groups of 2 can you make with the 22 shapes below?



Answers

Ex. 3

1. 2

2. 6

3. 5

4. 3

5. 2

6. 10

7. 8

8. 5

9. 3

10. 3

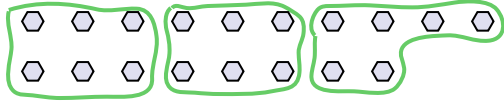
11. 11



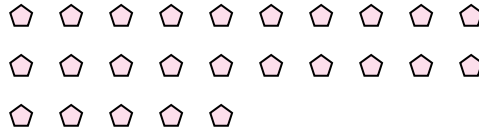
Use the shapes provided to answer the questions.

**Answers**

Ex) How many groups of 6 can you make with the 18 shapes below?



1) How many groups of 5 can you make with the 25 shapes below?



Ex. 3

1. \_\_\_\_\_

2. \_\_\_\_\_

3. \_\_\_\_\_

4. \_\_\_\_\_

5. \_\_\_\_\_

6. \_\_\_\_\_

7. \_\_\_\_\_

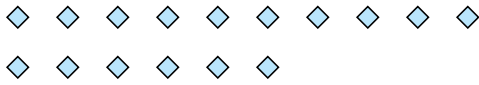
8. \_\_\_\_\_

9. \_\_\_\_\_

10. \_\_\_\_\_

11. \_\_\_\_\_


2) How many groups of 4 can you make with the 16 shapes below?




3) How many groups of 2 can you make with the 14 shapes below?



4) How many groups of 4 can you make with the 28 shapes below?



5) How many groups of 9 can you make with the 36 shapes below?



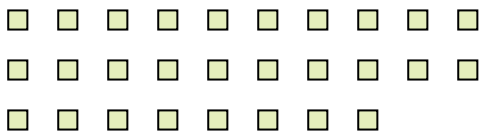
6) How many groups of 9 can you make with the 27 shapes below?




7) How many groups of 6 can you make with the 30 shapes below?



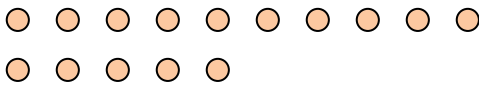
8) How many groups of 2 can you make with the 28 shapes below?




9) How many groups of 9 can you make with the 27 shapes below?



10) How many groups of 5 can you make with the 15 shapes below?



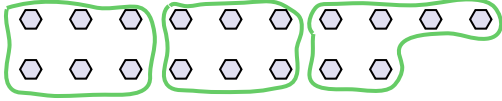
11) How many groups of 4 can you make with the 36 shapes below?



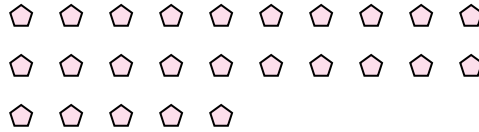


Use the shapes provided to answer the questions.

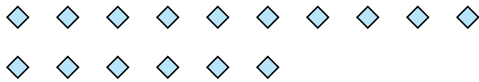
Ex) How many groups of 6 can you make with the 18 shapes below?



1) How many groups of 5 can you make with the 25 shapes below?




2) How many groups of 4 can you make with the 16 shapes below?




3) How many groups of 2 can you make with the 14 shapes below?



4) How many groups of 4 can you make with the 28 shapes below?



5) How many groups of 9 can you make with the 36 shapes below?



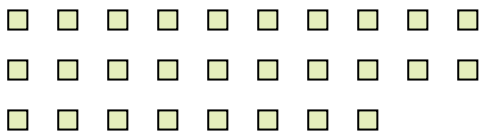
6) How many groups of 9 can you make with the 27 shapes below?




7) How many groups of 6 can you make with the 30 shapes below?



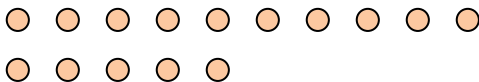
8) How many groups of 2 can you make with the 28 shapes below?




9) How many groups of 9 can you make with the 27 shapes below?



10) How many groups of 5 can you make with the 15 shapes below?



11) How many groups of 4 can you make with the 36 shapes below?



Answers

Ex. 3

1. 5

2. 4

3. 7

4. 7

5. 4

6. 3

7. 5

8. 14

9. 3

10. 3

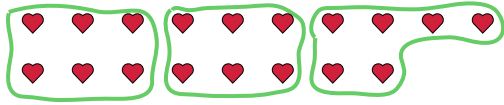
11. 9



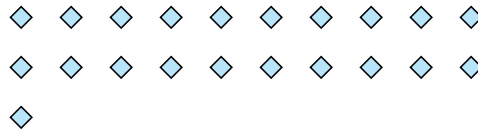


Use the shapes provided to answer the questions.

Ex) How many groups of 6 can you make with the 18 shapes below?



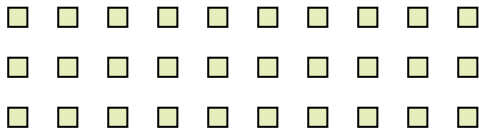
1) How many groups of 7 can you make with the 21 shapes below?



**Answers**

Ex. 3

2) How many groups of 6 can you make with the 30 shapes below?



3) How many groups of 4 can you make with the 28 shapes below?



1. \_\_\_\_\_

2. \_\_\_\_\_

3. \_\_\_\_\_

4. \_\_\_\_\_

5. \_\_\_\_\_

6. \_\_\_\_\_

7. \_\_\_\_\_

8. \_\_\_\_\_

9. \_\_\_\_\_

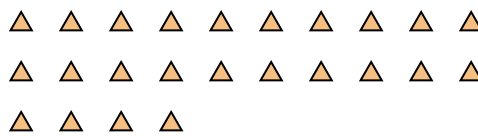
10. \_\_\_\_\_

11. \_\_\_\_\_

4) How many groups of 9 can you make with the 27 shapes below?



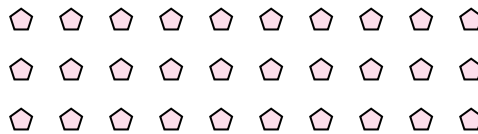
5) How many groups of 6 can you make with the 24 shapes below?



6) How many groups of 3 can you make with the 30 shapes below?



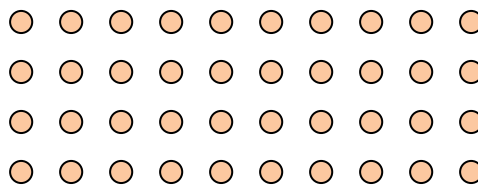
7) How many groups of 5 can you make with the 30 shapes below?



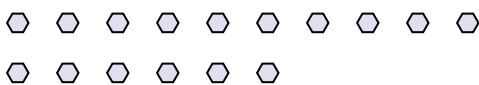
8) How many groups of 7 can you make with the 14 shapes below?




9) How many groups of 5 can you make with the 40 shapes below?



10) How many groups of 2 can you make with the 16 shapes below?




11) How many groups of 5 can you make with the 30 shapes below?



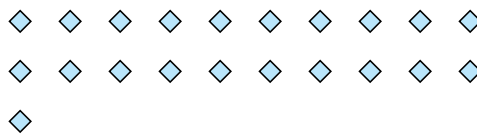


Use the shapes provided to answer the questions.


Ex) How many groups of 6 can you make with the 18 shapes below?



1) How many groups of 7 can you make with the 21 shapes below?



2) How many groups of 6 can you make with the 30 shapes below?



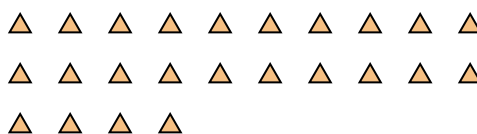
3) How many groups of 4 can you make with the 28 shapes below?




4) How many groups of 9 can you make with the 27 shapes below?



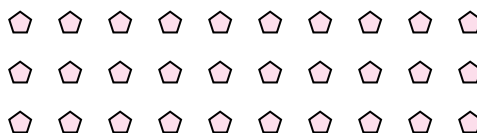
5) How many groups of 6 can you make with the 24 shapes below?



6) How many groups of 3 can you make with the 30 shapes below?



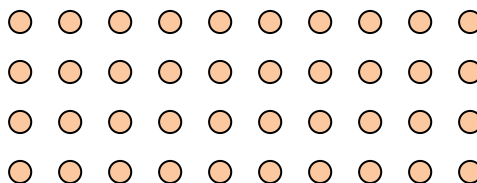
7) How many groups of 5 can you make with the 30 shapes below?



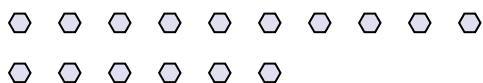
8) How many groups of 7 can you make with the 14 shapes below?




9) How many groups of 5 can you make with the 40 shapes below?



10) How many groups of 2 can you make with the 16 shapes below?



11) How many groups of 5 can you make with the 30 shapes below?



Answers

Ex. 3

1. 3

2. 5

3. 7

4. 3

5. 4

6. 10

7. 6

8. 2

9. 8

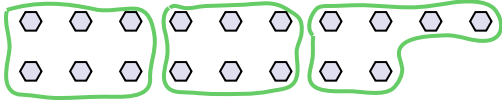
10. 8

11. 6



Use the shapes provided to answer the questions.

Ex) How many groups of 6 can you make with the 18 shapes below?




1) How many groups of 6 can you make with the 12 shapes below?



Answers

Ex. 3

2) How many groups of 7 can you make with the 35 shapes below?




3) How many groups of 4 can you make with the 8 shapes below?



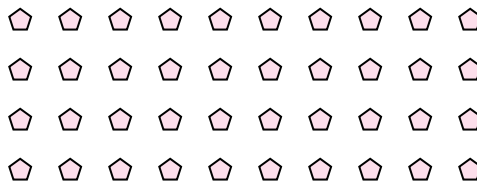
1. \_\_\_\_\_

2. \_\_\_\_\_

4) How many groups of 8 can you make with the 24 shapes below?



5) How many groups of 4 can you make with the 40 shapes below?



3. \_\_\_\_\_


4. \_\_\_\_\_

5. \_\_\_\_\_

6. \_\_\_\_\_

7. \_\_\_\_\_

6) How many groups of 6 can you make with the 36 shapes below?



7) How many groups of 5 can you make with the 10 shapes below?




8. \_\_\_\_\_

9. \_\_\_\_\_

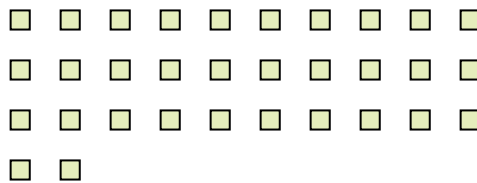
10. \_\_\_\_\_

11. \_\_\_\_\_

8) How many groups of 9 can you make with the 27 shapes below?



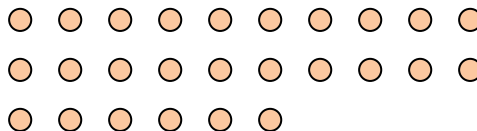
9) How many groups of 8 can you make with the 32 shapes below?



10) How many groups of 6 can you make with the 18 shapes below?



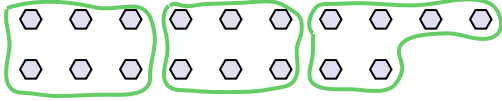
11) How many groups of 2 can you make with the 26 shapes below?





Use the shapes provided to answer the questions.

Ex) How many groups of 6 can you make with the 18 shapes below?




1) How many groups of 6 can you make with the 12 shapes below?



Answers

Ex. 3

2) How many groups of 7 can you make with the 35 shapes below?




3) How many groups of 4 can you make with the 8 shapes below?



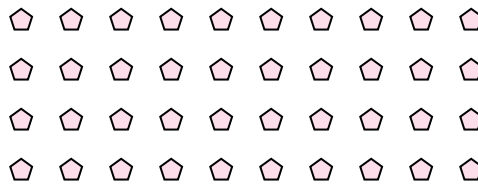
1. 2

2. 5

4) How many groups of 8 can you make with the 24 shapes below?



5) How many groups of 4 can you make with the 40 shapes below?




3. 2

4. 3

5. 10

6) How many groups of 6 can you make with the 36 shapes below?



7) How many groups of 5 can you make with the 10 shapes below?




6. 6

7. 2

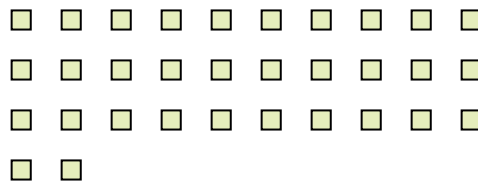
8. 3

9. 4

8) How many groups of 9 can you make with the 27 shapes below?



9) How many groups of 8 can you make with the 32 shapes below?



10. 3

11. 13

10) How many groups of 6 can you make with the 18 shapes below?



11) How many groups of 2 can you make with the 26 shapes below?

