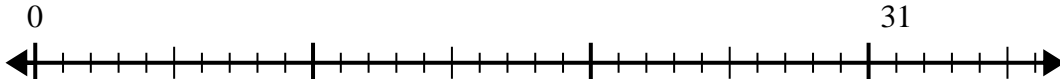


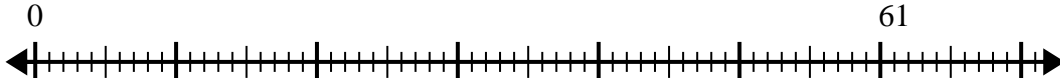


Use the number line to solve the division problem.

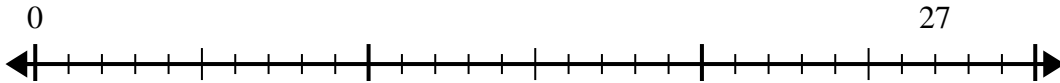
1) $31 \div 8 =$
0



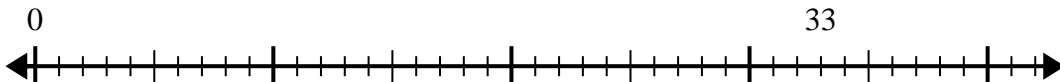
2) $61 \div 8 =$
0



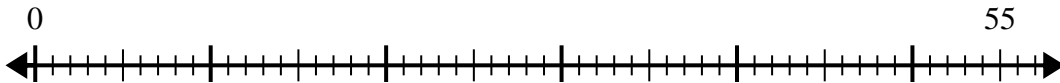
3) $27 \div 4 =$
0



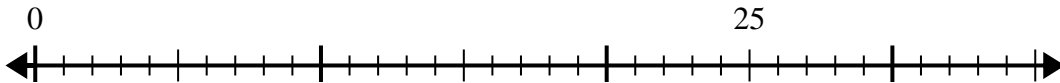
4) $33 \div 4 =$
0



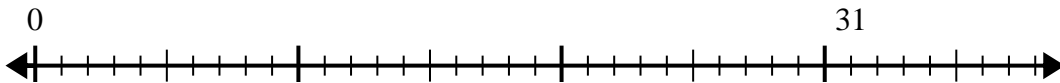
5) $55 \div 8 =$
0



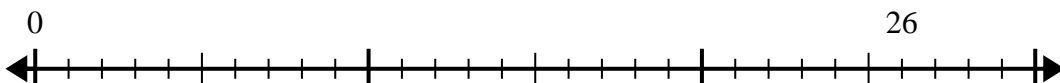
6) $25 \div 6 =$
0



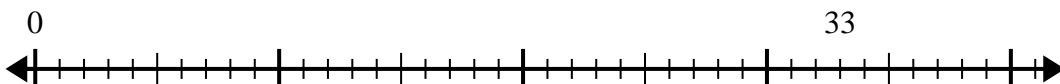
7) $31 \div 4 =$
0



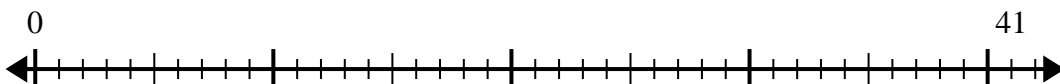
8) $26 \div 7 =$
0



9) $33 \div 7 =$
0



10) $41 \div 5 =$
0



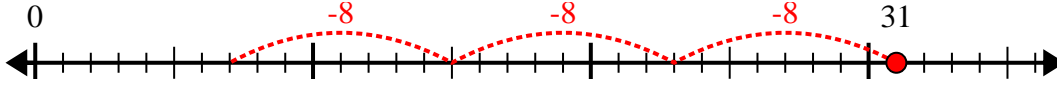
Answers

- 1. _____
- 2. _____
- 3. _____
- 4. _____
- 5. _____
- 6. _____
- 7. _____
- 8. _____
- 9. _____
- 10. _____

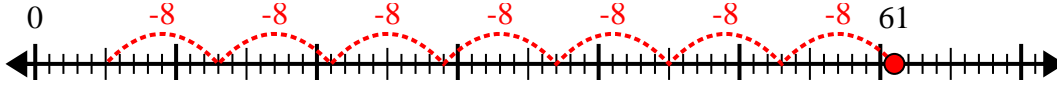


Use the number line to solve the division problem.

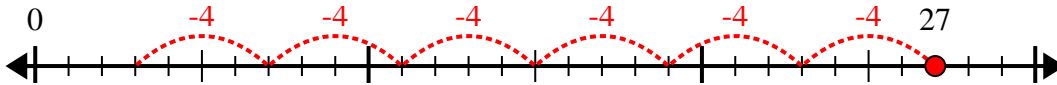
1) $31 \div 8 =$
0



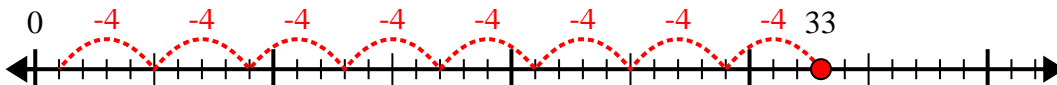
2) $61 \div 8 =$
0



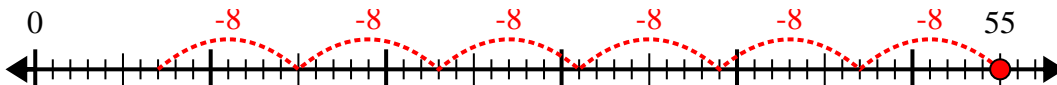
3) $27 \div 4 =$
0



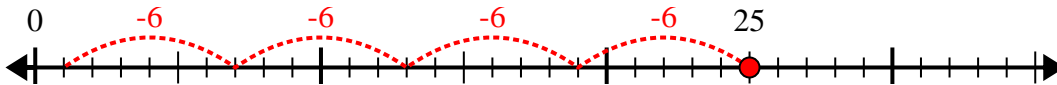
4) $33 \div 4 =$
0



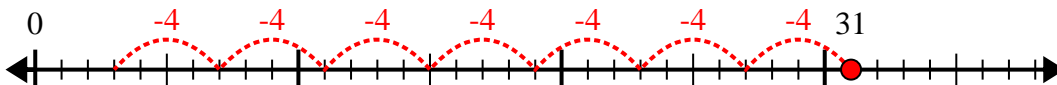
5) $55 \div 8 =$
0



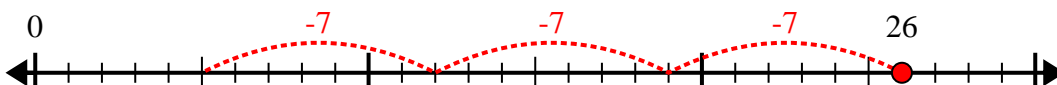
6) $25 \div 6 =$
0



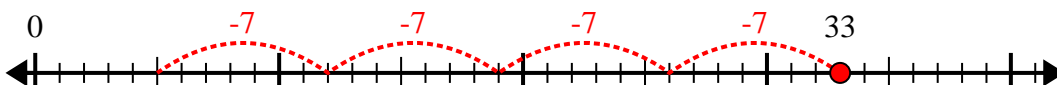
7) $31 \div 4 =$
0



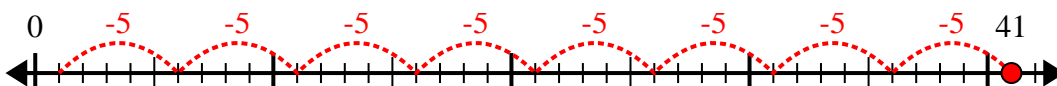
8) $26 \div 7 =$
0



9) $33 \div 7 =$
0



10) $41 \div 5 =$
0



Answers

1. 3r7

2. 7r5

3. 6r3

4. 8r1

5. 6r7

6. 4r1

7. 7r3

8. 3r5

9. 4r5

10. 8r1