

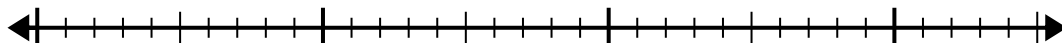


Use the number line to solve the division problem.

1) $30 \div 6 =$

0

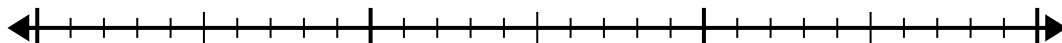
30



2) $24 \div 4 =$

0

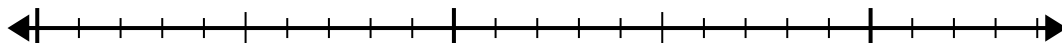
24



3) $20 \div 4 =$

0


20



4) $40 \div 8 =$

0

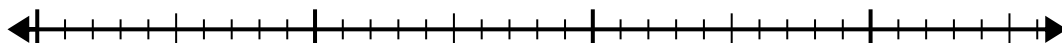
40



5) $28 \div 7 =$

0

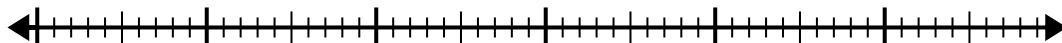
28



6) $56 \div 8 =$

0

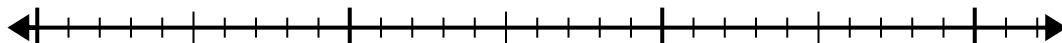
56



7) $24 \div 8 =$

0

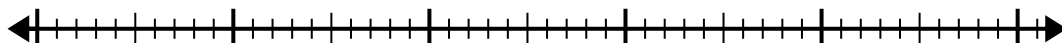
24



8) $42 \div 7 =$

0

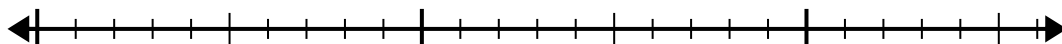
42



9) $20 \div 5 =$

0

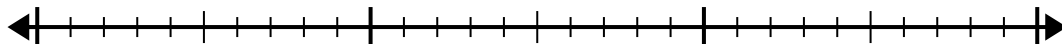
20



10) $24 \div 6 =$

0

24

**Answers**

1. _____

2. _____

3. _____

4. _____

5. _____

6. _____

7. _____

8. _____

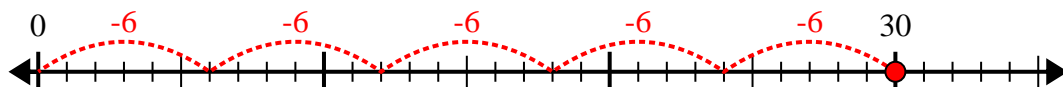
9. _____

10. _____

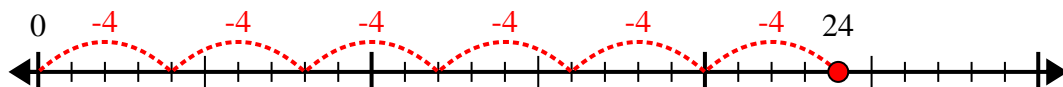


Use the number line to solve the division problem.

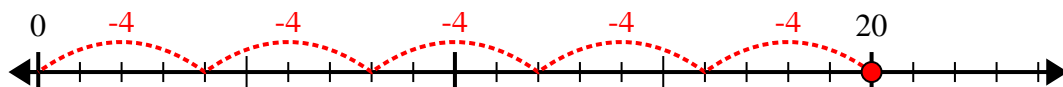
1) $30 \div 6 =$



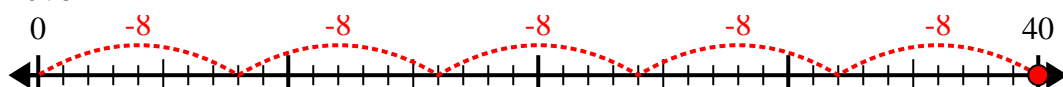
2) $24 \div 4 =$



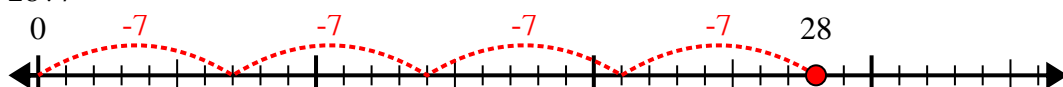
3) $20 \div 4 =$



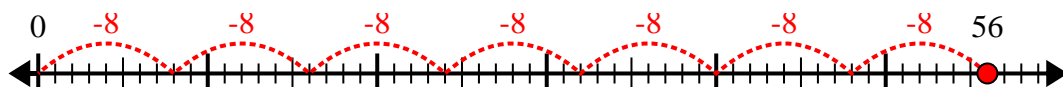
4) $40 \div 8 =$



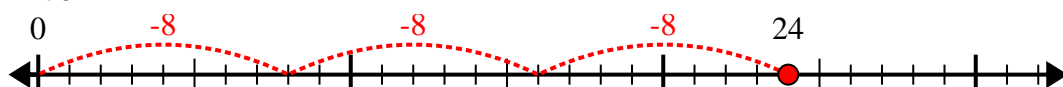
5) $28 \div 7 =$



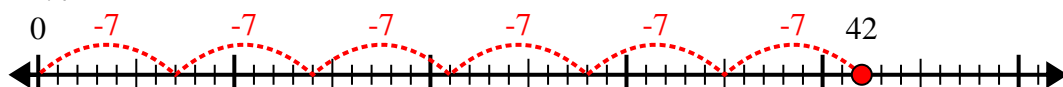
6) $56 \div 8 =$



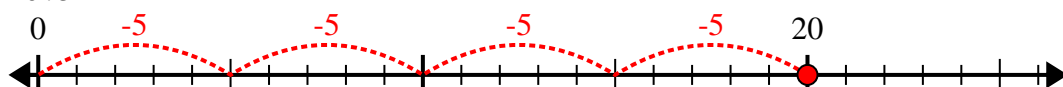
7) $24 \div 8 =$



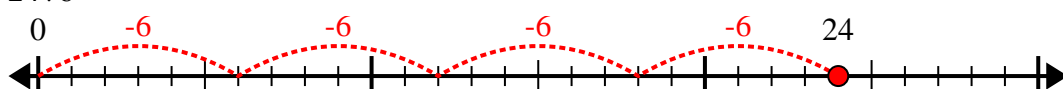
8) $42 \div 7 =$



9) $20 \div 5 =$



10) $24 \div 6 =$



Answers

1. 5

2. 6

3. 5

4. 5

5. 4

6. 7

7. 3

8. 6

9. 4

10. 4