

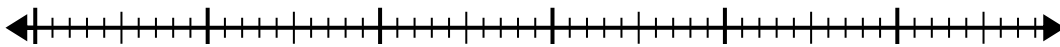


Use the number line to solve the division problem.

1) $56 \div 7 =$

0

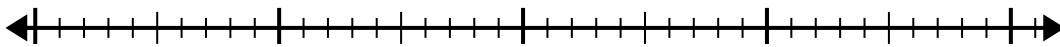
56



2) $40 \div 5 =$

0

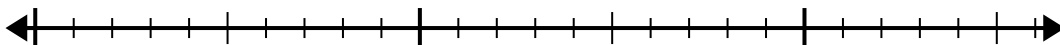
40



3) $20 \div 4 =$

0

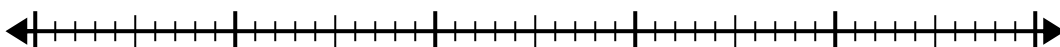
20



4) $42 \div 7 =$

0

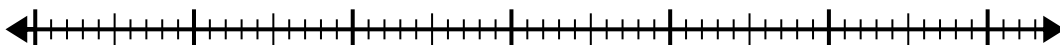
42



5) $56 \div 8 =$

0

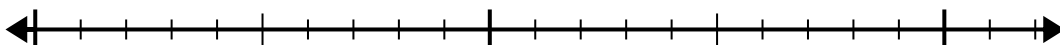
56



6) $20 \div 5 =$

0

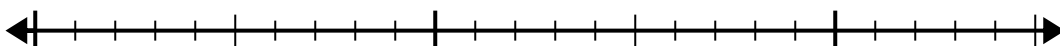
20



7) $24 \div 4 =$

0

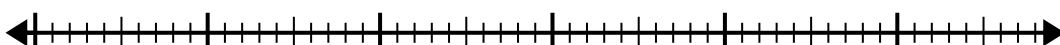
24



8) $48 \div 8 =$

0

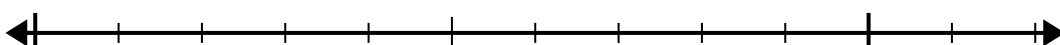
48



9) $12 \div 4 =$

0

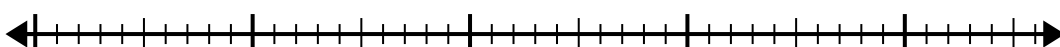
12



10) $42 \div 6 =$

0

42

Answers

1. _____

2. _____

3. _____

4. _____

5. _____

6. _____

7. _____

8. _____

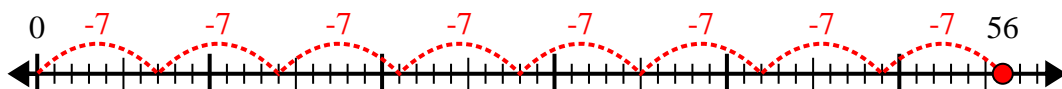
9. _____

10. _____

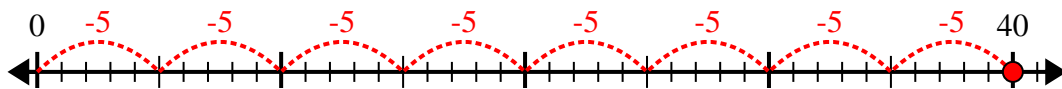


Use the number line to solve the division problem.

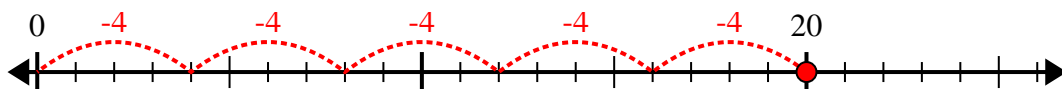
1) $56 \div 7 =$



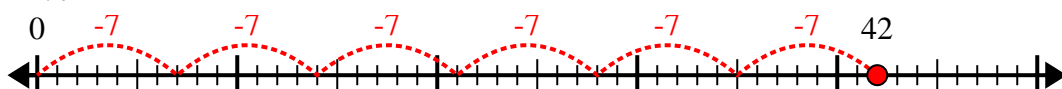
2) $40 \div 5 =$



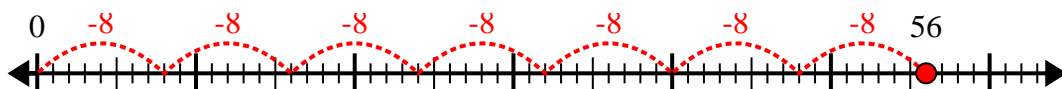
3) $20 \div 4 =$



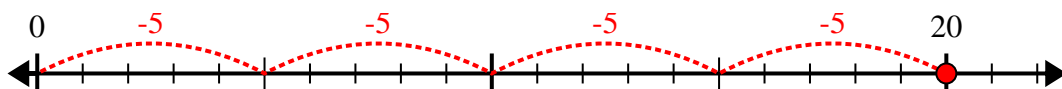
4) $42 \div 7 =$



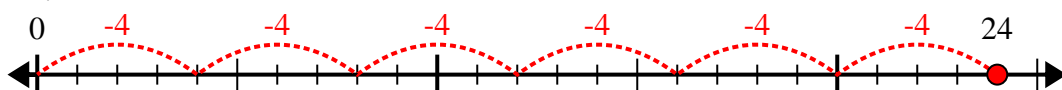
5) $56 \div 8 =$



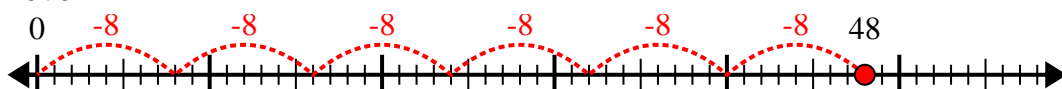
6) $20 \div 5 =$



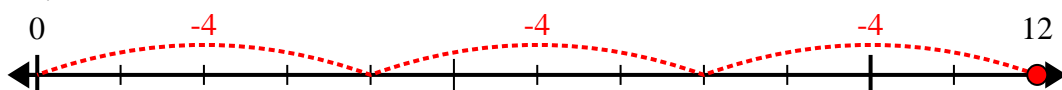
7) $24 \div 4 =$



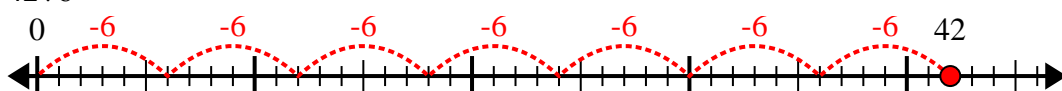
8) $48 \div 8 =$



9) $12 \div 4 =$



10) $42 \div 6 =$



Answers

1. 8

2. 8

3. 5

4. 6

5. 7

6. 4

7. 6

8. 6

9. 3

10. 7