


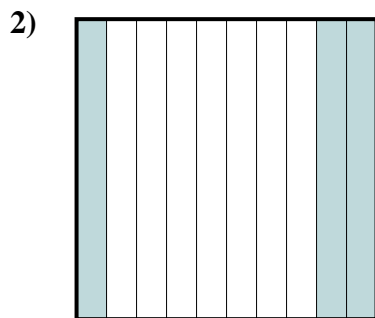


Determine which letter best represents the amount shaded of the whole.

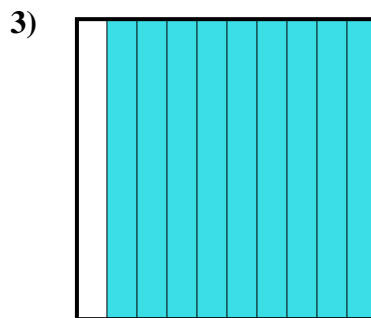
Answers



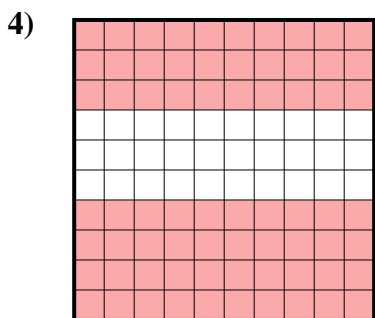
- A. 0.18
- B. 180.00
- C. 0.018
- D. 180.0



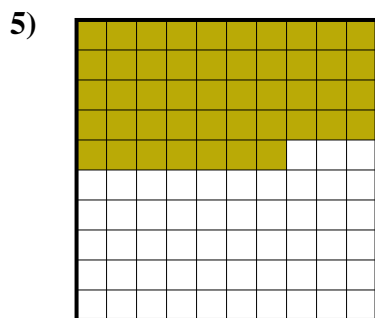
- A. 300.0
- B. 30
- C. 3
- D. 0.3




- A. 90
- B. 0.09
- C. 0.9
- D. 900.00



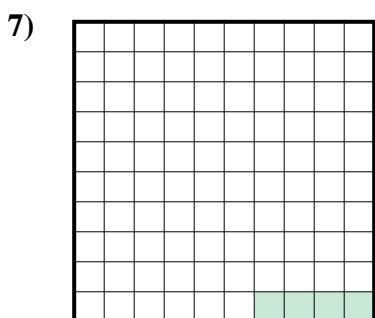
- A. 0.7
- B. 700.0
- C. 700.00
- D. 70



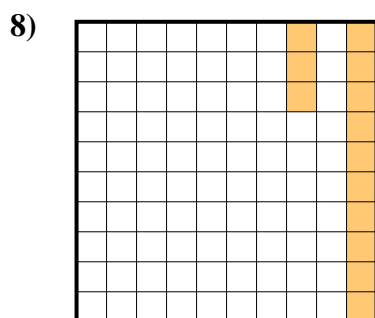
- A. 470.0
- B. 0.047
- C. 0.47
- D. 470.00



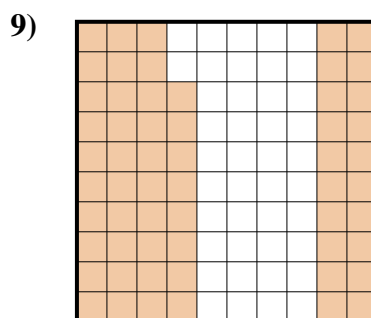
- A. 0.5
- B. 50
- C. 0.05
- D. 5



- A. 0.004
- B. 40.0
- C. 0.04
- D. 0.4



- A. 13
- B. 0.13
- C. 1.3
- D. 130.0



- A. 0.058
- B. 580.00
- C. 0.58
- D. 580.0

1. \_\_\_\_\_

2. \_\_\_\_\_

3. \_\_\_\_\_

4. \_\_\_\_\_

5. \_\_\_\_\_

6. \_\_\_\_\_

7. \_\_\_\_\_

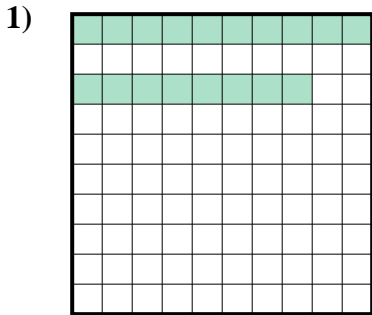
8. \_\_\_\_\_

9. \_\_\_\_\_

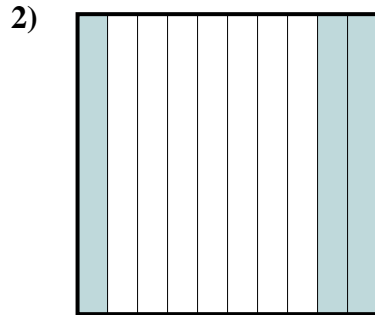


Determine which letter best represents the amount shaded of the whole.

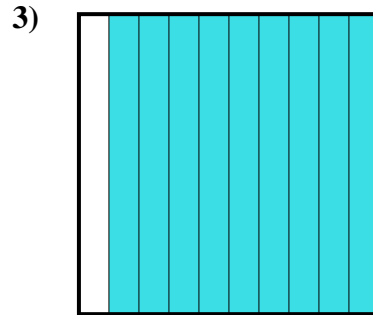
Answers



- A. 0.18
- B. 180.00
- C. 0.018
- D. 180.0



- A. 300.0
- B. 30
- C. 3
- D. 0.3



- A. 90
- B. 0.09
- C. 0.9
- D. 900.00

1.     **A**    

2.     **D**    

3.     **C**    

4.     **A**    

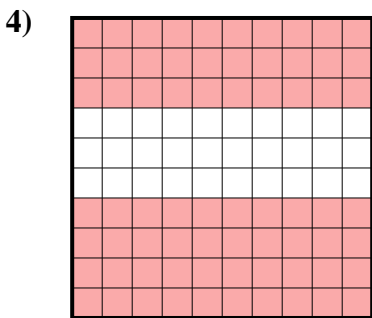
5.     **C**    

6.     **A**    

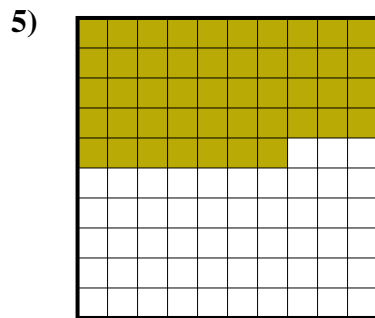
7.     **C**    

8.     **B**    


9.     **C**    



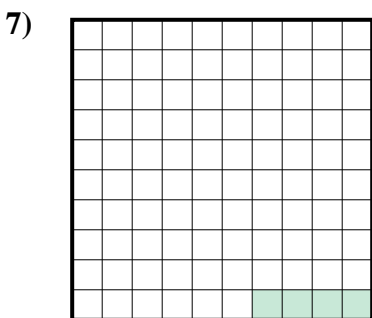
- A. 0.7
- B. 700.0
- C. 700.00
- D. 70



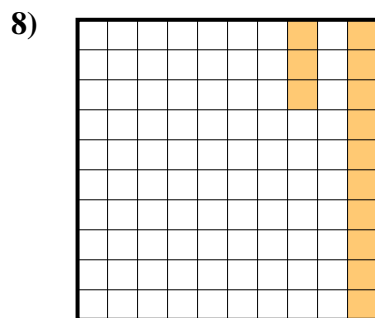
- A. 470.0
- B. 0.047
- C. 0.47
- D. 470.00



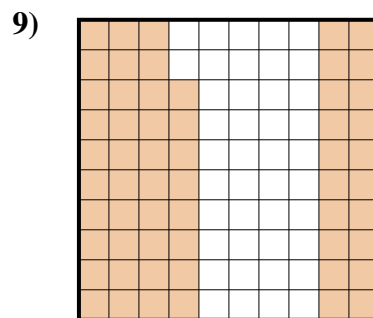
- A. 0.5
- B. 50
- C. 0.05
- D. 5



- A. 0.004
- B. 40.0
- C. 0.04
- D. 0.4



- A. 13
- B. 0.13
- C. 1.3
- D. 130.0



- A. 0.058
- B. 580.00
- C. 0.58
- D. 580.0