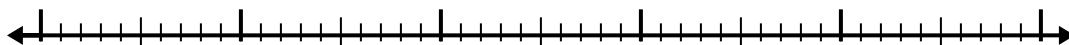


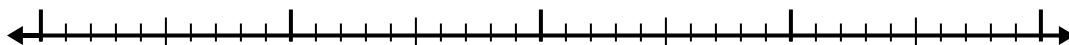


Use the number line to solve each problem.

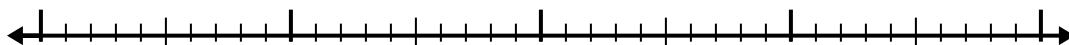
1)  $6.7 - 2.7 =$



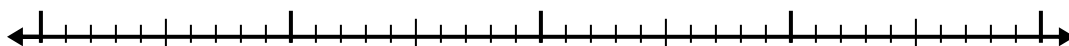
2)  $2.5 - 1.4 =$



3)  $9.2 - 1.6 =$



4)  $10.2 - 2.2 =$




5)  $7.1 - 2.9 =$



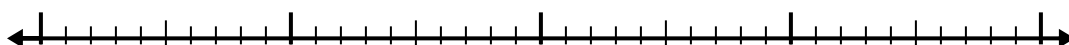
6)  $4.4 - 1.3 =$



7)  $4 - 1.7 =$




8)  $8.1 - 2.1 =$



9)  $8.1 - 3.6 =$



10)  $10.4 - 3.8 =$



Answers

1. \_\_\_\_\_

2. \_\_\_\_\_

3. \_\_\_\_\_

4. \_\_\_\_\_

5. \_\_\_\_\_

6. \_\_\_\_\_

7. \_\_\_\_\_

8. \_\_\_\_\_

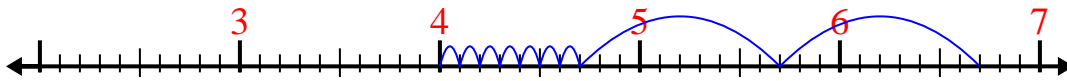
9. \_\_\_\_\_

10. \_\_\_\_\_



Use the number line to solve each problem.

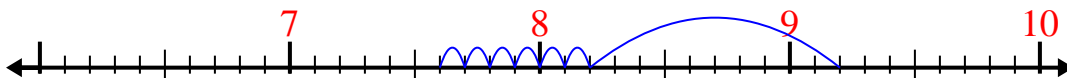
1)  $6.7 - 2.7 =$



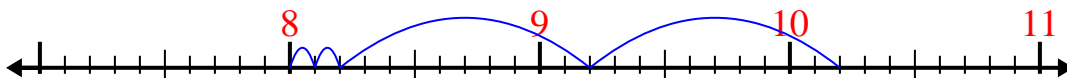
2)  $2.5 - 1.4 =$



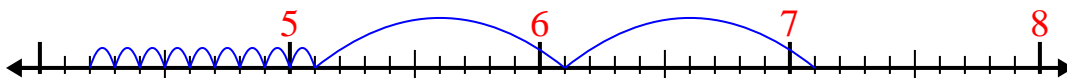
3)  $9.2 - 1.6 =$



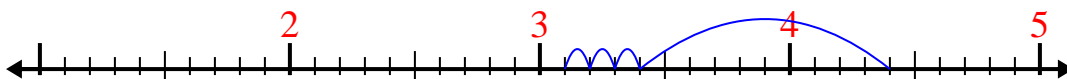
4)  $10.2 - 2.2 =$



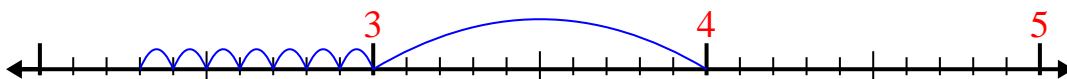
5)  $7.1 - 2.9 =$



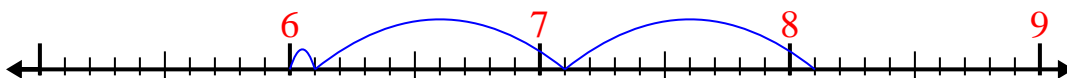
6)  $4.4 - 1.3 =$



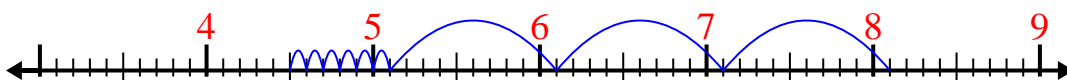
7)  $4 - 1.7 =$



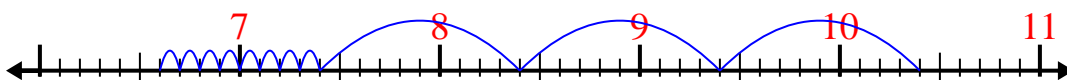
8)  $8.1 - 2.1 =$



9)  $8.1 - 3.6 =$



10)  $10.4 - 3.8 =$

**Answers**1. 42. 1.13. 7.64. 85. 4.26. 3.17. 2.38. 69. 4.510. 6.6