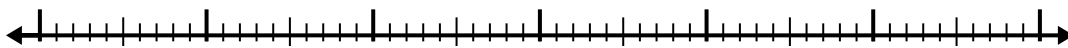


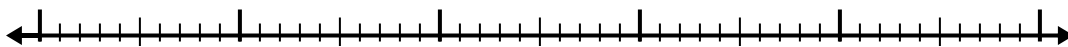


Use the number line to solve each problem.


1)  $9.7 - 3.2 =$




2)  $9.1 - 3.8 =$



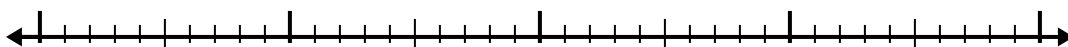
3)  $4.2 - 1.1 =$



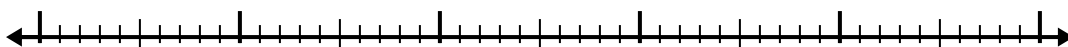
4)  $11.6 - 3.2 =$



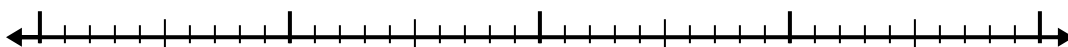
5)  $6.9 - 1.2 =$




6)  $4.8 - 2.8 =$



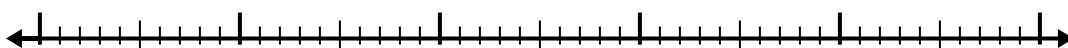
7)  $6 - 1.8 =$



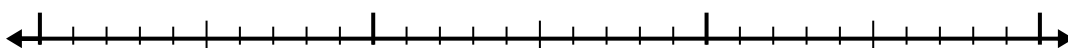
8)  $8 - 1.4 =$



9)  $8.2 - 3.9 =$



10)  $2.5 - 1.4 =$



Answers

1. \_\_\_\_\_

2. \_\_\_\_\_

3. \_\_\_\_\_

4. \_\_\_\_\_

5. \_\_\_\_\_

6. \_\_\_\_\_

7. \_\_\_\_\_

8. \_\_\_\_\_

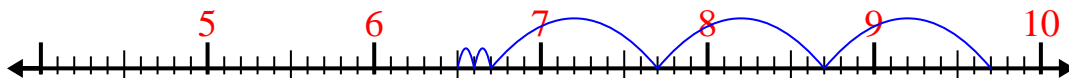
9. \_\_\_\_\_

10. \_\_\_\_\_

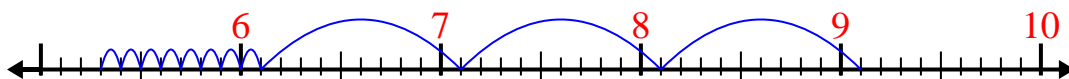


Use the number line to solve each problem.

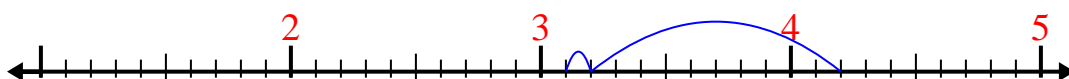
1)  $9.7 - 3.2 =$



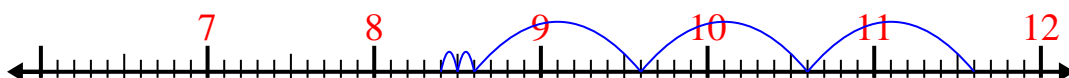
2)  $9.1 - 3.8 =$



3)  $4.2 - 1.1 =$



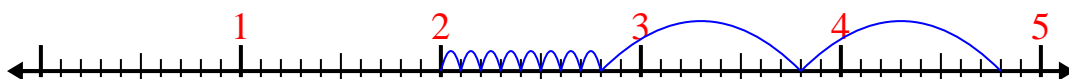
4)  $11.6 - 3.2 =$



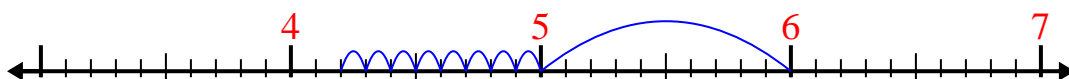
5)  $6.9 - 1.2 =$



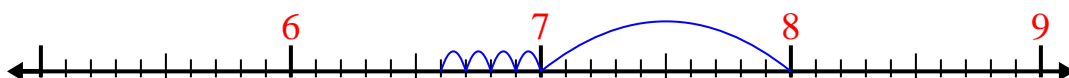
6)  $4.8 - 2.8 =$



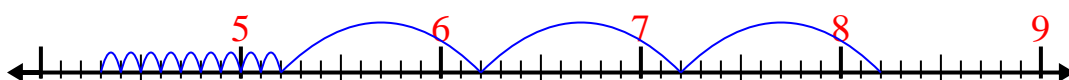
7)  $6 - 1.8 =$



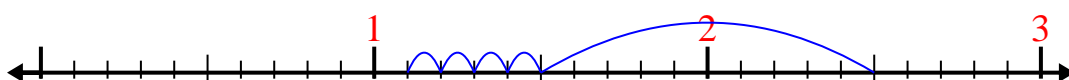
8)  $8 - 1.4 =$



9)  $8.2 - 3.9 =$



10)  $2.5 - 1.4 =$

Answers1. 6.52. 5.33. 3.14. 8.45. 5.76. 27. 4.28. 6.69. 4.310. 1.1