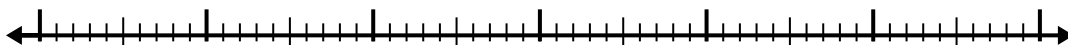


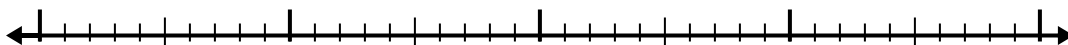


Use the number line to solve each problem.

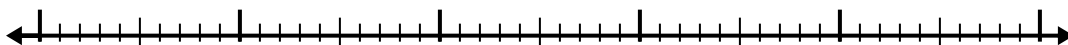
1) $9.1 - 3.6 =$



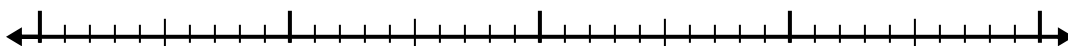
2) $8.1 - 1.6 =$



3) $6.7 - 3.2 =$



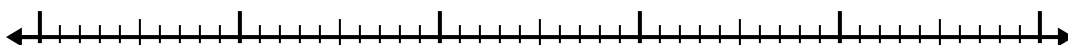
4) $10.3 - 2.6 =$



5) $5.8 - 1.9 =$



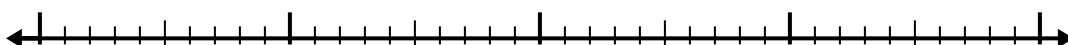
6) $8.2 - 2.3 =$




7) $5.9 - 1.6 =$



8) $11.2 - 2.9 =$



9) $10.5 - 3.5 =$



10) $8 - 2.4 =$



Answers

1. _____

2. _____

3. _____

4. _____

5. _____

6. _____

7. _____

8. _____

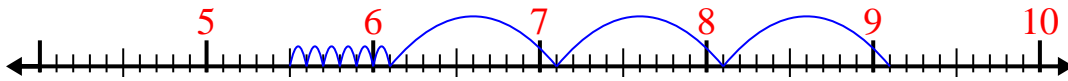
9. _____

10. _____

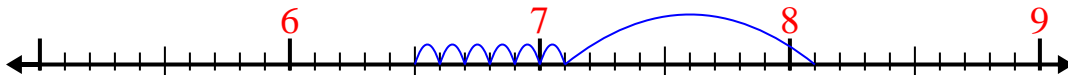


Use the number line to solve each problem.

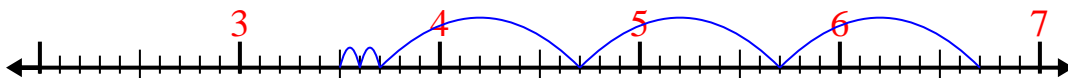
1) $9.1 - 3.6 =$



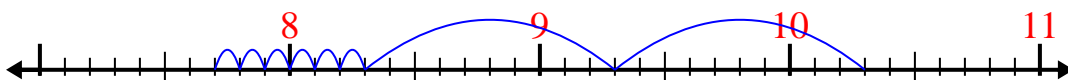
2) $8.1 - 1.6 =$



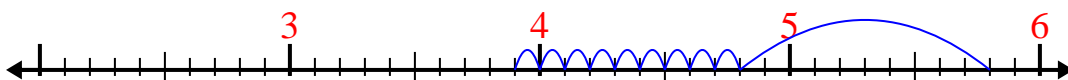
3) $6.7 - 3.2 =$



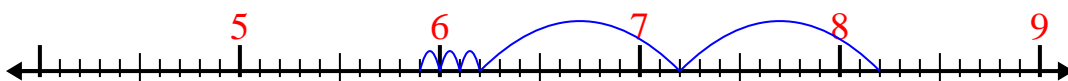
4) $10.3 - 2.6 =$



5) $5.8 - 1.9 =$



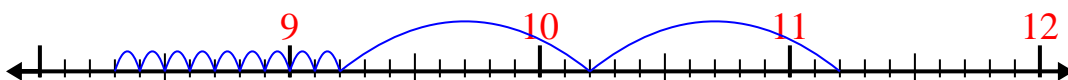
6) $8.2 - 2.3 =$



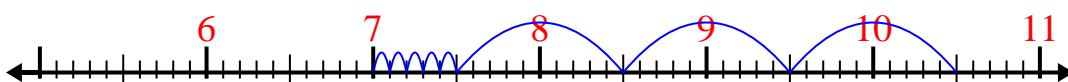
7) $5.9 - 1.6 =$



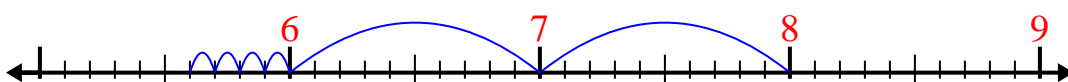
8) $11.2 - 2.9 =$



9) $10.5 - 3.5 =$



10) $8 - 2.4 =$

Answers1. 5.52. 6.53. 3.54. 7.75. 3.96. 5.97. 4.38. 8.39. 710. 5.6