


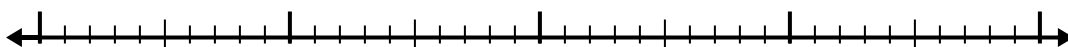


Use the number line to solve each problem.


1)  $5.5 - 3.4 =$




2)  $4.6 - 2.1 =$



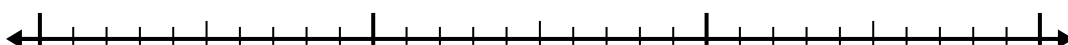
3)  $8.1 - 1.2 =$



4)  $8.1 - 1.3 =$



5)  $8.9 - 1.8 =$



6)  $5.9 - 2.1 =$



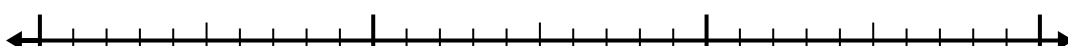
7)  $9.3 - 2.1 =$



8)  $7.8 - 1.8 =$



9)  $5.6 - 1.1 =$



10)  $6 - 2.7 =$



**Answers**

1. \_\_\_\_\_

2. \_\_\_\_\_

3. \_\_\_\_\_

4. \_\_\_\_\_

5. \_\_\_\_\_

6. \_\_\_\_\_

7. \_\_\_\_\_

8. \_\_\_\_\_

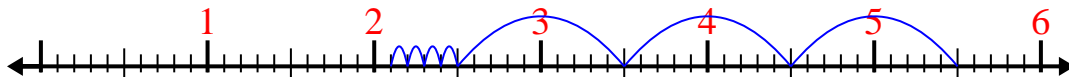
9. \_\_\_\_\_

10. \_\_\_\_\_

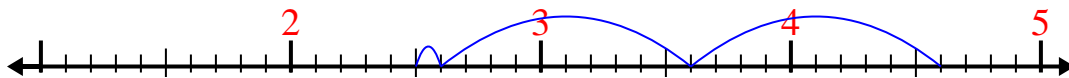


Use the number line to solve each problem.

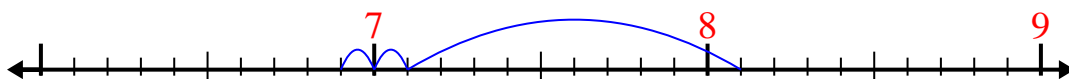
1)  $5.5 - 3.4 =$



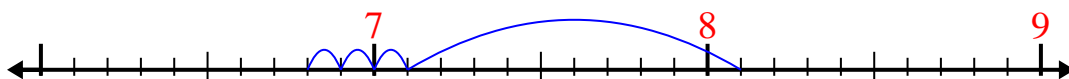
2)  $4.6 - 2.1 =$



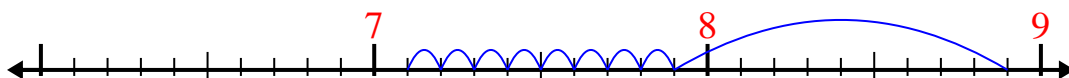
3)  $8.1 - 1.2 =$



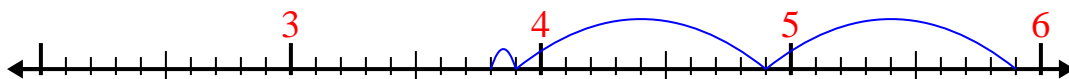
4)  $8.1 - 1.3 =$



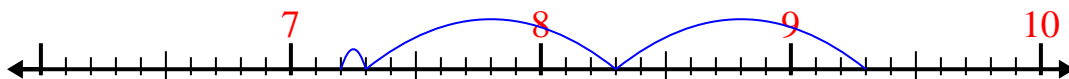
5)  $8.9 - 1.8 =$



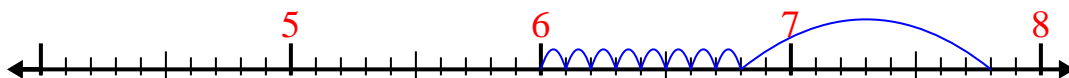
6)  $5.9 - 2.1 =$



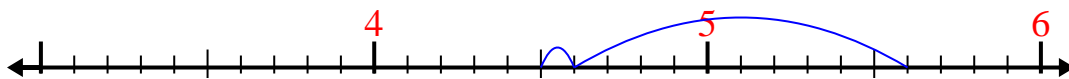
7)  $9.3 - 2.1 =$



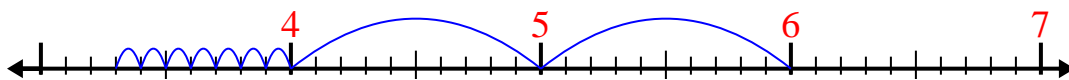
8)  $7.8 - 1.8 =$



9)  $5.6 - 1.1 =$



10)  $6 - 2.7 =$

Answers1. 2.12. 2.53. 6.94. 6.85. 7.16. 3.87. 7.28. 69. 4.510. 3.3