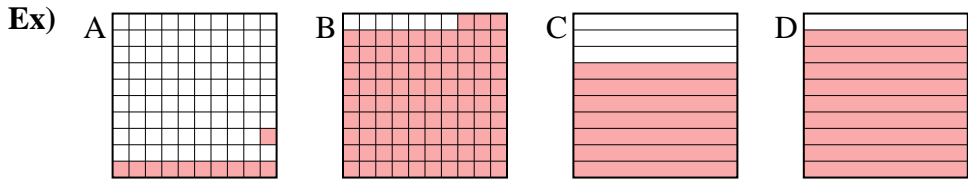




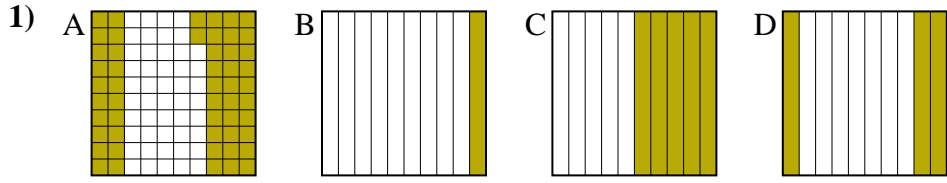
Put the boxes in order from least to greatest based on the shaded amount.

Answers



small 0.11 - A
0.7 - C
0.9 - D
 large 0.93 - B

Ex. **A,C,D,B**



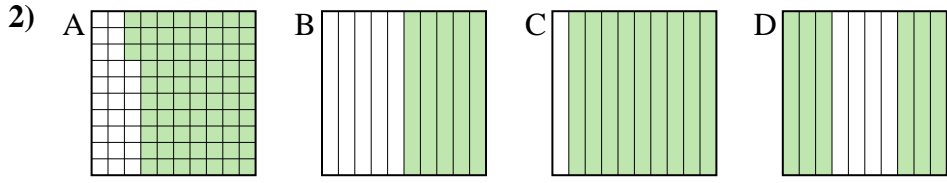
small _____

 large _____

1. _____

2. _____

3. _____

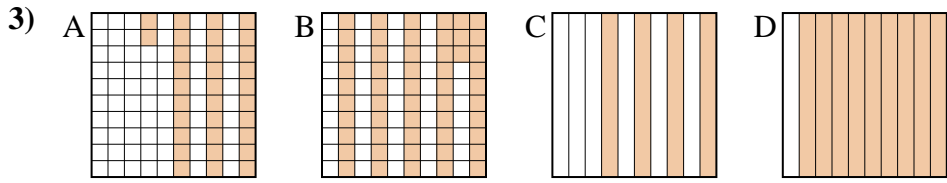


small _____

 large _____

4. _____

5. _____



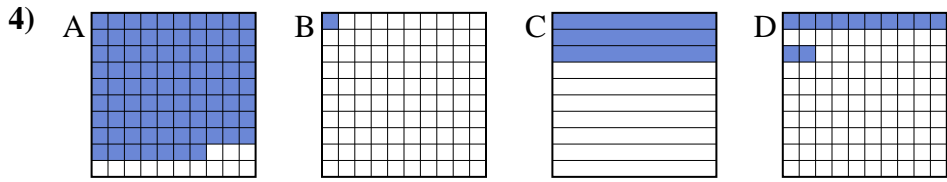
small _____

 large _____

6. _____

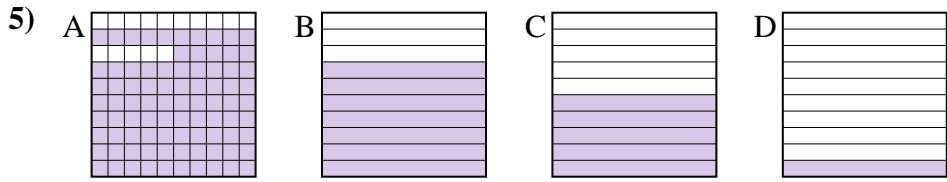
7. _____

8. _____



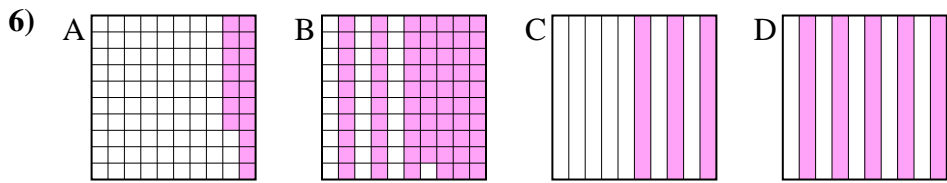
small _____

 large _____



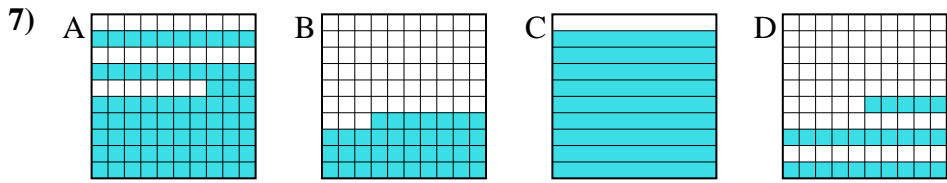
small _____

 large _____



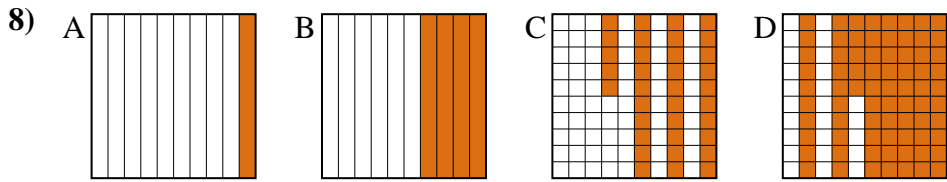
small _____

 large _____



small _____

 large _____

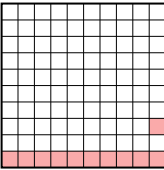
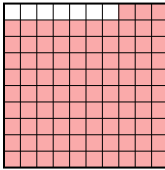




small _____

 large _____



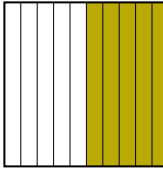



Put the boxes in order from least to greatest based on the shaded amount.

Ex) A  B  C  D 


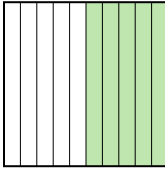

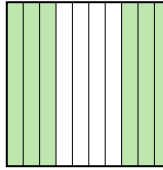
small 0.11 - A
0.7 - C
0.9 - D

large 0.93 - B

1) A  B  C  D 

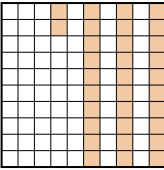
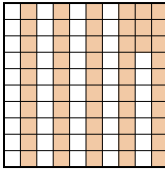
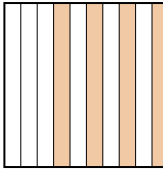
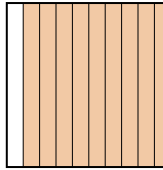
small 0.1 - B
0.3 - D
0.5 - C

large 0.52 - A

2) A  B  C  D 




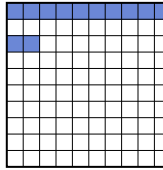
small 0.5 - B
0.6 - D
0.73 - A

large 0.9 - C

3) A  B  C  D 


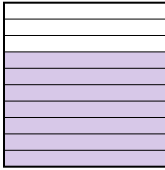


small 0.32 - A
0.4 - C
0.53 - B

large 0.9 - D

4) A  B  C  D 


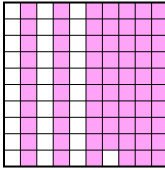


small 0.01 - B
0.12 - D
0.3 - C

large 0.87 - A

5) A  B  C  D 

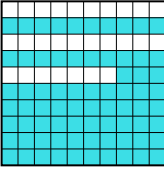
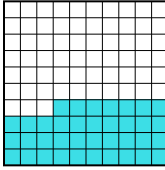

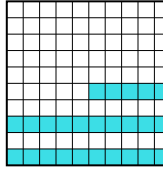
small 0.1 - D
0.5 - C
0.7 - B

large 0.85 - A

6) A  B  C  D 


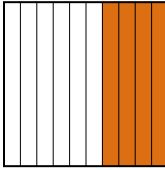
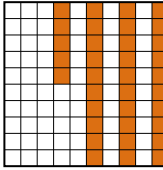
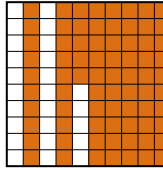
small 0.17 - A
0.3 - C
0.5 - D

large 0.69 - B

7) A  B  C  D 

small 0.25 - D
0.37 - B
0.73 - A

large 0.9 - C

8) A  B  C  D 

small 0.1 - A
0.35 - C
0.4 - B

large 0.75 - D

Answers

Ex. A,C,D,B

1. B,D,C,A

2. B,D,A,C

3. A,C,B,D

4. B,D,C,A

5. D,C,B,A

6. A,C,D,B

7. D,B,A,C

8. A,C,B,D