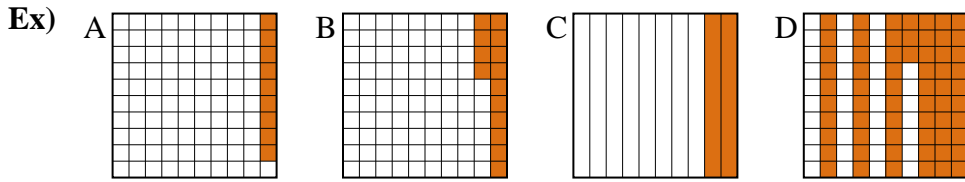




Put the boxes in order from least to greatest based on the shaded amount.

**Answers**



small 0.09 - A  
0.14 - B  
0.2 - C  
 large 0.63 - D

Ex. A,B,C,D

1. \_\_\_\_\_

2. \_\_\_\_\_

3. \_\_\_\_\_

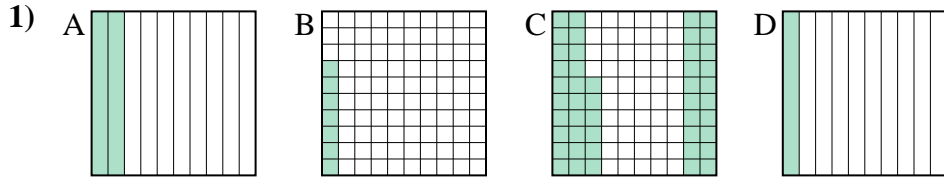
4. \_\_\_\_\_

5. \_\_\_\_\_

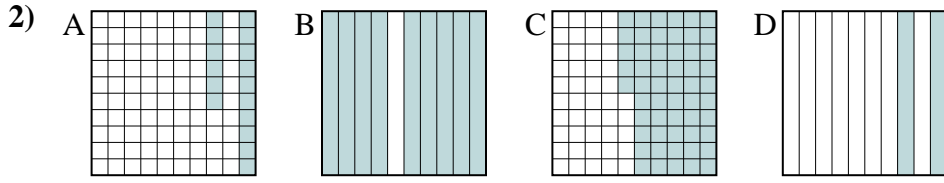
6. \_\_\_\_\_

7. \_\_\_\_\_

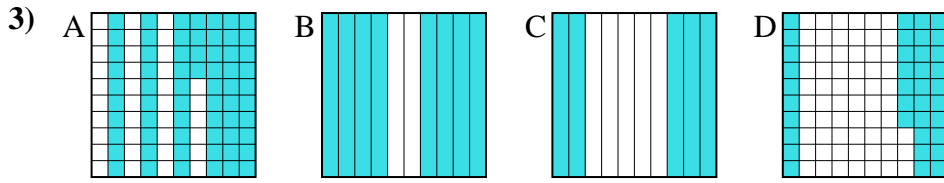
8. \_\_\_\_\_



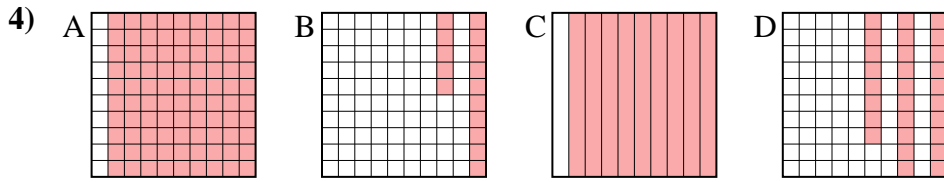
small \_\_\_\_\_  
 large \_\_\_\_\_



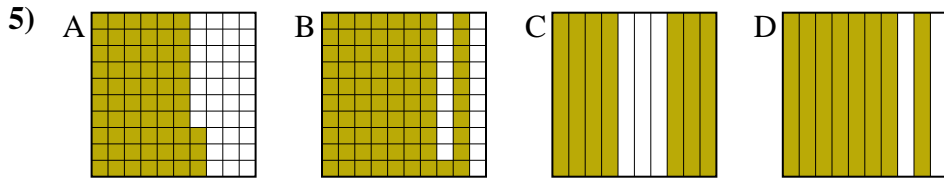
small \_\_\_\_\_  
 large \_\_\_\_\_



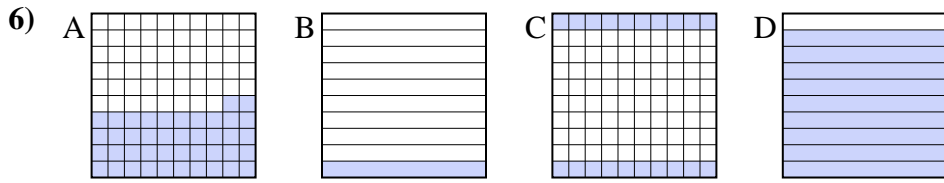
small \_\_\_\_\_  
 large \_\_\_\_\_



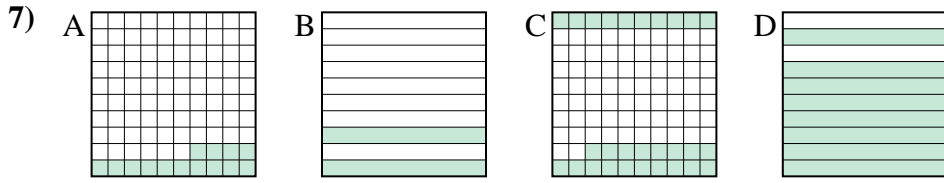
small \_\_\_\_\_  
 large \_\_\_\_\_



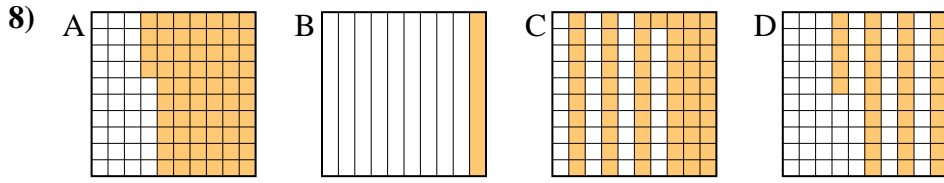
small \_\_\_\_\_  
 large \_\_\_\_\_



small \_\_\_\_\_  
 large \_\_\_\_\_



small \_\_\_\_\_  
 large \_\_\_\_\_



small \_\_\_\_\_  
 large \_\_\_\_\_



Put the boxes in order from least to greatest based on the shaded amount.

Ex) A B C D small  $\frac{0.09}{0.14} - A$   
 $\frac{0.2}{0.63} - C$   
 large  $\frac{0.63}{0.09} - D$

1) A B C D small  $\frac{0.07}{0.1} - B$   
 $\frac{0.2}{0.46} - A$   
 large  $\frac{0.46}{0.07} - C$

2) A B C D small  $\frac{0.16}{0.2} - A$   
 $\frac{0.55}{0.9} - C$   
 large  $\frac{0.9}{0.16} - B$

3) A B C D small  $\frac{0.37}{0.5} - D$   
 $\frac{0.64}{0.8} - A$   
 large  $\frac{0.8}{0.37} - B$

4) A B C D small  $\frac{0.15}{0.28} - B$   
 $\frac{0.9}{0.9} - A$   
 large  $\frac{0.9}{0.15} - A$

5) A B C D small  $\frac{0.63}{0.7} - A$   
 $\frac{0.8}{0.81} - D$   
 large  $\frac{0.81}{0.63} - B$

6) A B C D small  $\frac{0.1}{0.2} - B$   
 $\frac{0.42}{0.9} - A$   
 large  $\frac{0.9}{0.1} - D$

7) A B C D small  $\frac{0.14}{0.2} - A$   
 $\frac{0.28}{0.8} - C$   
 large  $\frac{0.8}{0.14} - D$

8) A B C D small  $\frac{0.1}{0.35} - B$   
 $\frac{0.61}{0.64} - C$   
 large  $\frac{0.64}{0.1} - A$

Answers

- Ex. A,B,C,D
1. B,D,A,C
2. A,D,C,B
3. D,C,A,B
4. B,D,A,A
5. A,C,D,B
6. B,C,A,D
7. A,B,C,D
8. B,D,C,A