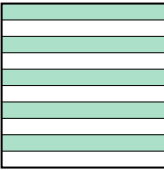
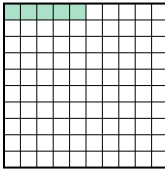
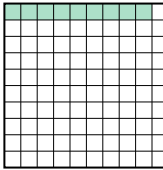





Put the boxes in order from least to greatest based on the shaded amount.


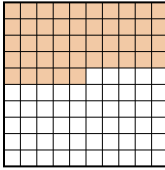
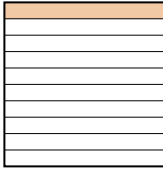
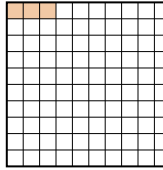
Answers

Ex) A  B  C  D 



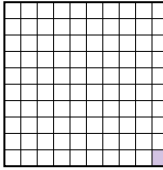
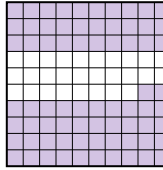
small 0.05 - B
0.09 - C
0.5 - A
large 0.6 - D

Ex. **B,C,A,D**

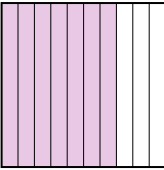
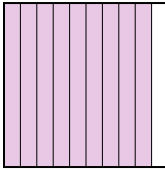

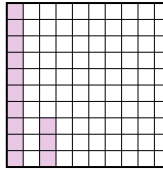
1. _____
2. _____
3. _____
4. _____
5. _____
6. _____
7. _____
8. _____

1) A  B  C  D 




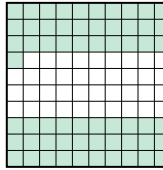
small _____
large _____

2) A  B  C  D 


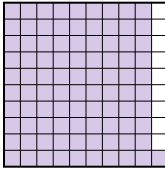
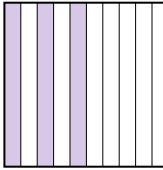
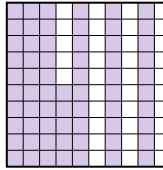
small _____
large _____

3) A  B  C  D 





small _____
large _____

4) A  B  C  D 

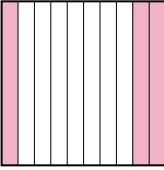
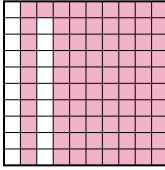
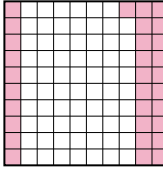
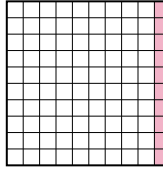
small _____
large _____

5) A  B  C  D 


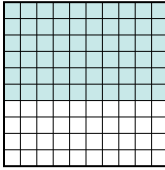

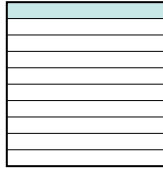
small _____
large _____

6) A  B  C  D 

small _____
large _____

7) A  B  C  D 

small _____
large _____

8) A  B  C  D 

small _____
large _____



Put the boxes in order from least to greatest based on the shaded amount.

Ex) A B C D small $\frac{0.05}{0.09}{0.5}{0.6}$ - B - C - A - D

1) A B C D small $\frac{0.03}{0.1}{0.4}{0.45}$ - D - C - A - B

2) A B C D small $\frac{0.01}{0.19}{0.72}{0.8}$ - C - A - D - B

3) A B C D small $\frac{0.13}{0.7}{0.83}{0.9}$ - D - A - C - B

4) A B C D small $\frac{0.39}{0.61}{0.8}{0.92}$ - A - D - B - C

5) A B C D small $\frac{0.3}{0.44}{0.65}{0.91}$ - C - A - D - B

6) A B C D small $\frac{0.03}{0.14}{0.3}{0.7}$ - D - B - A - C

7) A B C D small $\frac{0.1}{0.3}{0.31}{0.81}$ - D - A - C - B

8) A B C D small $\frac{0.1}{0.6}{0.7}{0.9}$ - D - B - A - C

Answers

- Ex. B,C,A,D
1. D,C,A,B
2. C,A,D,B
3. D,A,C,B
4. A,D,B,C
5. C,A,D,B
6. D,B,A,C
7. D,A,C,B
8. D,B,A,C