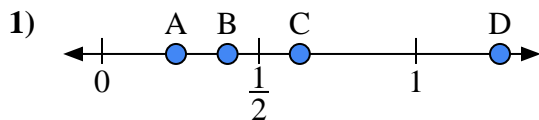
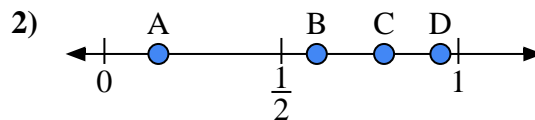




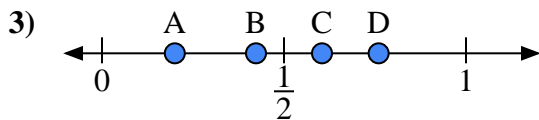
Use the number lines to answer the questions.

Answers

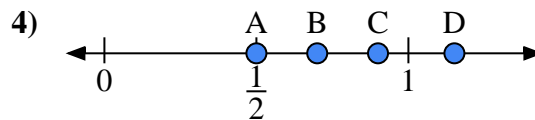
- a) Which letter best represents the location of 0.40?
- b) Which letter best represents the location of 0.63?



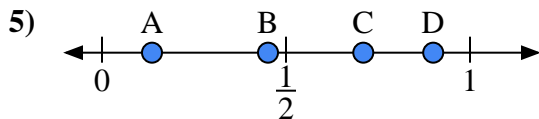
- a) Which letter best represents the location of 0.60?
- b) Which letter best represents the location of 0.79?



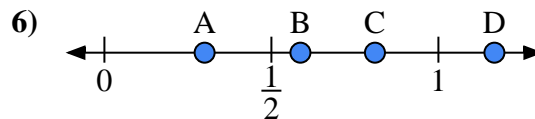
- a) Which letter best represents the location of 0.20?
- b) Which letter best represents the location of 0.76?



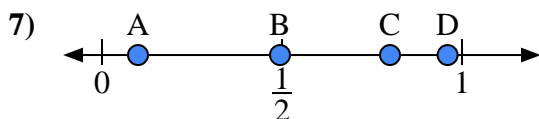
- a) Which letter best represents the location of 0.7?
- b) Which letter best represents the location of 0.90?



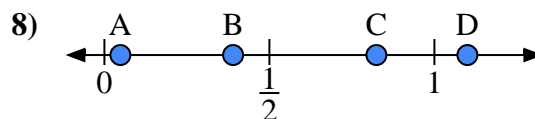
- a) Which letter best represents the location of 0.90?
- b) Which letter best represents the location of 0.71?



- a) Which letter best represents the location of 0.30?
- b) Which letter best represents the location of 0.81?



- a) Which letter best represents the location of 0.10?
- b) Which letter best represents the location of 0.96?

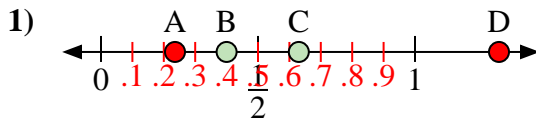


- a) Which letter best represents the location of 1.1?
- b) Which letter best represents the location of 0.39?

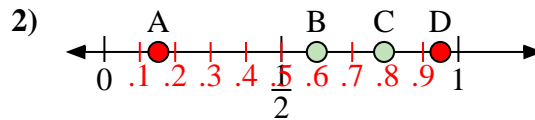
1. _____
2. _____
3. _____
4. _____
5. _____
6. _____
7. _____
8. _____



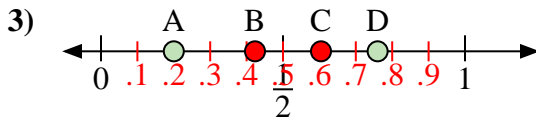
Use the number lines to answer the questions.

Answers

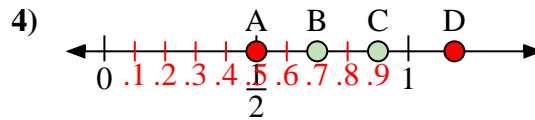
- a) Which letter best represents the location of 0.40?
- b) Which letter best represents the location of 0.63?



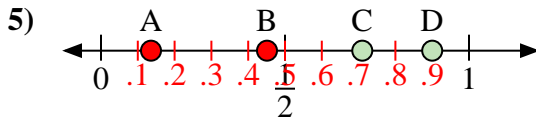
- a) Which letter best represents the location of 0.60?
- b) Which letter best represents the location of 0.79?



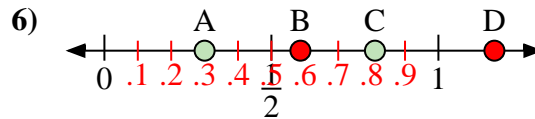
- a) Which letter best represents the location of 0.20?
- b) Which letter best represents the location of 0.76?



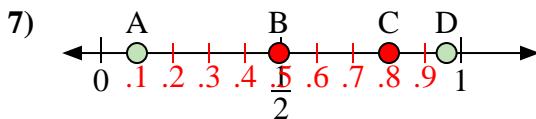
- a) Which letter best represents the location of 0.7?
- b) Which letter best represents the location of 0.90?



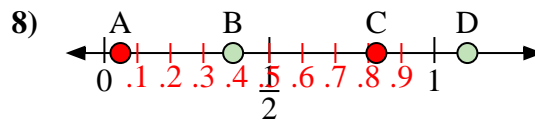
- a) Which letter best represents the location of 0.90?
- b) Which letter best represents the location of 0.71?



- a) Which letter best represents the location of 0.30?
- b) Which letter best represents the location of 0.81?



- a) Which letter best represents the location of 0.10?
- b) Which letter best represents the location of 0.96?



- a) Which letter best represents the location of 1.1?
- b) Which letter best represents the location of 0.39?

1. **B** **C**
2. **B** **C**
3. **A** **D**
4. **B** **C**
5. **D** **C**
6. **A** **C**
7. **A** **D**
8. **D** **B**