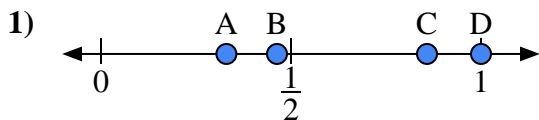


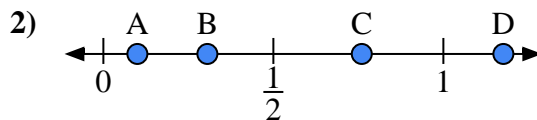


Use the number lines to answer the questions.

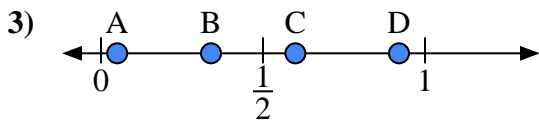
**Answers**



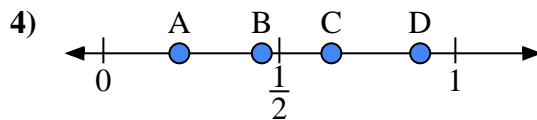
- a) Which letter best represents the location of 1.0?
- b) Which letter best represents the location of 0.33?



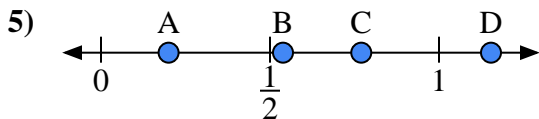
- a) Which letter best represents the location of 0.10?
- b) Which letter best represents the location of 0.76?



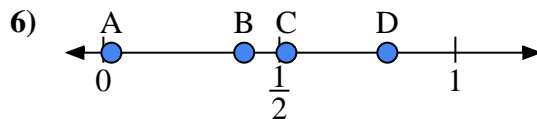
- a) Which letter best represents the location of 0.60?
- b) Which letter best represents the location of 0.05?



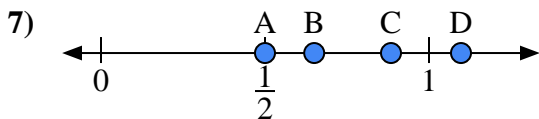
- a) Which letter best represents the location of 0.90?
- b) Which letter best represents the location of 0.45?



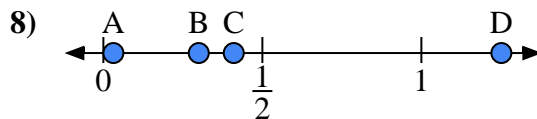
- a) Which letter best represents the location of 0.2?
- b) Which letter best represents the location of 0.77?



- a) Which letter best represents the location of 0.40?
- b) Which letter best represents the location of 0.52?



- a) Which letter best represents the location of 0.5?
- b) Which letter best represents the location of 0.65?

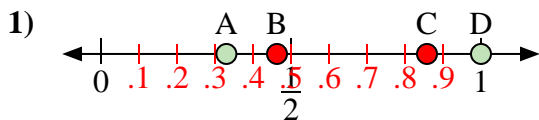


- a) Which letter best represents the location of 0.30?
- b) Which letter best represents the location of 0.41?

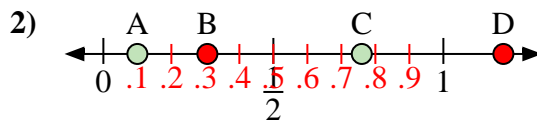
- 1. \_\_\_\_\_
- 2. \_\_\_\_\_
- 3. \_\_\_\_\_
- 4. \_\_\_\_\_
- 5. \_\_\_\_\_
- 6. \_\_\_\_\_
- 7. \_\_\_\_\_
- 8. \_\_\_\_\_



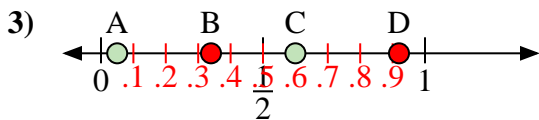
Use the number lines to answer the questions.



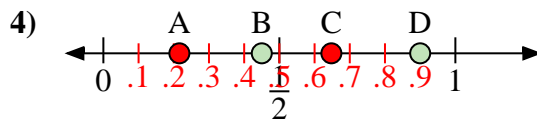
- a) Which letter best represents the location of 1.0?
- b) Which letter best represents the location of 0.33?



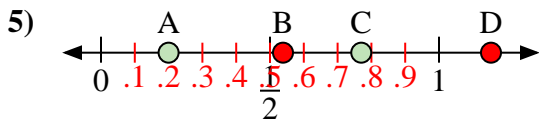
- a) Which letter best represents the location of 0.10?
- b) Which letter best represents the location of 0.76?



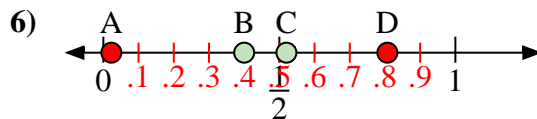
- a) Which letter best represents the location of 0.60?
- b) Which letter best represents the location of 0.05?



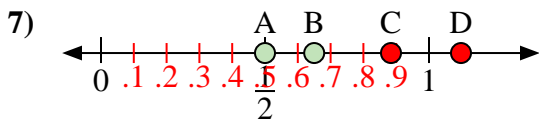
- a) Which letter best represents the location of 0.90?
- b) Which letter best represents the location of 0.45?



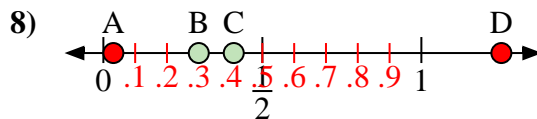
- a) Which letter best represents the location of 0.2?
- b) Which letter best represents the location of 0.77?



- a) Which letter best represents the location of 0.40?
- b) Which letter best represents the location of 0.52?



- a) Which letter best represents the location of 0.5?
- b) Which letter best represents the location of 0.65?



- a) Which letter best represents the location of 0.30?
- b) Which letter best represents the location of 0.41?

**Answers**

- 1. D A
- 2. A C
- 3. C A
- 4. D B
- 5. A C
- 6. B C
- 7. A B
- 8. B C