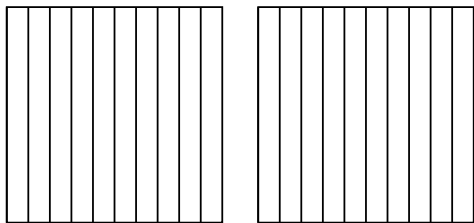


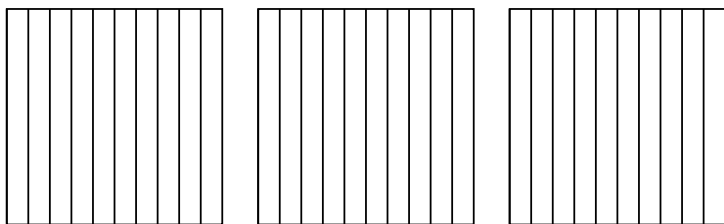


Use the visual model to solve each problem.

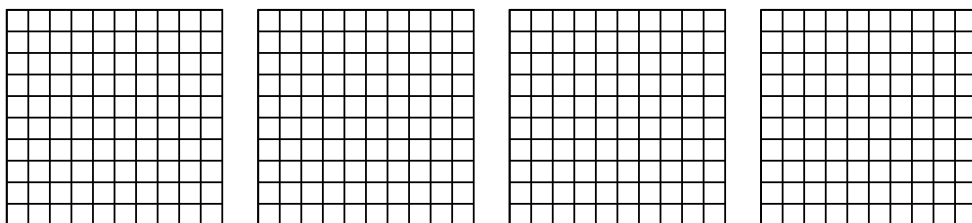
1) $2 \times 0.7 =$




2) $3 \times 0.5 =$



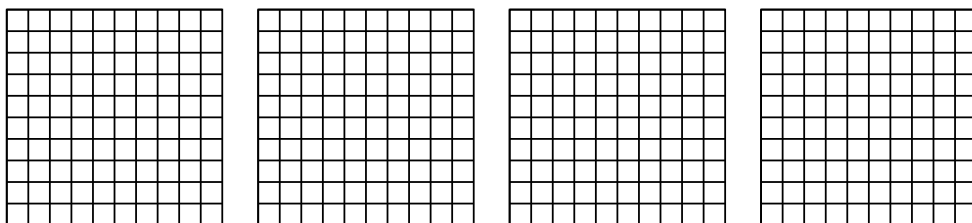
3) $4 \times 0.92 =$



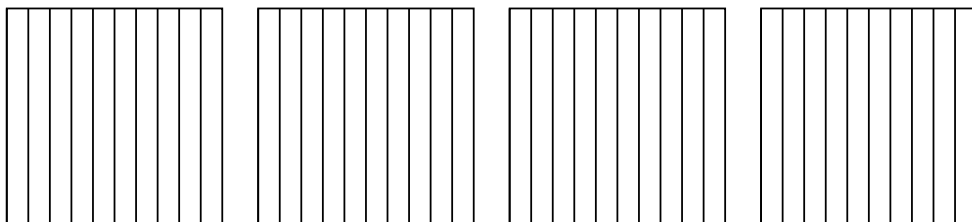
4) $3 \times 0.73 =$



5) $4 \times 0.20 =$



6) $4 \times 0.7 =$



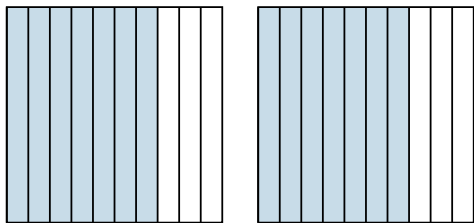
Answers

- 1. _____
- 2. _____
- 3. _____
- 4. _____
- 5. _____
- 6. _____

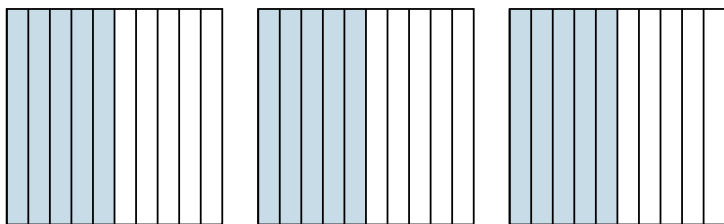


Use the visual model to solve each problem.

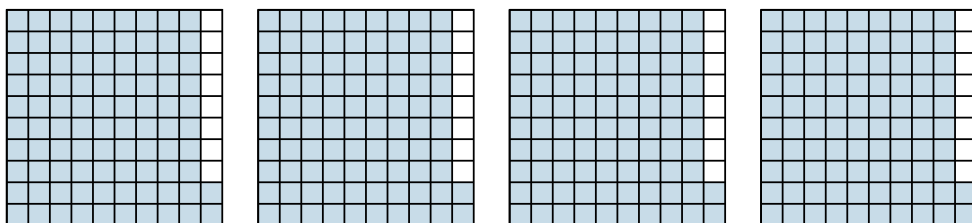
1) $2 \times 0.7 =$



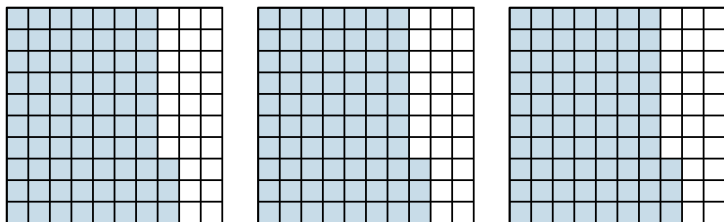
2) $3 \times 0.5 =$



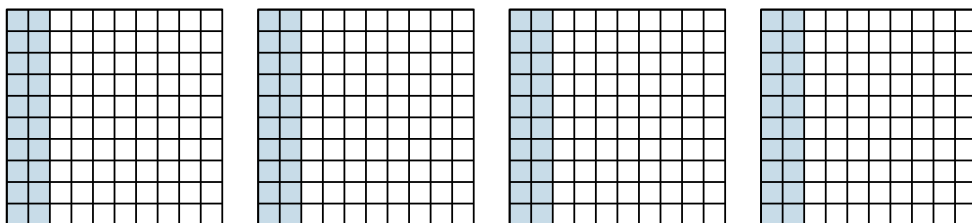
3) $4 \times 0.92 =$



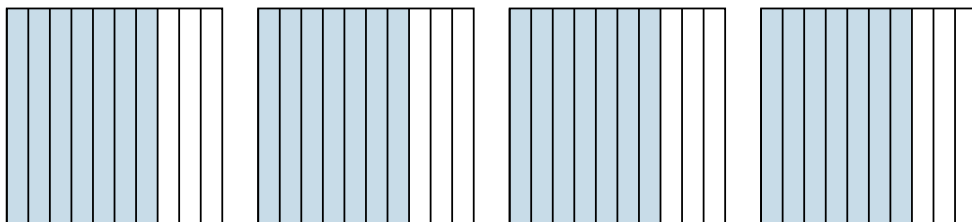
4) $3 \times 0.73 =$



5) $4 \times 0.20 =$



6) $4 \times 0.7 =$



Answers

1. $\frac{14}{10} = 1.4$

2. $\frac{15}{10} = 1.5$

3. $\frac{368}{100} = 3.68$

4. $\frac{219}{100} = 2.19$

5. $\frac{80}{100} = 0.8$

6. $\frac{28}{10} = 2.8$