





Use the visual model to solve each problem.


1) $0.9 \times 0.6 =$




2) $0.3 \times 0.2 =$




3) $0.6 \times 0.2 =$




4) $0.6 \times 0.5 =$




5) $0.3 \times 0.6 =$




6) $0.8 \times 0.3 =$




7) $0.9 \times 0.3 =$




8) $0.7 \times 0.1 =$




9) $0.8 \times 0.7 =$




10) $0.3 \times 0.3 =$




11) $0.8 \times 0.6 =$




12) $0.1 \times 0.1 =$




13) $0.9 \times 0.2 =$



14) $0.8 \times 0.4 =$



15) $0.2 \times 0.4 =$



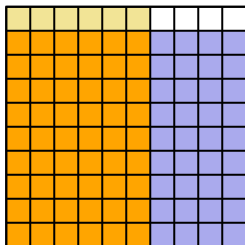
Answers

1. _____
2. _____
3. _____
4. _____
5. _____
6. _____
7. _____
8. _____
9. _____
10. _____
11. _____
12. _____
13. _____
14. _____
15. _____

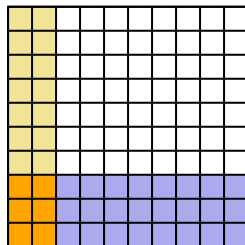


Use the visual model to solve each problem.

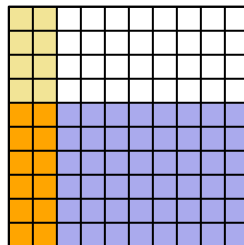
1) $0.9 \times 0.6 =$



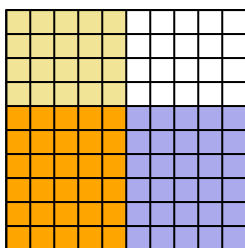
2) $0.3 \times 0.2 =$



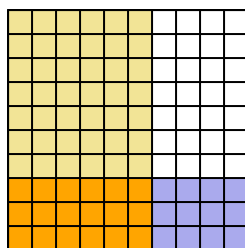
3) $0.6 \times 0.2 =$



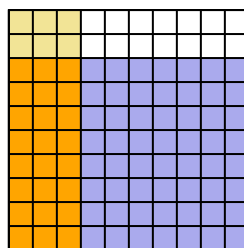
4) $0.6 \times 0.5 =$



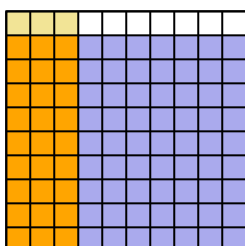
5) $0.3 \times 0.6 =$



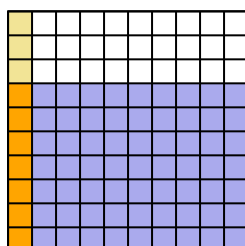
6) $0.8 \times 0.3 =$



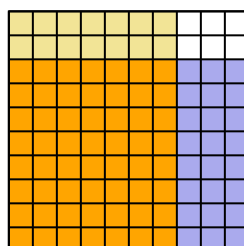
7) $0.9 \times 0.3 =$



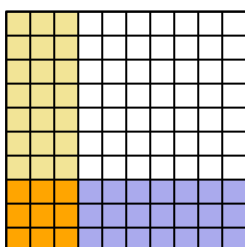
8) $0.7 \times 0.1 =$



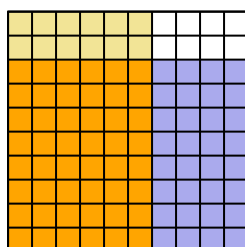
9) $0.8 \times 0.7 =$



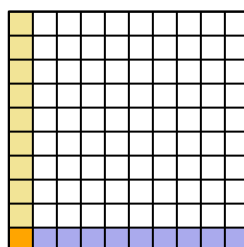
10) $0.3 \times 0.3 =$



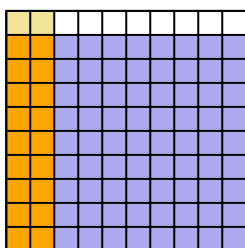
11) $0.8 \times 0.6 =$



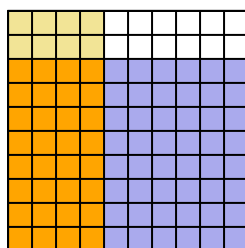
12) $0.1 \times 0.1 =$



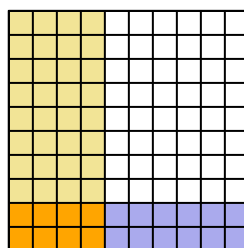
13) $0.9 \times 0.2 =$



14) $0.8 \times 0.4 =$



15) $0.2 \times 0.4 =$



Answers

1. $\frac{54}{100} = 0.54$
2. $\frac{6}{100} = 0.06$
3. $\frac{12}{100} = 0.12$
4. $\frac{30}{100} = 0.3$
5. $\frac{18}{100} = 0.18$
6. $\frac{24}{100} = 0.24$
7. $\frac{27}{100} = 0.27$
8. $\frac{7}{100} = 0.07$
9. $\frac{56}{100} = 0.56$
10. $\frac{9}{100} = 0.09$
11. $\frac{48}{100} = 0.48$
12. $\frac{1}{100} = 0.01$
13. $\frac{18}{100} = 0.18$
14. $\frac{32}{100} = 0.32$
15. $\frac{8}{100} = 0.08$