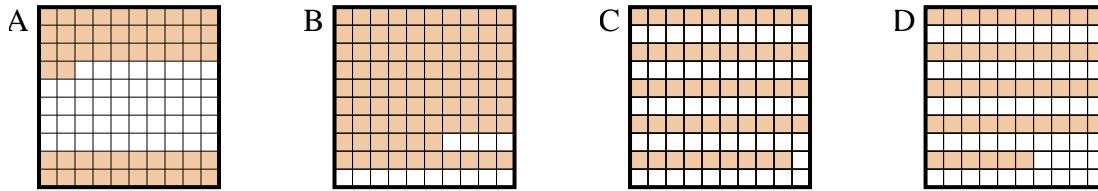




Determine which letter best answer the question.

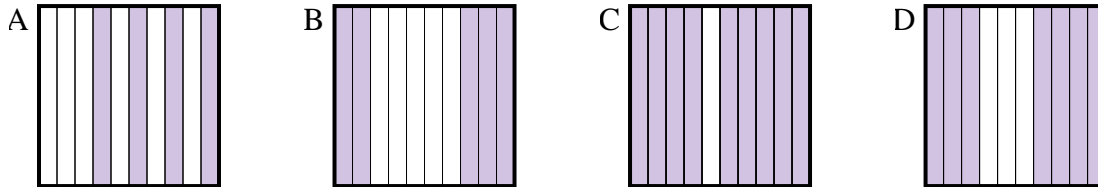
Answers

1) Which 10×10 grid is shaded to represent the decimal number that, when added to 0.48, results in a total of 1.00?



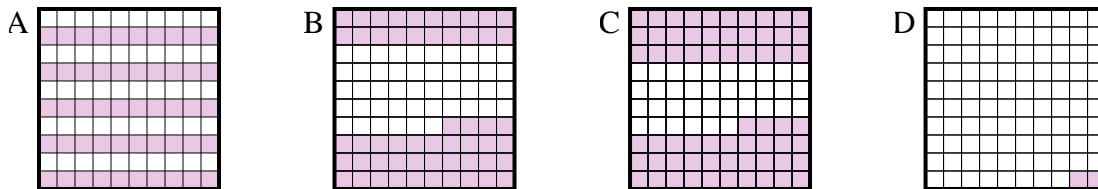
1. _____

2) Which 10×1 grid is shaded to represent the decimal number that, when added to 0.5, results in a total of 1.00?



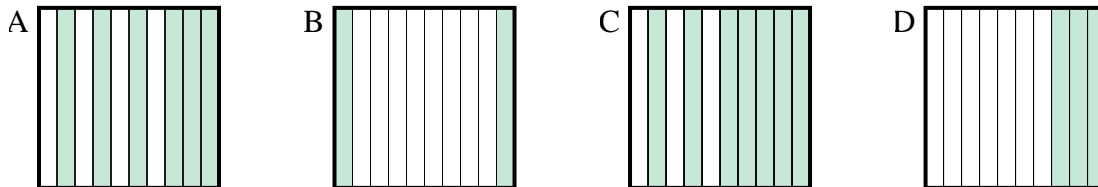
2. _____

3) Which 10×10 grid is shaded to represent the decimal number that, when added to 0.5, results in a total of 1.00?



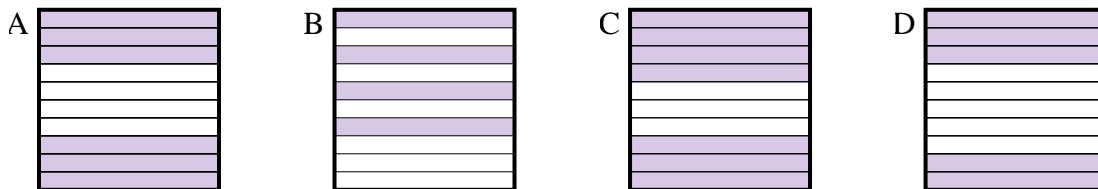
3. _____

4) Which 10×1 grid is shaded to represent the decimal number that, when added to 0.8, results in a total of 1.00?



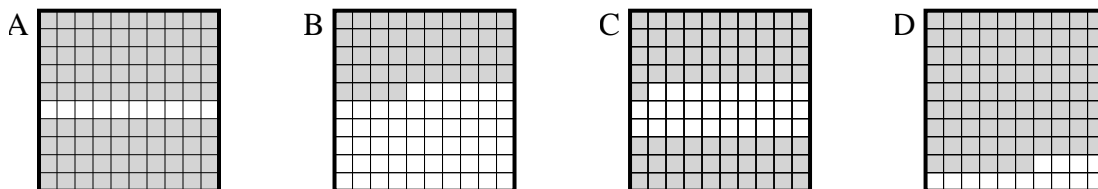
4. _____

5) Which 10×1 grid is shaded to represent the decimal number that, when added to 0.6, results in a total of 1.00?



5. _____

6) Which 10×10 grid is shaded to represent the decimal number that, when added to 0.1, results in a total of 1.00?

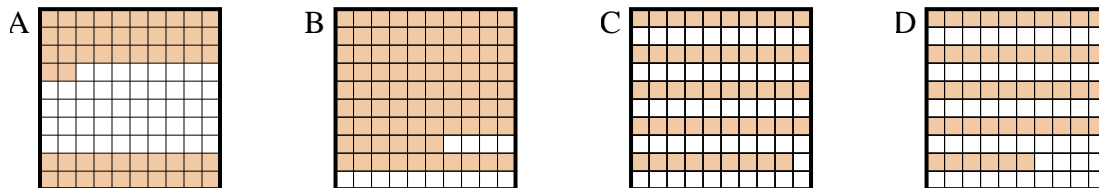


6. _____

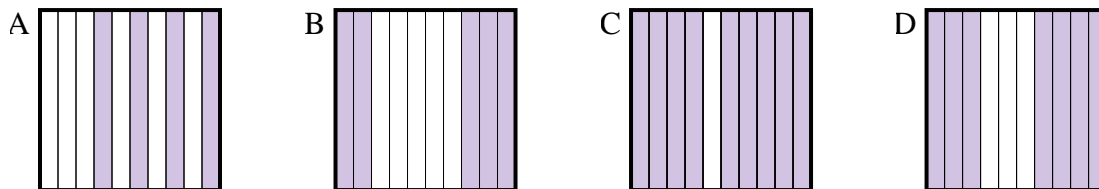


Determine which letter best answer the question.

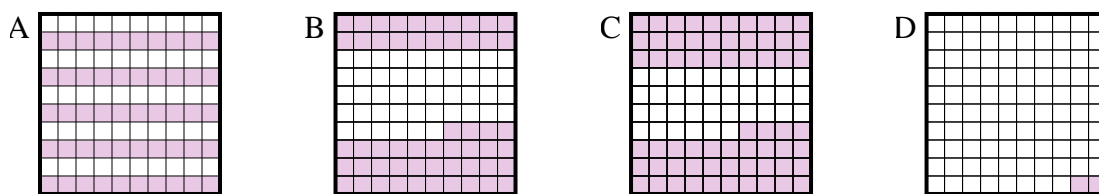
1) Which 10×10 grid is shaded to represent the decimal number that, when added to 0.48, results in a total of 1.00?



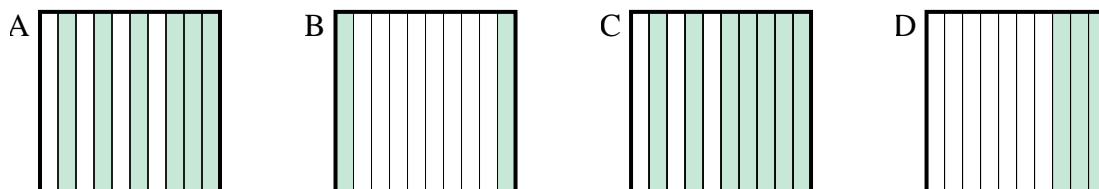
2) Which 10×1 grid is shaded to represent the decimal number that, when added to 0.5, results in a total of 1.00?



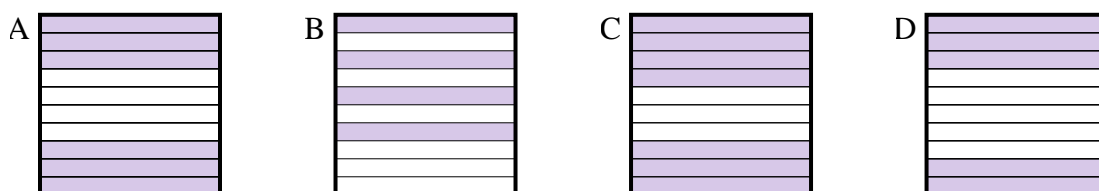
3) Which 10×10 grid is shaded to represent the decimal number that, when added to 0.5, results in a total of 1.00?



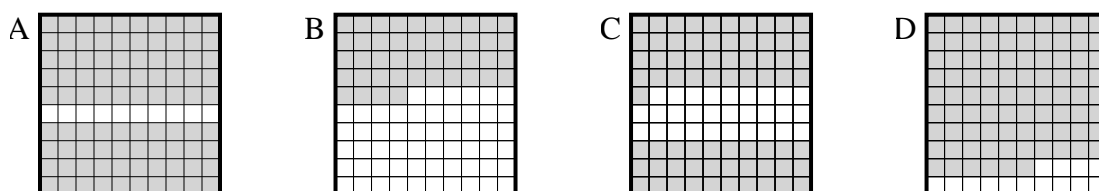
4) Which 10×1 grid is shaded to represent the decimal number that, when added to 0.8, results in a total of 1.00?



5) Which 10×1 grid is shaded to represent the decimal number that, when added to 0.6, results in a total of 1.00?



6) Which 10×10 grid is shaded to represent the decimal number that, when added to 0.1, results in a total of 1.00?



Answers

1. **A**

2. **B**

3. **A**

4. **B**

5. **B**

6. **A**