


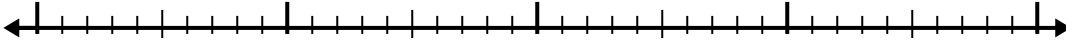


Use the number line to solve each problem.

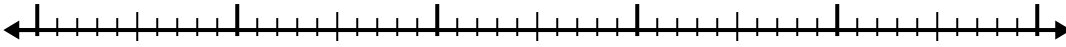
1)  $1.3 + 3.7 =$



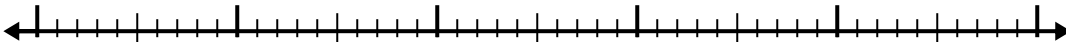
2)  $7.2 + 1.3 =$



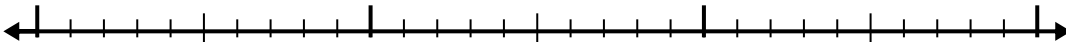
3)  $8 + 3.5 =$



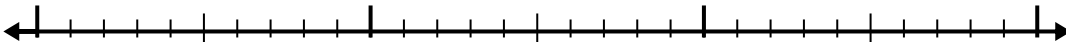
4)  $6.2 + 2.1 =$




5)  $7.3 + 1.9 =$



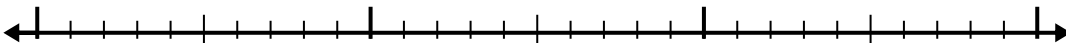
6)  $5 + 1.7 =$



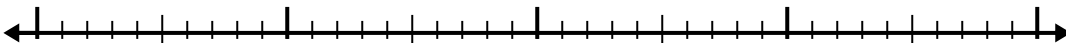
7)  $4.9 + 1.4 =$



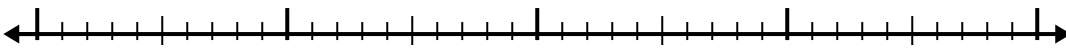
8)  $5.1 + 1.4 =$



9)  $7.4 + 1.5 =$



10)  $6.3 + 1.2 =$



Answers

1. \_\_\_\_\_

2. \_\_\_\_\_

3. \_\_\_\_\_

4. \_\_\_\_\_

5. \_\_\_\_\_

6. \_\_\_\_\_

7. \_\_\_\_\_

8. \_\_\_\_\_

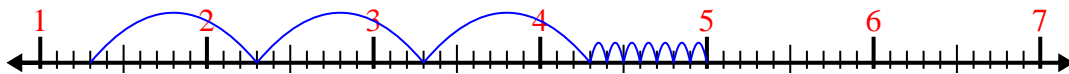
9. \_\_\_\_\_

10. \_\_\_\_\_



Use the number line to solve each problem.


1)  $1.3 + 3.7 =$



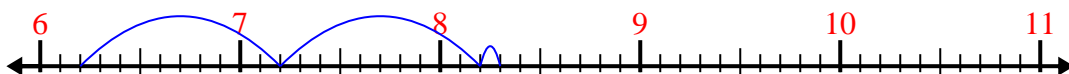
2)  $7.2 + 1.3 =$



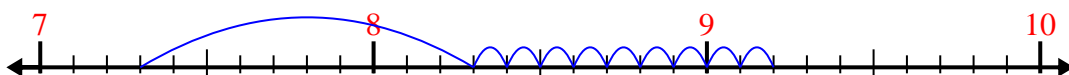
3)  $8 + 3.5 =$



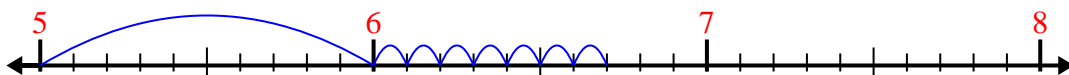
4)  $6.2 + 2.1 =$



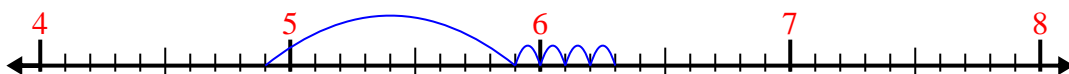
5)  $7.3 + 1.9 =$



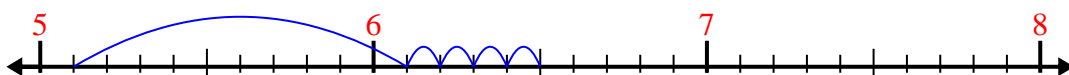
6)  $5 + 1.7 =$



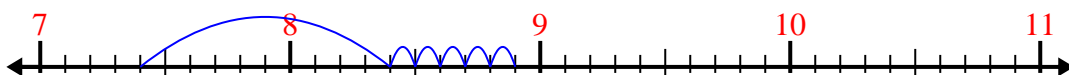
7)  $4.9 + 1.4 =$



8)  $5.1 + 1.4 =$



9)  $7.4 + 1.5 =$



10)  $6.3 + 1.2 =$



Answers

1. 5.0

2. 8.5

3. 11.5

4. 8.3

5. 9.2

6. 6.7

7. 6.3

8. 6.5

9. 8.9

10. 7.5