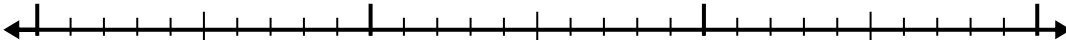


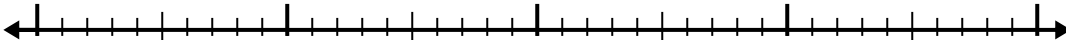


Use the number line to solve each problem.

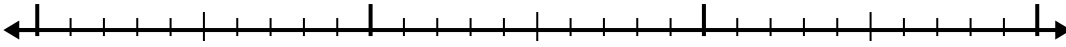
1) $1.2 + 1.3 =$



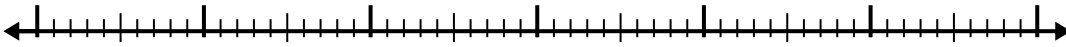
2) $8.4 + 2.4 =$



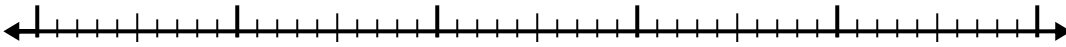
3) $2.8 + 1.7 =$



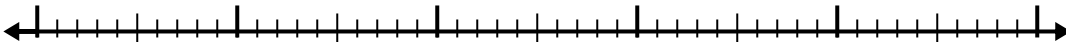
4) $6.1 + 3.8 =$



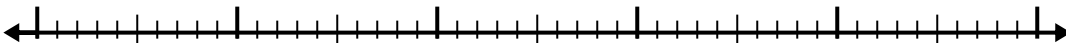
5) $1.9 + 2.5 =$



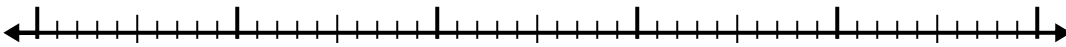
6) $7.3 + 2.4 =$



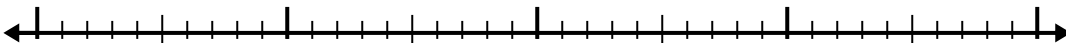
7) $8.9 + 3.7 =$



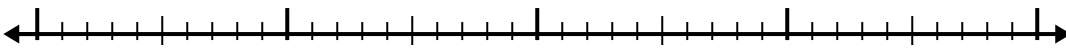
8) $3.5 + 2.7 =$



9) $6.1 + 1.6 =$



10) $4.4 + 2.1 =$



Answers

1. _____

2. _____

3. _____

4. _____

5. _____

6. _____

7. _____

8. _____

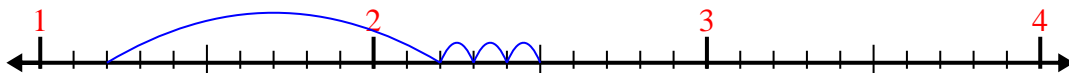
9. _____

10. _____

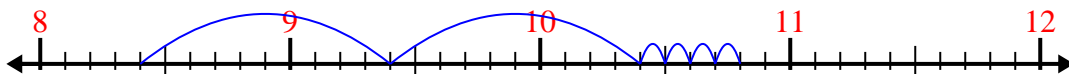


Use the number line to solve each problem.


1) $1.2 + 1.3 =$



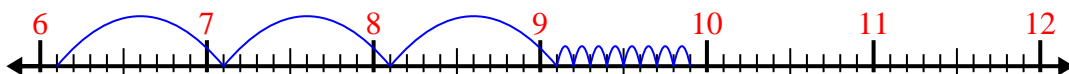
2) $8.4 + 2.4 =$




3) $2.8 + 1.7 =$



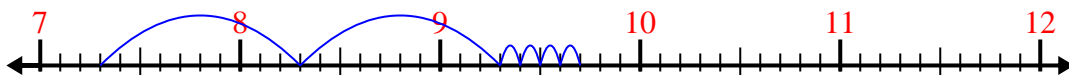
4) $6.1 + 3.8 =$




5) $1.9 + 2.5 =$



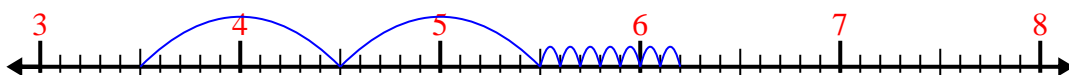
6) $7.3 + 2.4 =$



7) $8.9 + 3.7 =$



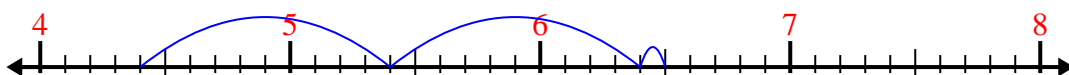
8) $3.5 + 2.7 =$



9) $6.1 + 1.6 =$



10) $4.4 + 2.1 =$



Answers

1. 2.5

2. 10.8

3. 4.5

4. 9.9

5. 4.4

6. 9.7

7. 12.6

8. 6.2

9. 7.7

10. 6.5