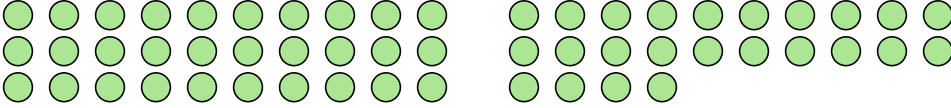


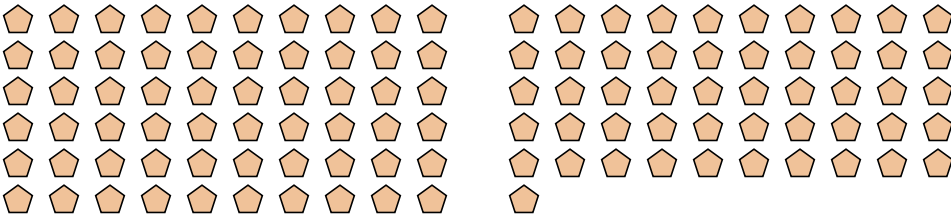


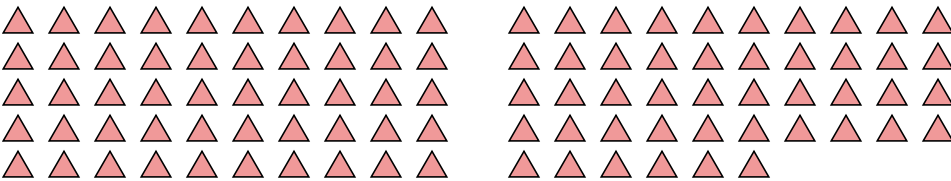
Count the number of shapes shown.

1) 

2) 

3) 

4) 

5) 

Answers

1. _____

2. _____

3. _____

4. _____

5. _____

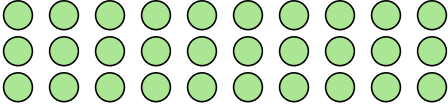
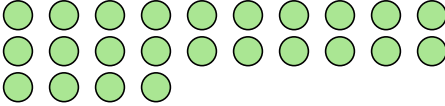


Count the number of shapes shown.

1) 

Answers

1. 1

2)  

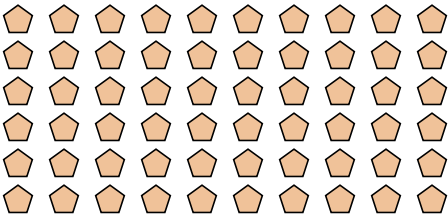
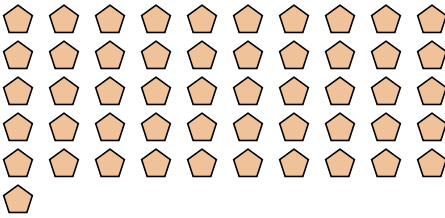
2. 54

3. 27

3)  

4. 111

5. 96

4)  

5) 