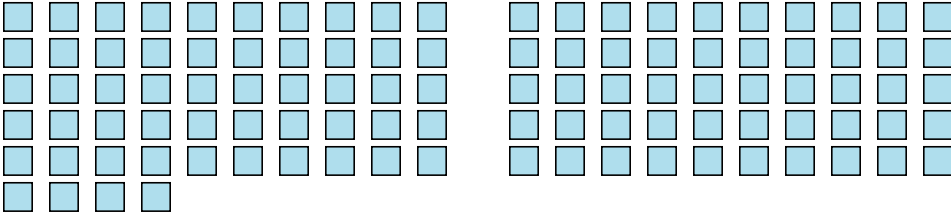




Count the number of shapes shown.

Answers

1) 

1. _____

2. _____

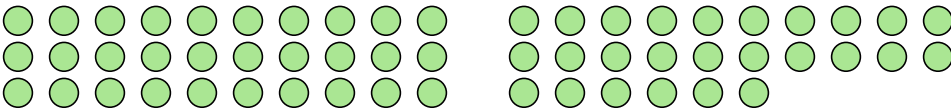
3. _____

2) 

4. _____

5. _____

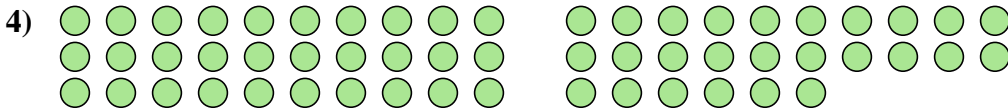
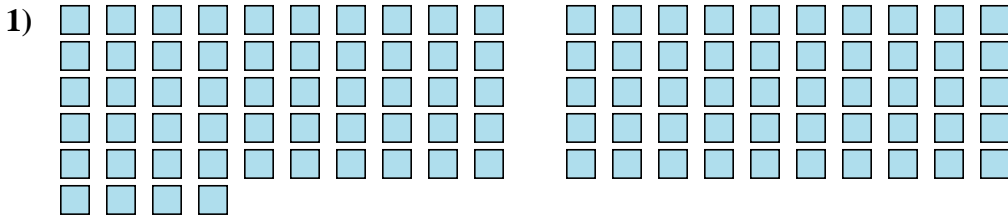
3) 

4) 

5) 



Count the number of shapes shown.



Answers

1. 104

2. 69

3. 17

4. 56

5. 25