



Determine which letter best represents the volume.

Milliliter

A milliliter is equal to about 20 drops of water.



Liter

Many large soda bottles are either 1 or 2 liters.


1 Liter = 1,000 Milliliters



Answers

1. _____
2. _____
3. _____
4. _____
5. _____
6. _____
7. _____
8. _____
9. _____

1)



Eyedropper holds

- A. 500 milliliters
- B. 1000 milliliters
- C. 2 liters
- D. 2 milliliters

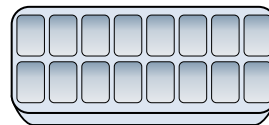
2)



Soda in a can

- A. 2 liters
- B. 2 milliliters
- C. 350 liters
- D. 350 milliliters


3)



Water in an ice tray

- A. 2 milliliters
- B. 50 milliliters
- C. 2 liters
- D. 0.5 liters

4)



Bathtub

- A. 3 liters
- B. 500 milliliters
- C. 170 liters
- D. 5 milliliters


5)



Ink in a pen

- A. 0.25 milliliters
- B. 2 milliliters
- C. 400 milliliters
- D. 1 liter

6)



Water a barrel holds

- A. 200 milliliters
- B. 200 liters
- C. 5 milliliters
- D. 3 liters


7)



Measuring Cup

- A. 50 milliliters
- B. 237 milliliters
- C. 1 liter
- D. 237 liters

8)



Shampoo in a bottle

- A. 1.5 liters
- B. 1 milliliter
- C. 20 liters
- D. 20 milliliters

9)



Toothpaste in a tube

- A. 1 liter
- B. 2 liters
- C. 5 milliliters
- D. 120 milliliters



Determine which letter best represents the volume.

Milliliter

A milliliter is equal to about 20 drops of water.



Liter


Many large soda bottles are either 1 or 2 liters.

1 Liter = 1,000 Milliliters




Answers

1)



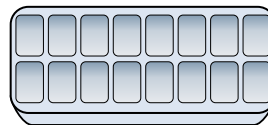
- Eyedropper holds
 A. 500 milliliters
 B. 1000 milliliters
 C. 2 liters
 D. 2 milliliters

2)




- Soda in a can
 A. 2 liters
 B. 2 milliliters
 C. 350 liters
 D. 350 milliliters

3)



- Water in an ice tray
 A. 2 milliliters
 B. 50 milliliters
 C. 2 liters
 D. 0.5 liters

4)



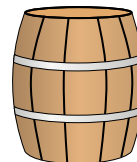
- Bathtub
 A. 3 liters
 B. 500 milliliters
 C. 170 liters
 D. 5 milliliters

5)



- Ink in a pen
 A. 0.25 milliliters
 B. 2 milliliters
 C. 400 milliliters
 D. 1 liter

6)




- Water a barrel holds
 A. 200 milliliters
 B. 200 liters
 C. 5 milliliters
 D. 3 liters

7)



- Measuring Cup
 A. 50 milliliters
 B. 237 milliliters
 C. 1 liter
 D. 237 liters

8)



- Shampoo in a bottle
 A. 1.5 liters
 B. 1 milliliter
 C. 20 liters
 D. 20 milliliters

9)



- Toothpaste in a tube
 A. 1 liter
 B. 2 liters
 C. 5 milliliters
 D. 120 milliliters

1. **D**
2. **D**
3. **D**
4. **C**
5. **A**
6. **B**
7. **B**
8. **A**
9. **D**