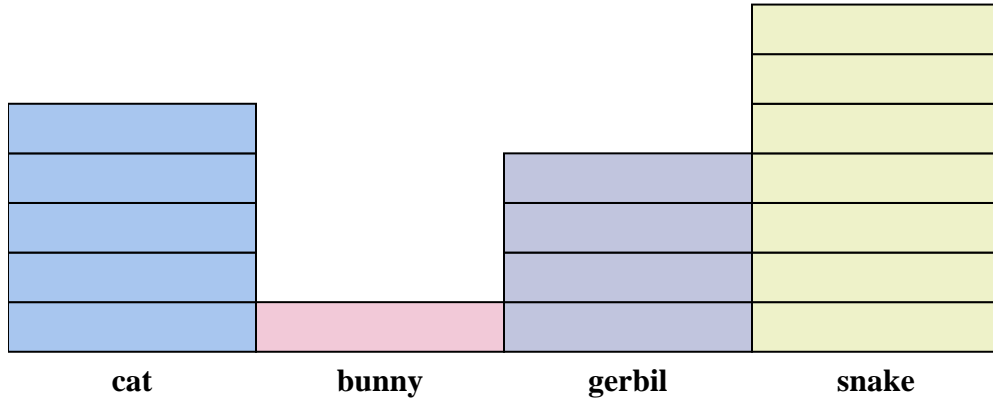




Solve each problem.



Each = 2 people owned

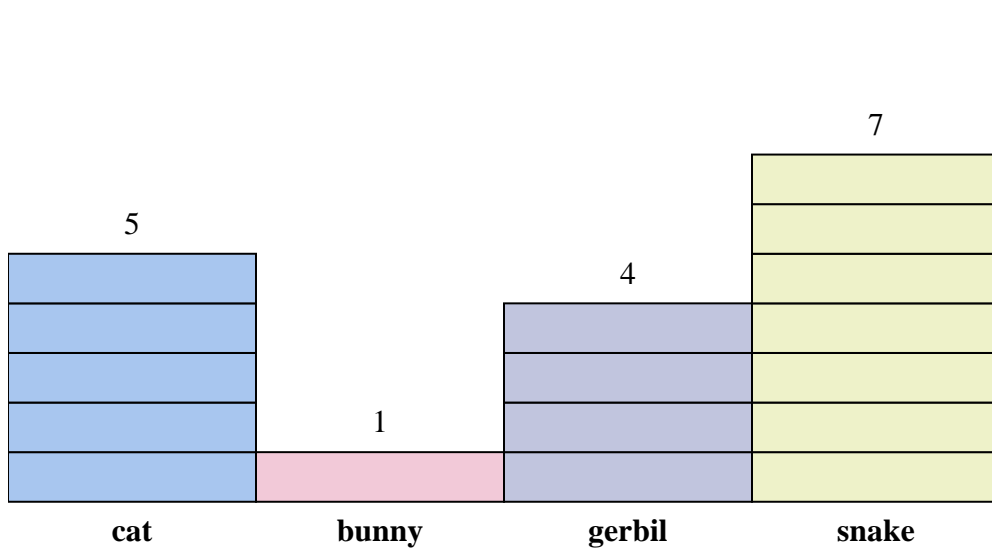
Answers

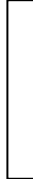
1. _____
2. _____
3. _____
4. _____
5. _____
6. _____
7. _____
8. _____
9. _____
10. _____

- 1) How many more people owned a snake than owned a cat?
- 2) Which pet did the largest number of people own?
- 3) Which pet did the fewest number of people own?
- 4) How many pets total did the people own?
- 5) Did fewer people own a snakes or a gerbils?
- 6) Did more people own a cats or a gerbils?
- 7) Which pet did exactly 2 people own?
- 8) How many people owned a cat?
- 9) What is the combined number of snakes and bunnies owned?
- 10) What is the difference in the number of people who owned a bunny and the number who owned a gerbil?



Solve each problem.



Each  = 2 people owned

Answers

1. 4
2. snake
3. bunny
4. 34
5. gerbil
6. cat
7. bunny
8. 10
9. 16
10. 6

- 1) How many more people owned a snake than owned a cat?
- 2) Which pet did the largest number of people own?
- 3) Which pet did the fewest number of people own?
- 4) How many pets total did the people own?
- 5) Did fewer people own a snakes or a gerbils?
- 6) Did more people own a cats or a gerbils?
- 7) Which pet did exactly 2 people own?
- 8) How many people owned a cat?
- 9) What is the combined number of snakes and bunnies owned?
- 10) What is the difference in the number of people who owned a bunny and the number who owned a gerbil?