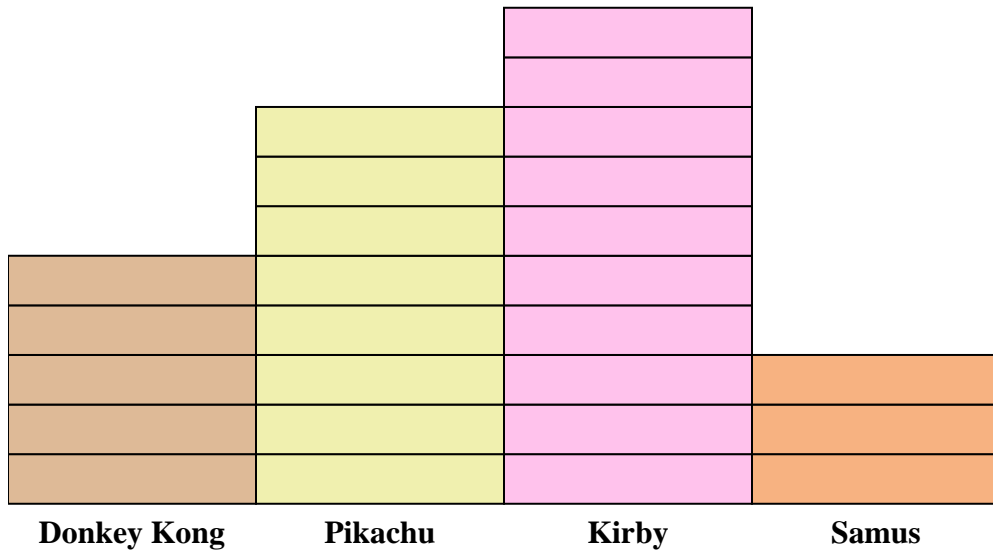




Solve each problem.



Each  = 2 votes


Answers

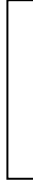
1. _____
2. _____
3. _____
4. _____
5. _____
6. _____
7. _____
8. _____
9. _____
10. _____

- 1) How many more people liked Kirby than liked Samus?
- 2) Which character did the largest number of people say was their favorite?
- 3) Which character did the fewest number of people say was their favorite?
- 4) How many people total answered the poll?
- 5) Did fewer people like Samus or Pikachu?
- 6) Did more people like Donkey Kong or Samus?
- 7) Which character did exactly 10 people say was their favorite?
- 8) How many people liked Samus the best?
- 9) What is the combined number of people who liked Donkey Kong and Kirby?
- 10) What is the difference in the number of people who liked Pikachu and the number who liked Donkey Kong?



Solve each problem.



Each  = 2 votes

Answers

1. 14
2. Kirby
3. Samus
4. 52
5. Samus
6. Donkey Kong
7. Donkey Kong
8. 6
9. 30
10. 6

- 1) How many more people liked Kirby than liked Samus?
- 2) Which character did the largest number of people say was their favorite?
- 3) Which character did the fewest number of people say was their favorite?
- 4) How many people total answered the poll?
- 5) Did fewer people like Samus or Pikachu?
- 6) Did more people like Donkey Kong or Samus?
- 7) Which character did exactly 10 people say was their favorite?
- 8) How many people liked Samus the best?
- 9) What is the combined number of people who liked Donkey Kong and Kirby?
- 10) What is the difference in the number of people who liked Pikachu and the number who liked Donkey Kong?