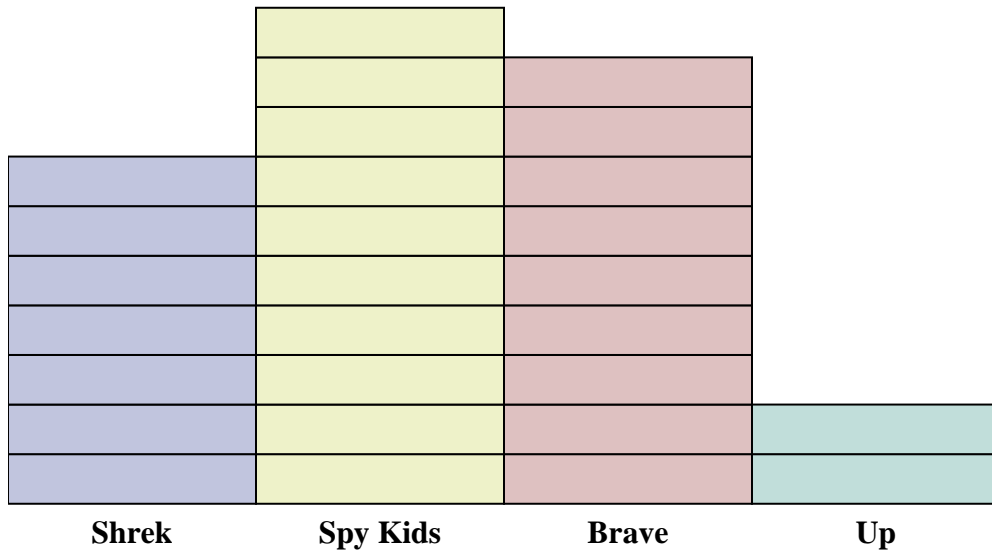




Solve each problem.



Each  = 2 votes

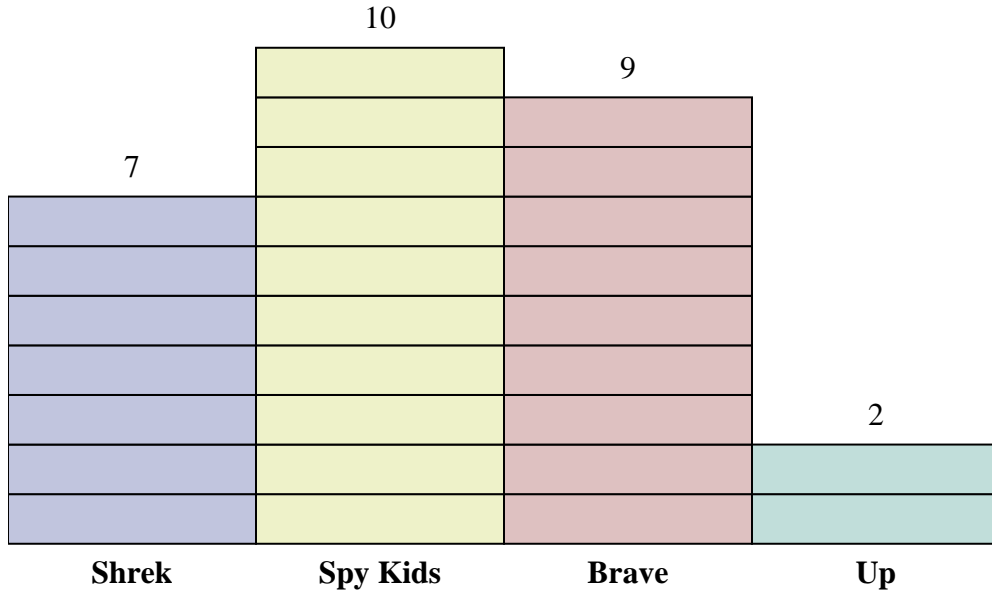
Answers

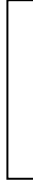
1. \_\_\_\_\_
2. \_\_\_\_\_
3. \_\_\_\_\_
4. \_\_\_\_\_
5. \_\_\_\_\_
6. \_\_\_\_\_
7. \_\_\_\_\_
8. \_\_\_\_\_
9. \_\_\_\_\_
10. \_\_\_\_\_

- 1) How many more votes did Brave receive than Shrek?
- 2) Which movie received the most votes?
- 3) Which movie received the fewest votes?
- 4) What is the total number of students who voted?
- 5) Did fewer students vote for Up or for Shrek?
- 6) Did more people vote for Brave or for Spy Kids?
- 7) Which movie received exactly 18 votes?
- 8) How many people voted for Spy Kids?
- 9) What is the combined number of people who voted for Spy Kids and Shrek?
- 10) What is the difference in the number of people who voted for Up and the number who voted for Brave?



Solve each problem.



Each  = 2 votes

Answers

- How many more votes did Brave receive than Shrek?
- Which movie received the most votes?
- Which movie received the fewest votes?
- What is the total number of students who voted?
- Did fewer students vote for Up or for Shrek?
- Did more people vote for Brave or for Spy Kids?
- Which movie received exactly 18 votes?
- How many people voted for Spy Kids?
- What is the combined number of people who voted for Spy Kids and Shrek?
- What is the difference in the number of people who voted for Up and the number who voted for Brave?

- 4**
- Spy Kids**
- Up**
- 56**
- Up**
- Spy Kids**
- Brave**
- 20**
- 34**
- 14**