

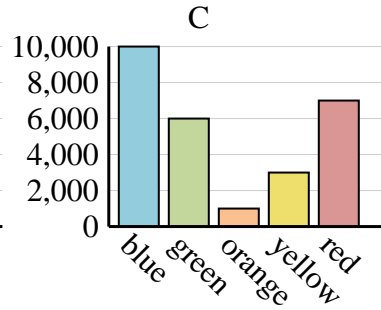
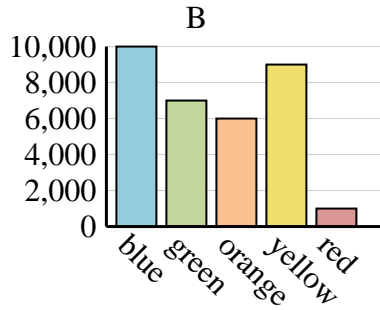
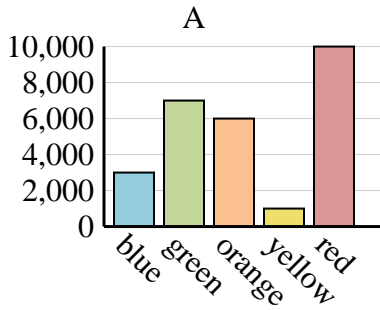


Determine which graph (A, B or C) best represents the information in the table.

Answers

1)

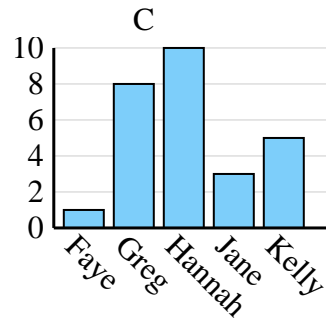
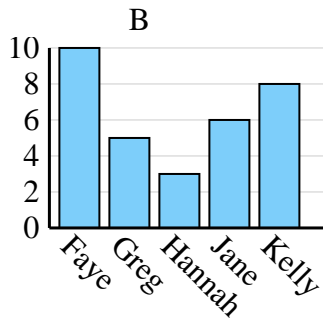
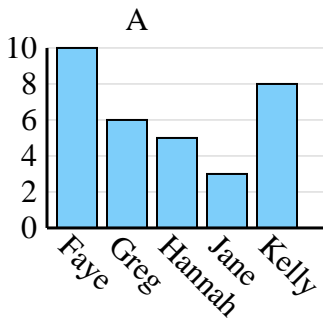
Favorite Color	blue	green	orange	yellow	red
People	10,000	6,000	1,000	3,000	7,000



1. \_\_\_\_\_
2. \_\_\_\_\_
3. \_\_\_\_\_
4. \_\_\_\_\_

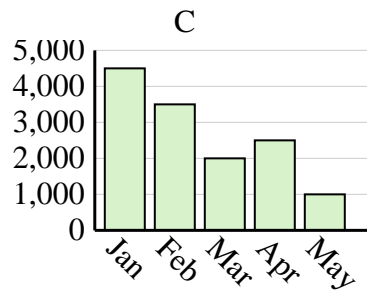
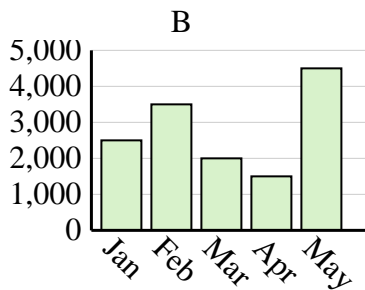
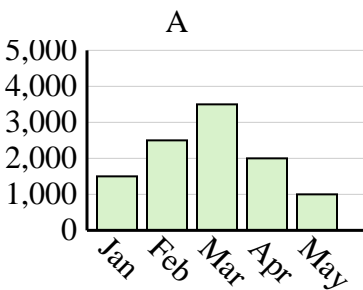
2)

Name	Faye	Greg	Hannah	Jane	Kelly
States Lived In	1	8	10	3	5



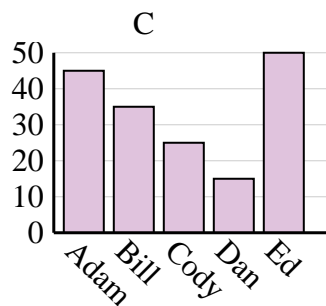
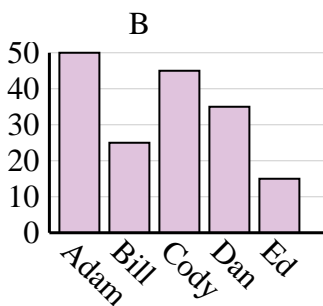
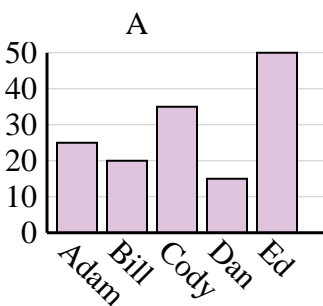
3)

Sales	Jan	Feb	Mar	Apr	May
Month	4,500	3,500	2,000	2,500	1,000



4)

Name	Adam	Bill	Cody	Dan	Ed
Points	45	35	25	15	50

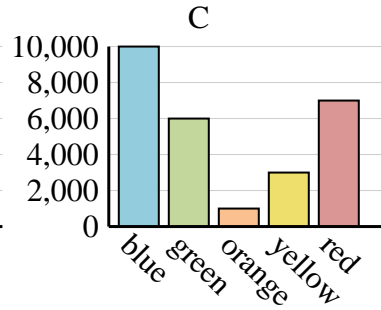
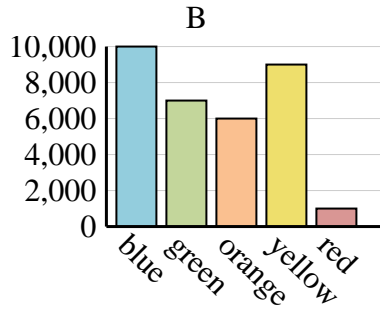
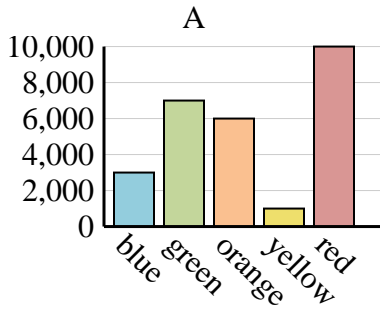




Determine which graph (A, B or C) best represents the information in the table.

Answers

<b>Favorite Color</b>	blue	green	orange	yellow	red
<b>People</b>	10,000	6,000	1,000	3,000	7,000



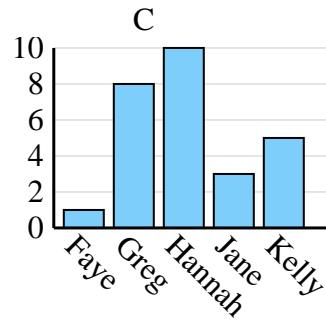
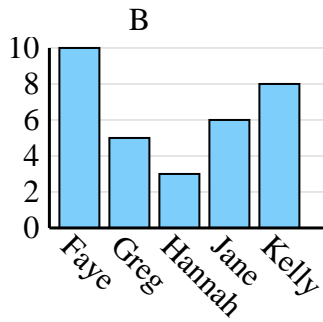
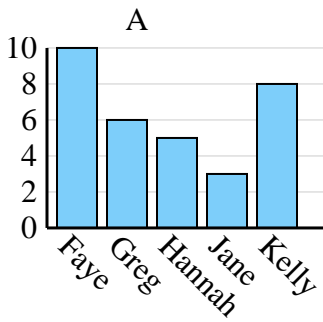
1. **C**

2. **C**

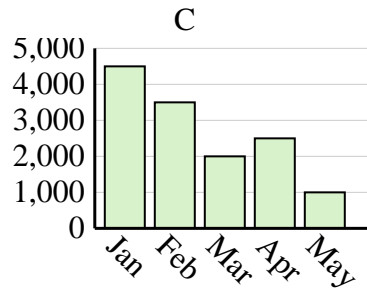
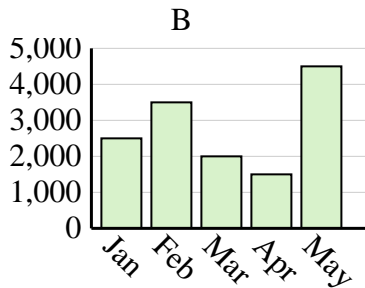
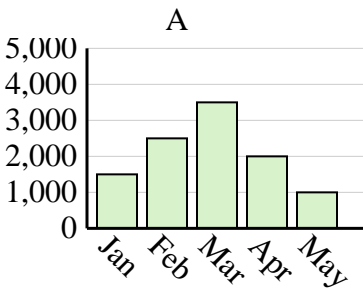
3. **C**

4. **C**

<b>Name</b>	Faye	Greg	Hannah	Jane	Kelly
<b>States Lived In</b>	1	8	10	3	5



<b>Sales</b>	Jan	Feb	Mar	Apr	May
<b>Month</b>	4,500	3,500	2,000	2,500	1,000



<b>Name</b>	Adam	Bill	Cody	Dan	Ed
<b>Points</b>	45	35	25	15	50

