

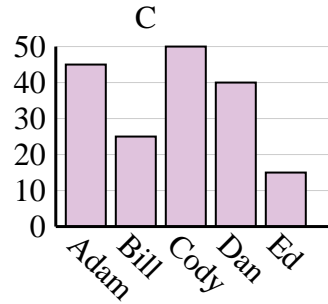
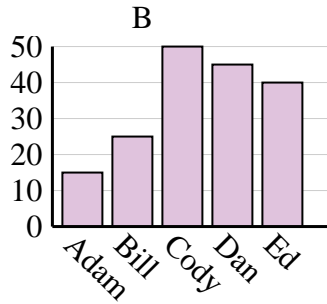
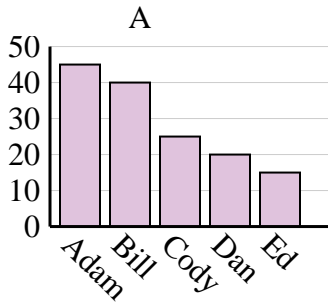


Determine which graph (A, B or C) best represents the information in the table.

Answers

1)

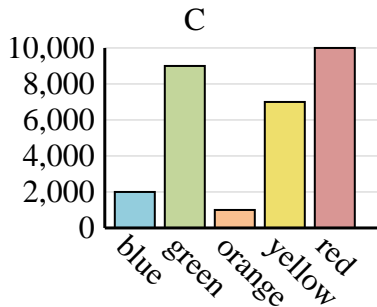
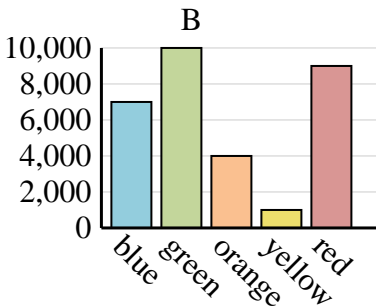
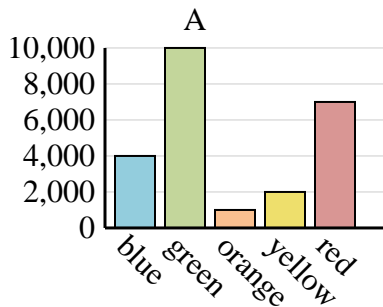
| Name | Adam | Bill | Cody | Dan | Ed |
|--------|------|------|------|-----|----|
| Points | 45 | 40 | 25 | 20 | 15 |



1. _____
2. _____
3. _____
4. _____

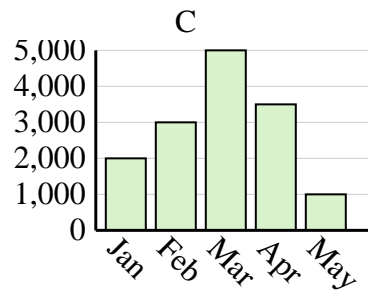
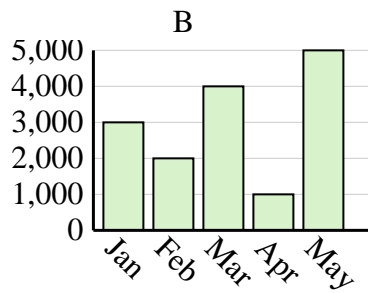
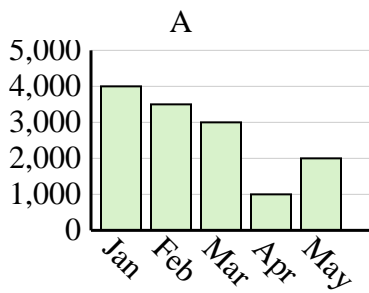
2)

| Favorite Color | blue | green | orange | yellow | red |
|----------------|-------|--------|--------|--------|-------|
| People | 4,000 | 10,000 | 1,000 | 2,000 | 7,000 |



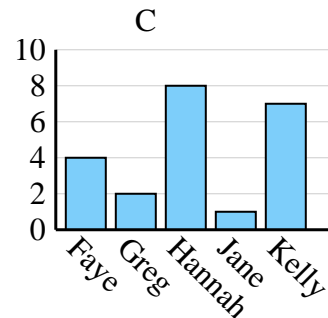
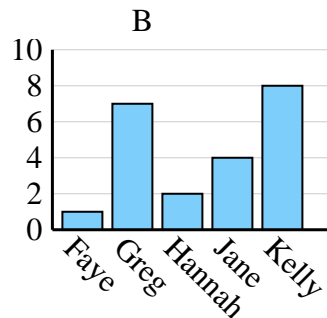
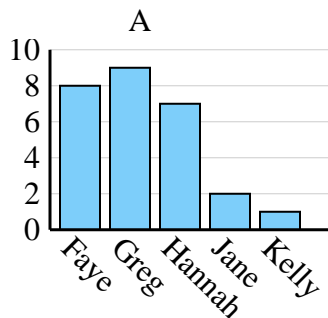
3)

| Sales | Jan | Feb | Mar | Apr | May |
|-------|-------|-------|-------|-------|-------|
| Month | 3,000 | 2,000 | 4,000 | 1,000 | 5,000 |



4)

| Name | Faye | Greg | Hannah | Jane | Kelly |
|-----------------|------|------|--------|------|-------|
| States Lived In | 4 | 2 | 8 | 1 | 7 |

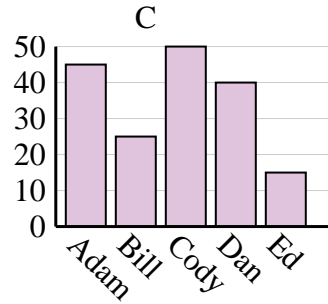
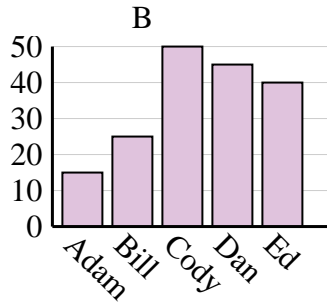
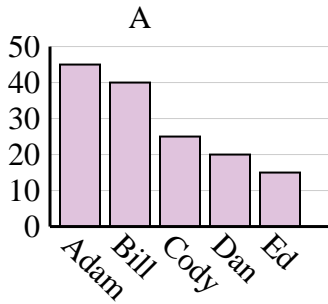




Determine which graph (A, B or C) best represents the information in the table.

Answers

| | | | | | |
|---------------|------|------|------|-----|----|
| Name | Adam | Bill | Cody | Dan | Ed |
| Points | 45 | 40 | 25 | 20 | 15 |



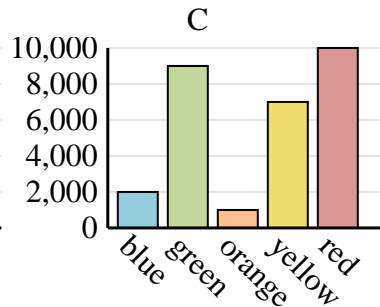
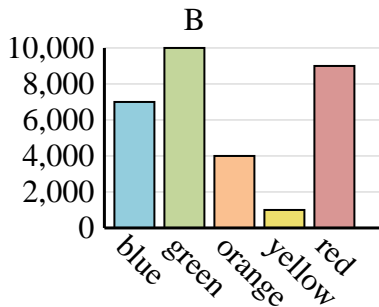
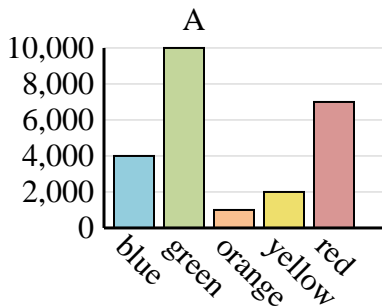
1. **A**

2. **A**

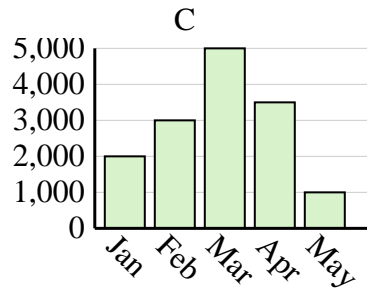
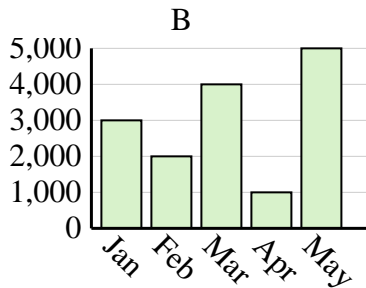
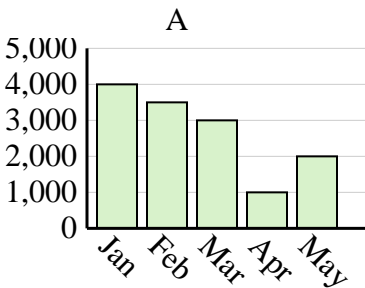
3. **B**

4. **C**

| | | | | | |
|-----------------------|-------|--------|--------|--------|-------|
| Favorite Color | blue | green | orange | yellow | red |
| People | 4,000 | 10,000 | 1,000 | 2,000 | 7,000 |



| | | | | | |
|--------------|-------|-------|-------|-------|-------|
| Sales | Jan | Feb | Mar | Apr | May |
| Month | 3,000 | 2,000 | 4,000 | 1,000 | 5,000 |



| | | | | | |
|------------------------|------|------|--------|------|-------|
| Name | Faye | Greg | Hannah | Jane | Kelly |
| States Lived In | 4 | 2 | 8 | 1 | 7 |

