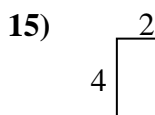
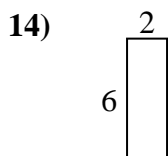
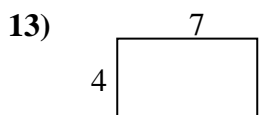
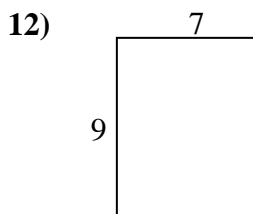
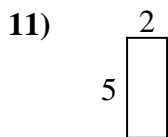
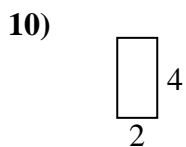
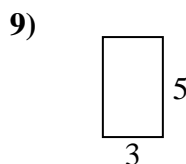

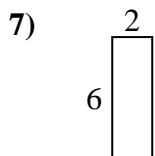
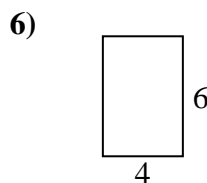
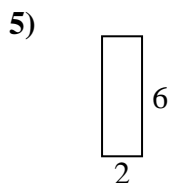
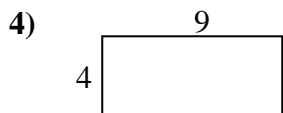
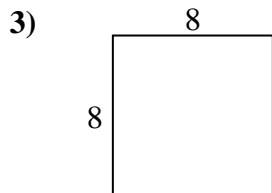
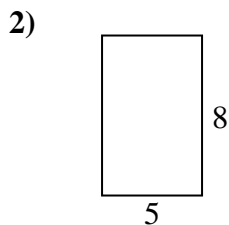




Find the perimeter and area of each figure. Each figure is in centimeters (cm). Not to scale.

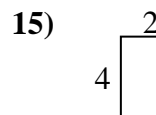
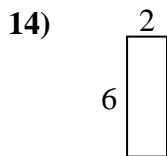
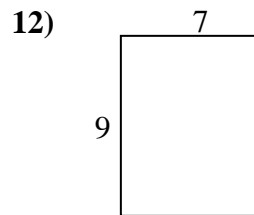
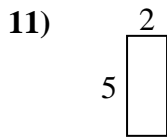
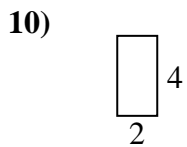
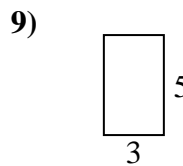

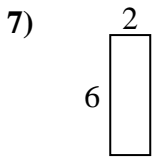
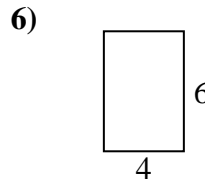
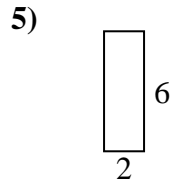
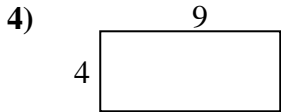
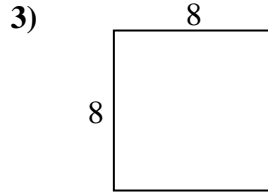
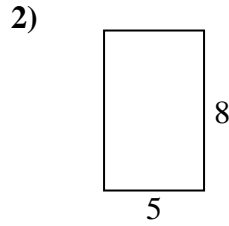
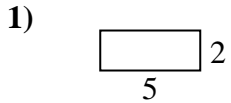


Answers

1. \_\_\_\_\_
2. \_\_\_\_\_
3. \_\_\_\_\_
4. \_\_\_\_\_
5. \_\_\_\_\_
6. \_\_\_\_\_
7. \_\_\_\_\_
8. \_\_\_\_\_
9. \_\_\_\_\_
10. \_\_\_\_\_
11. \_\_\_\_\_
12. \_\_\_\_\_
13. \_\_\_\_\_
14. \_\_\_\_\_
15. \_\_\_\_\_



Find the perimeter and area of each figure. Each figure is in centimeters (cm). Not to scale.



Answers

|     |           |           |
|-----|-----------|-----------|
| 1.  | <u>14</u> | <u>10</u> |
| 2.  | <u>26</u> | <u>40</u> |
| 3.  | <u>32</u> | <u>64</u> |
| 4.  | <u>26</u> | <u>36</u> |
| 5.  | <u>16</u> | <u>12</u> |
| 6.  | <u>20</u> | <u>24</u> |
| 7.  | <u>16</u> | <u>12</u> |
| 8.  | <u>24</u> | <u>20</u> |
| 9.  | <u>16</u> | <u>15</u> |
| 10. | <u>12</u> | <u>8</u>  |
| 11. | <u>14</u> | <u>10</u> |
| 12. | <u>32</u> | <u>63</u> |
| 13. | <u>22</u> | <u>28</u> |
| 14. | <u>16</u> | <u>12</u> |
| 15. | <u>12</u> | <u>8</u>  |