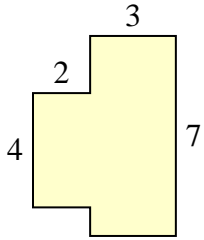




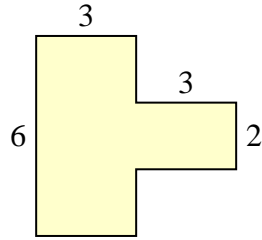
Find the total area of each shape. Measurement is in millimeters (mm). Not to scale.

Answers

1)



2)



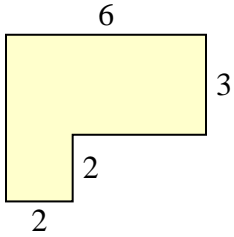
1. \_\_\_\_\_

2. \_\_\_\_\_

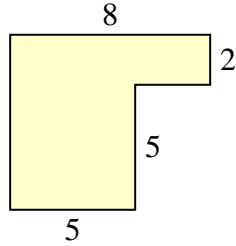
3. \_\_\_\_\_

4. \_\_\_\_\_

3)



4)



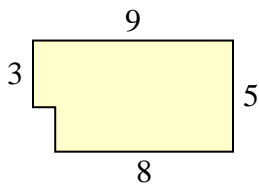
5. \_\_\_\_\_

6. \_\_\_\_\_

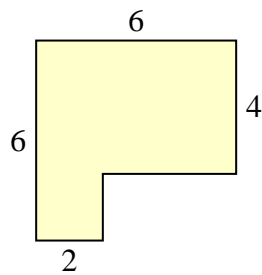
7. \_\_\_\_\_

8. \_\_\_\_\_

5)



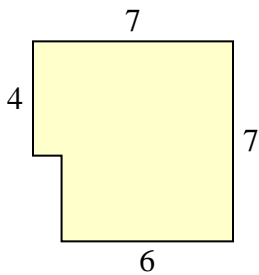
6)



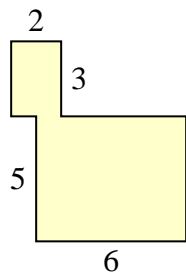
9. \_\_\_\_\_

10. \_\_\_\_\_

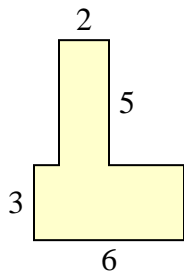
7)



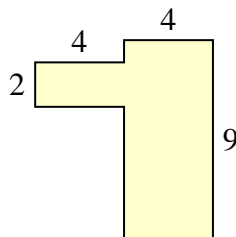
8)



9)

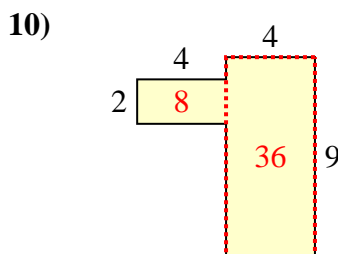
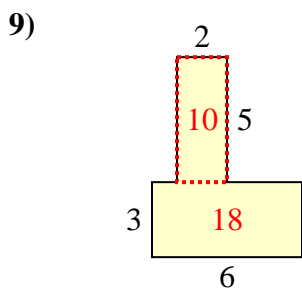
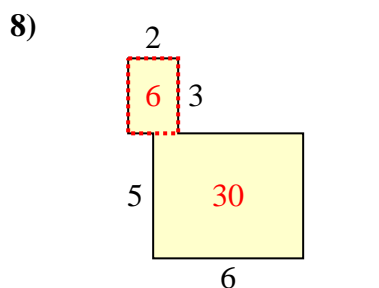
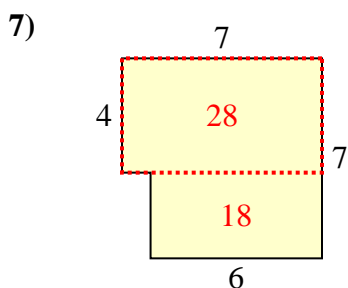
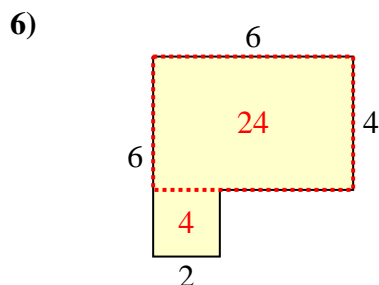
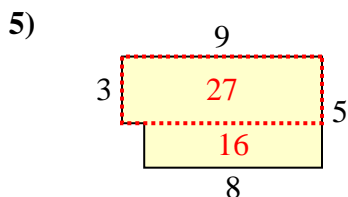
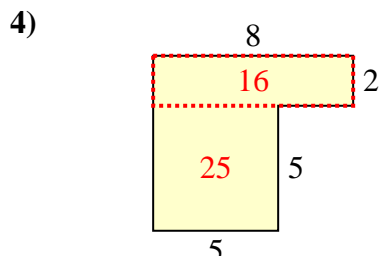
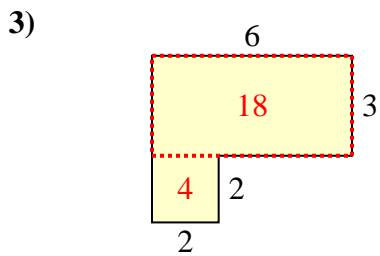
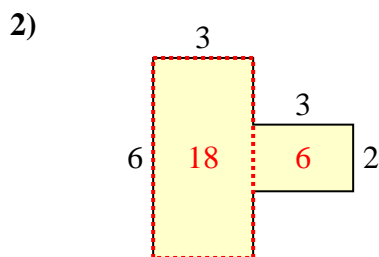
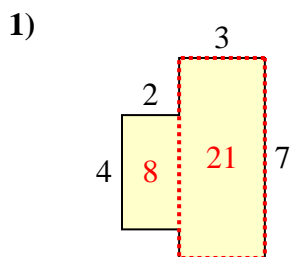


10)





Find the total area of each shape. Measurement is in millimeters (mm). Not to scale.



Answers

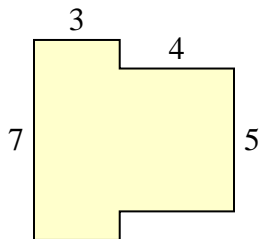
1. 29 mm<sup>2</sup>
2. 24 mm<sup>2</sup>
3. 22 mm<sup>2</sup>
4. 41 mm<sup>2</sup>
5. 43 mm<sup>2</sup>
6. 28 mm<sup>2</sup>
7. 46 mm<sup>2</sup>
8. 36 mm<sup>2</sup>
9. 28 mm<sup>2</sup>
10. 44 mm<sup>2</sup>



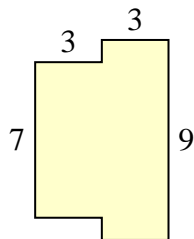
Find the total area of each shape. Measurement is in millimeters (mm). Not to scale.

Answers

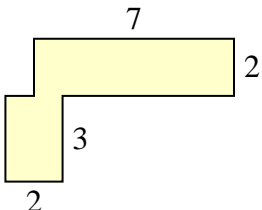
1)



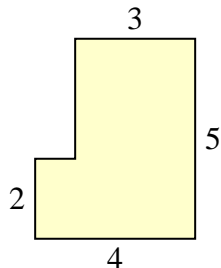
2)



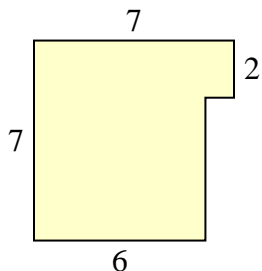
3)



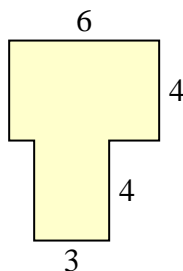
4)



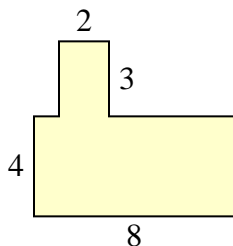
5)



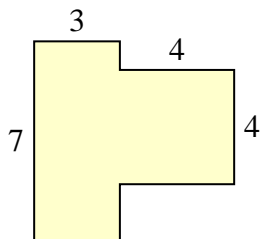
6)



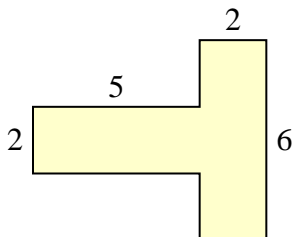
7)



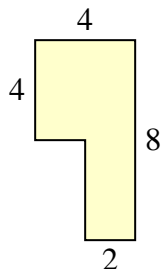
8)



9)



10)

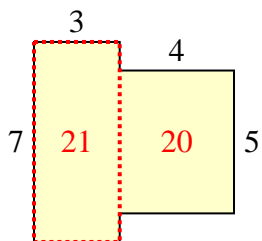


- 1. \_\_\_\_\_
- 2. \_\_\_\_\_
- 3. \_\_\_\_\_
- 4. \_\_\_\_\_
- 5. \_\_\_\_\_
- 6. \_\_\_\_\_
- 7. \_\_\_\_\_
- 8. \_\_\_\_\_
- 9. \_\_\_\_\_
- 10. \_\_\_\_\_

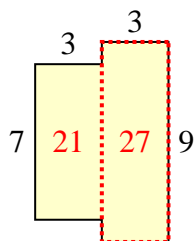


Find the total area of each shape. Measurement is in millimeters (mm). Not to scale.

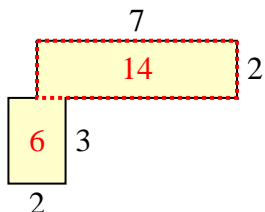
1)



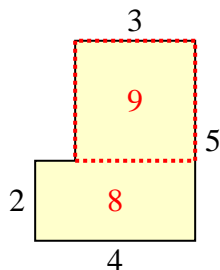
2)



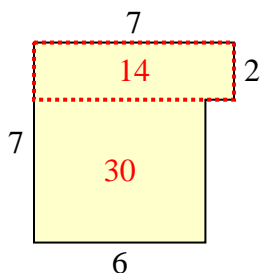
3)



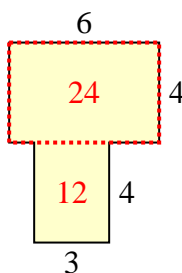
4)



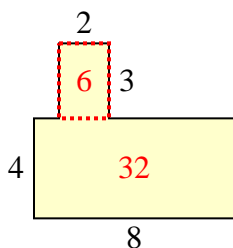
5)



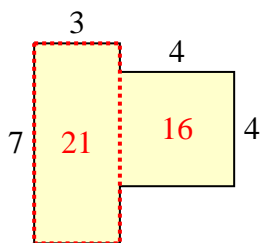
6)



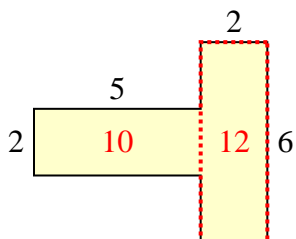
7)



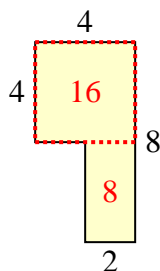
8)



9)



10)



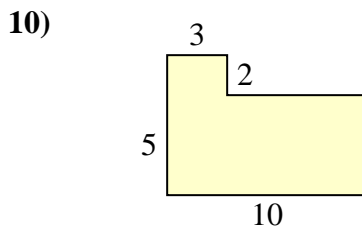
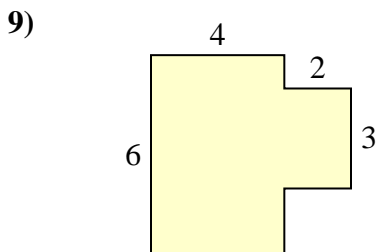
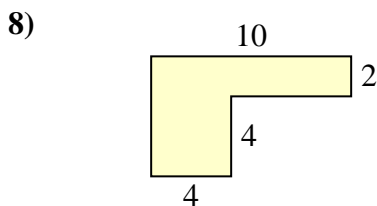
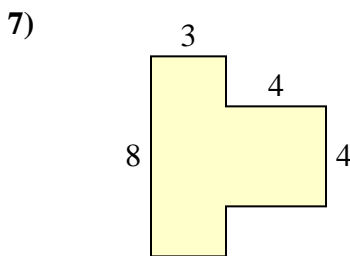
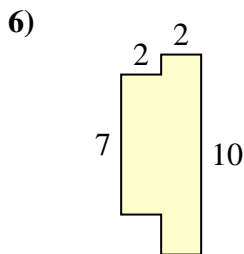
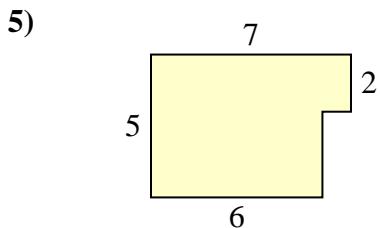
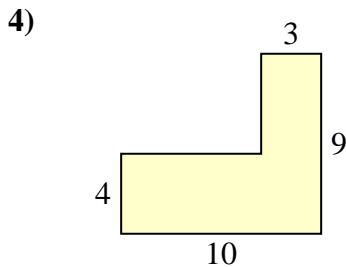
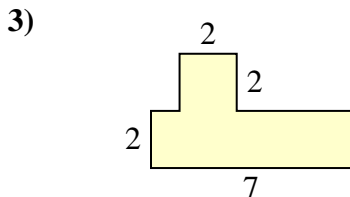
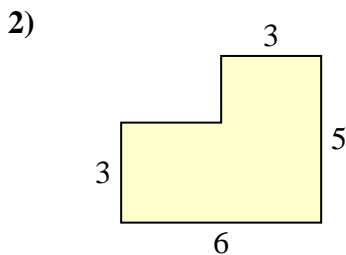
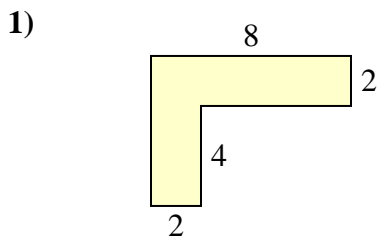
**Answers**

1. 41 mm<sup>2</sup>
2. 48 mm<sup>2</sup>
3. 20 mm<sup>2</sup>
4. 17 mm<sup>2</sup>
5. 44 mm<sup>2</sup>
6. 36 mm<sup>2</sup>
7. 38 mm<sup>2</sup>
8. 37 mm<sup>2</sup>
9. 22 mm<sup>2</sup>
10. 24 mm<sup>2</sup>



Find the total area of each shape. Measurement is in millimeters (mm). Not to scale.

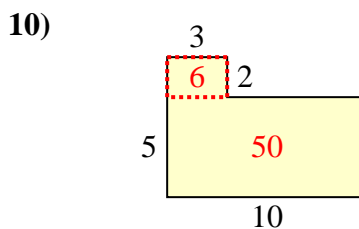
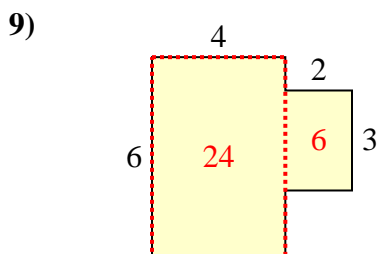
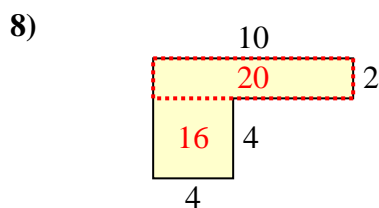
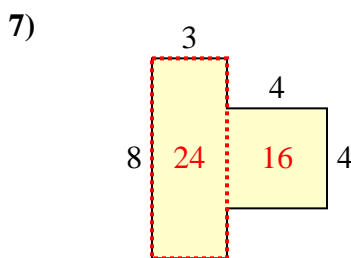
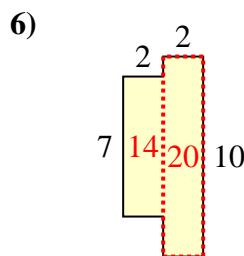
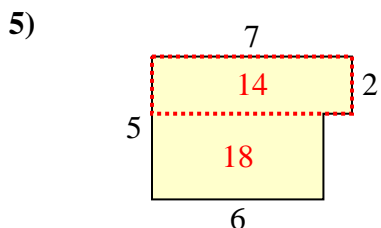
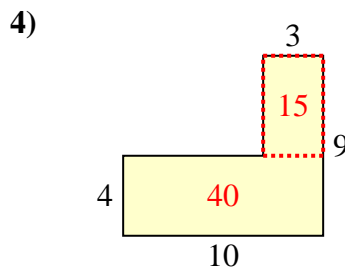
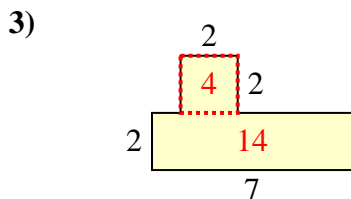
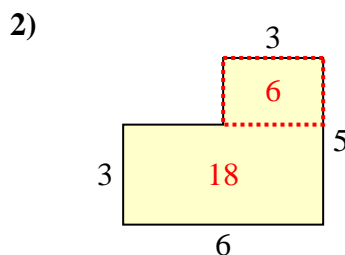
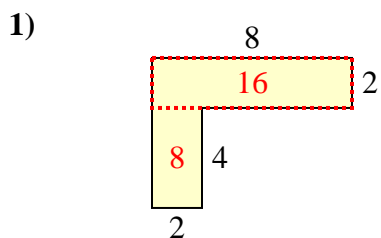
Answers



- 1. \_\_\_\_\_
- 2. \_\_\_\_\_
- 3. \_\_\_\_\_
- 4. \_\_\_\_\_
- 5. \_\_\_\_\_
- 6. \_\_\_\_\_
- 7. \_\_\_\_\_
- 8. \_\_\_\_\_
- 9. \_\_\_\_\_
- 10. \_\_\_\_\_



Find the total area of each shape. Measurement is in millimeters (mm). Not to scale.



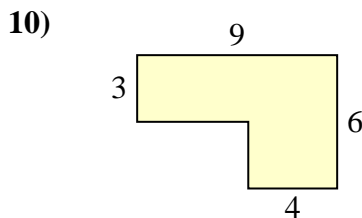
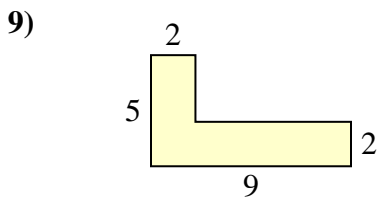
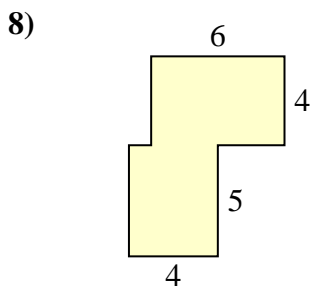
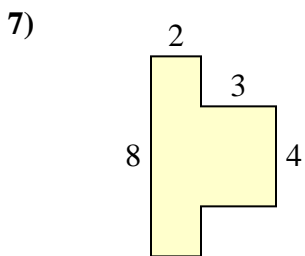
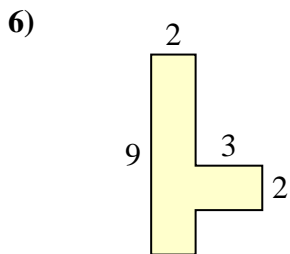
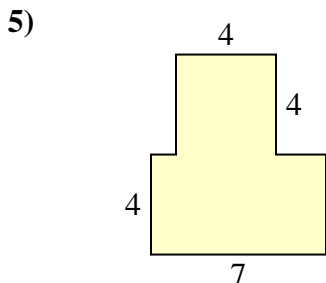
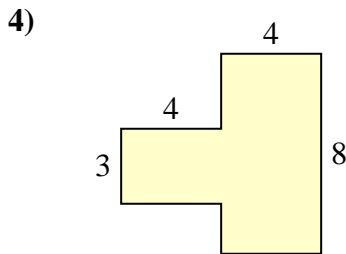
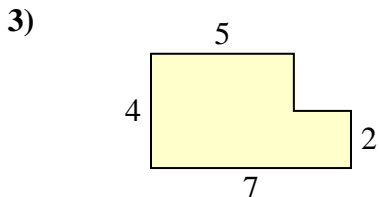
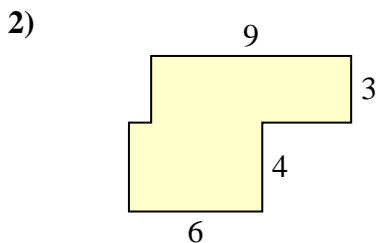
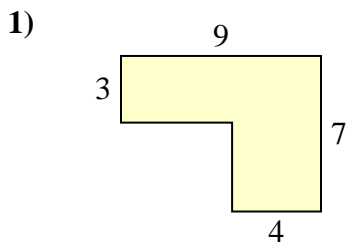
Answers

1. 24 mm<sup>2</sup>
2. 24 mm<sup>2</sup>
3. 18 mm<sup>2</sup>
4. 55 mm<sup>2</sup>
5. 32 mm<sup>2</sup>
6. 34 mm<sup>2</sup>
7. 40 mm<sup>2</sup>
8. 36 mm<sup>2</sup>
9. 30 mm<sup>2</sup>
10. 56 mm<sup>2</sup>



Find the total area of each shape. Measurement is in millimeters (mm). Not to scale.

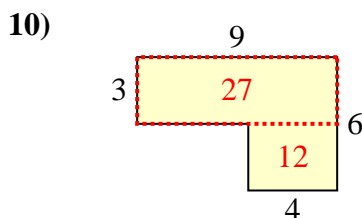
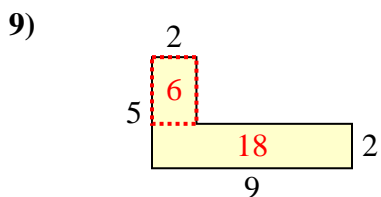
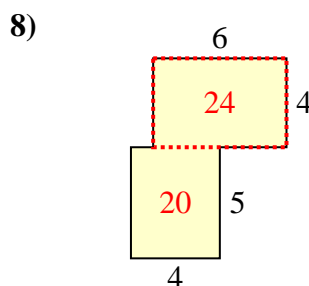
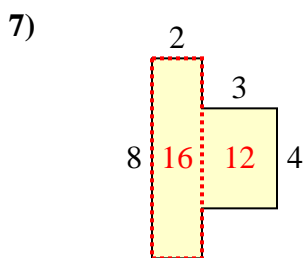
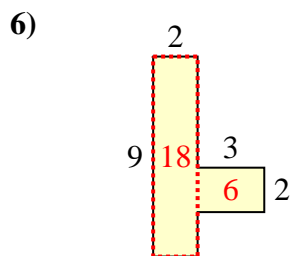
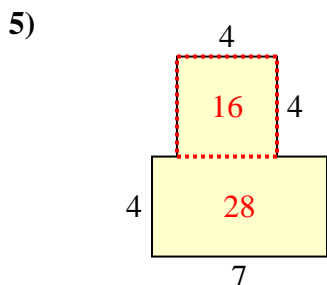
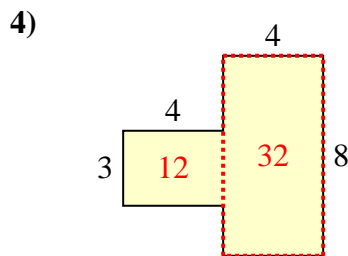
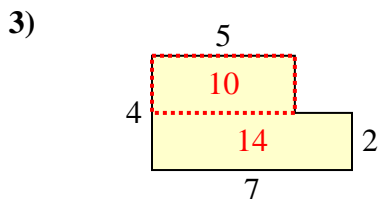
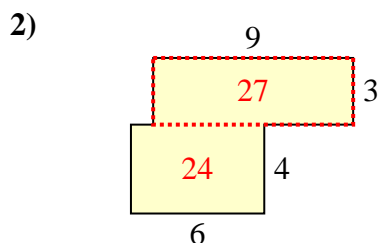
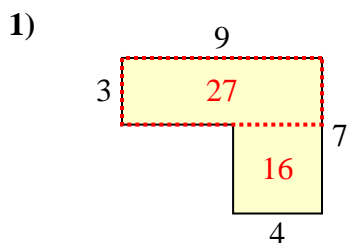
Answers



1. \_\_\_\_\_
2. \_\_\_\_\_
3. \_\_\_\_\_
4. \_\_\_\_\_
5. \_\_\_\_\_
6. \_\_\_\_\_
7. \_\_\_\_\_
8. \_\_\_\_\_
9. \_\_\_\_\_
10. \_\_\_\_\_



Find the total area of each shape. Measurement is in millimeters (mm). Not to scale.



Answers

1. 43 mm<sup>2</sup>
2. 51 mm<sup>2</sup>
3. 24 mm<sup>2</sup>
4. 44 mm<sup>2</sup>
5. 44 mm<sup>2</sup>
6. 24 mm<sup>2</sup>
7. 28 mm<sup>2</sup>
8. 44 mm<sup>2</sup>
9. 24 mm<sup>2</sup>
10. 39 mm<sup>2</sup>

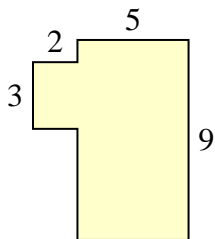




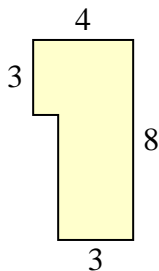
Find the total area of each shape. Measurement is in millimeters (mm). Not to scale.

Answers

1)



2)



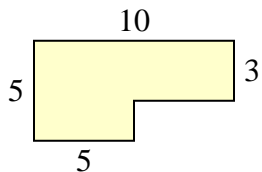
1. \_\_\_\_\_

2. \_\_\_\_\_

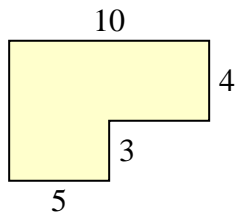
3. \_\_\_\_\_

4. \_\_\_\_\_

3)



4)



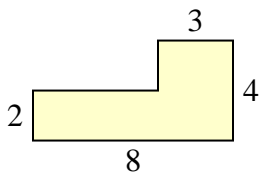
5. \_\_\_\_\_

6. \_\_\_\_\_

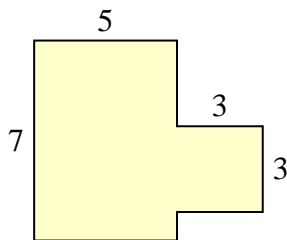
7. \_\_\_\_\_

8. \_\_\_\_\_

5)



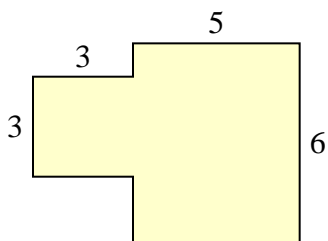
6)



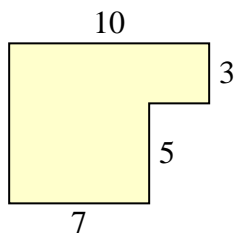
9. \_\_\_\_\_

10. \_\_\_\_\_

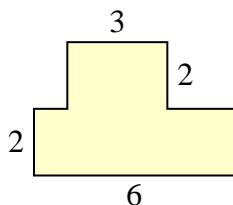
7)



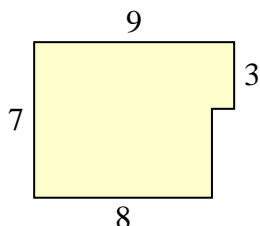
8)



9)

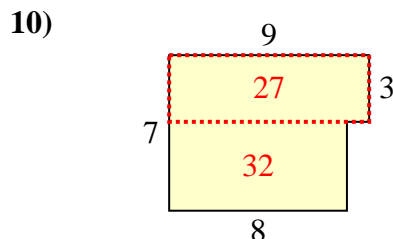
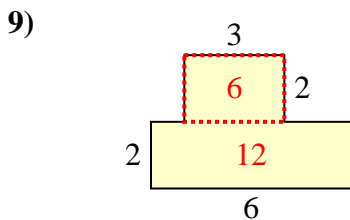
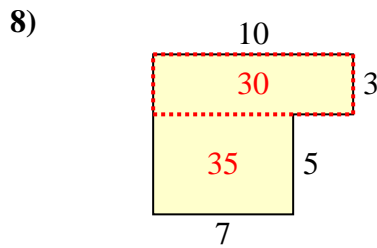
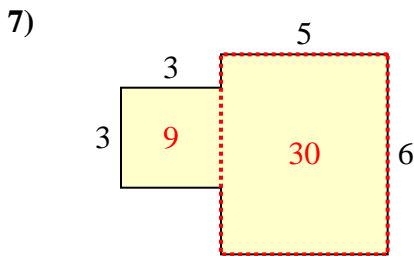
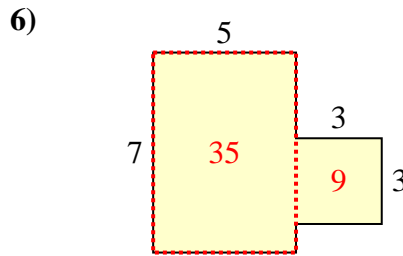
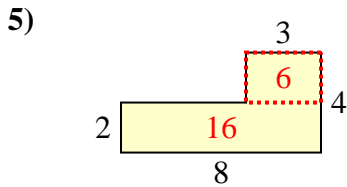
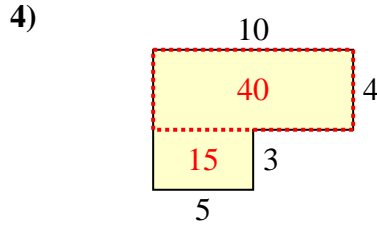
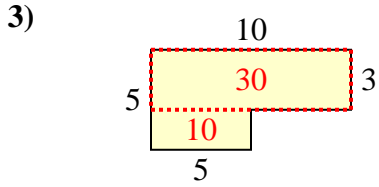
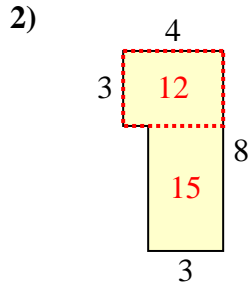
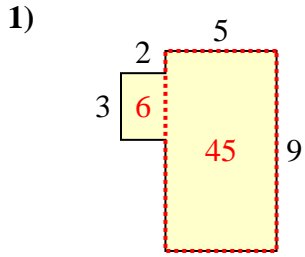


10)





Find the total area of each shape. Measurement is in millimeters (mm). Not to scale.



**Answers**

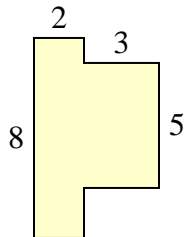
1. 51 mm<sup>2</sup>
2. 27 mm<sup>2</sup>
3. 40 mm<sup>2</sup>
4. 55 mm<sup>2</sup>
5. 22 mm<sup>2</sup>
6. 44 mm<sup>2</sup>
7. 39 mm<sup>2</sup>
8. 65 mm<sup>2</sup>
9. 18 mm<sup>2</sup>
10. 59 mm<sup>2</sup>



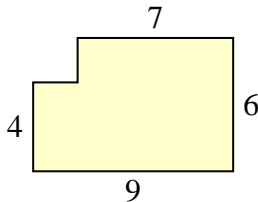
Find the total area of each shape. Measurement is in millimeters (mm). Not to scale.

Answers

1)



2)



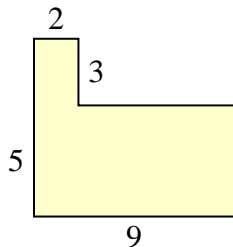
1. \_\_\_\_\_

2. \_\_\_\_\_

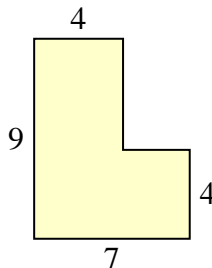
3. \_\_\_\_\_

4. \_\_\_\_\_

3)



4)



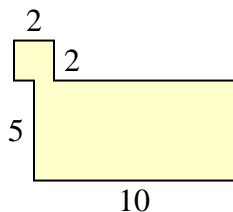
5. \_\_\_\_\_

6. \_\_\_\_\_

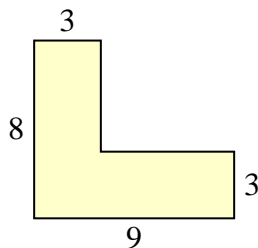
7. \_\_\_\_\_

8. \_\_\_\_\_

5)



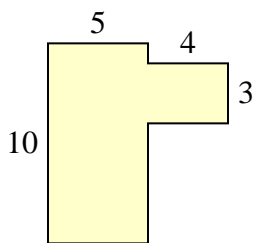
6)



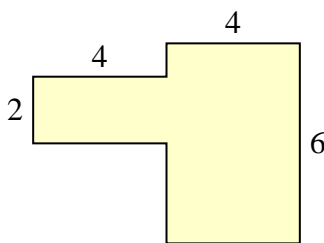
9. \_\_\_\_\_

10. \_\_\_\_\_

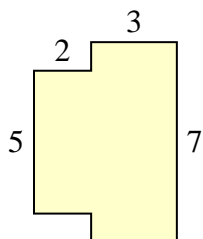
7)



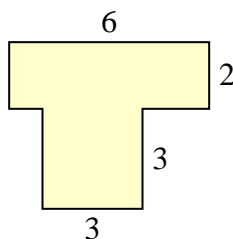
8)



9)

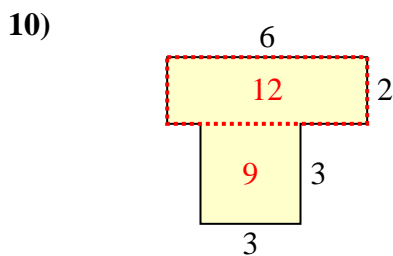
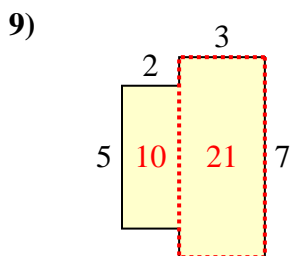
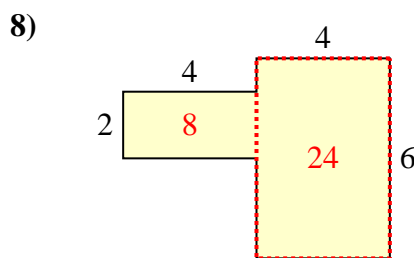
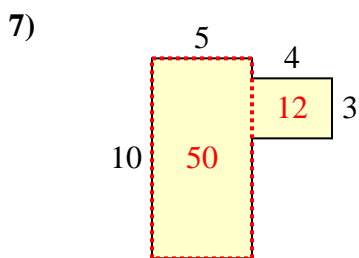
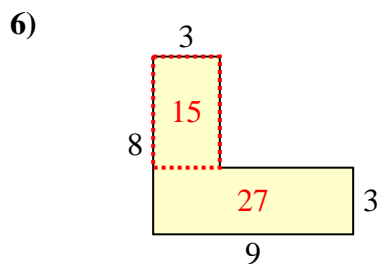
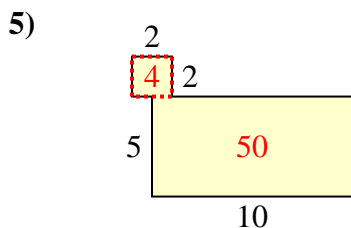
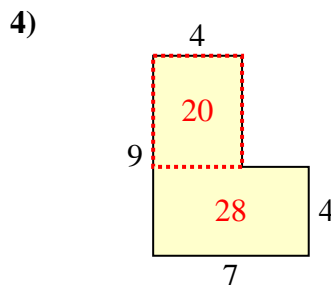
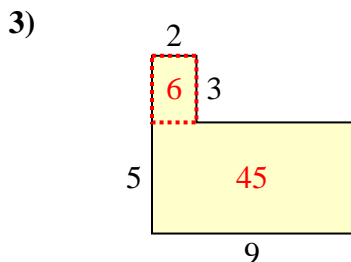
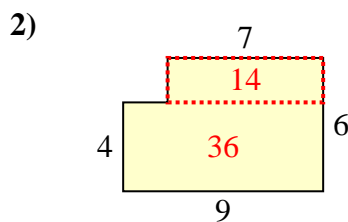
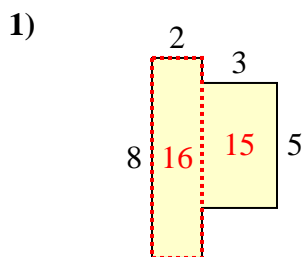


10)





Find the total area of each shape. Measurement is in millimeters (mm). Not to scale.



Answers

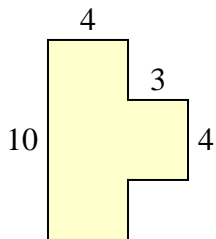
1. 31 mm<sup>2</sup>
2. 50 mm<sup>2</sup>
3. 51 mm<sup>2</sup>
4. 48 mm<sup>2</sup>
5. 54 mm<sup>2</sup>
6. 42 mm<sup>2</sup>
7. 62 mm<sup>2</sup>
8. 32 mm<sup>2</sup>
9. 31 mm<sup>2</sup>
10. 21 mm<sup>2</sup>



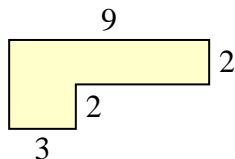
Find the total area of each shape. Measurement is in millimeters (mm). Not to scale.

Answers

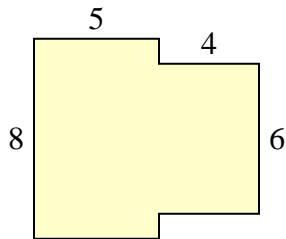
1)



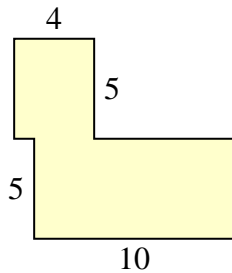
2)



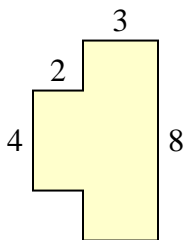
3)



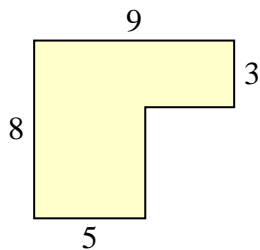
4)



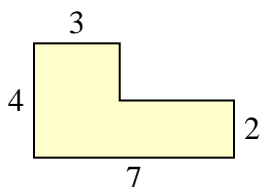
5)



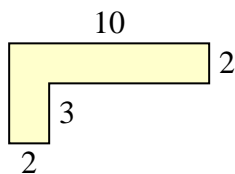
6)



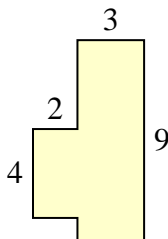
7)



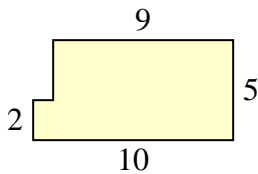
8)



9)



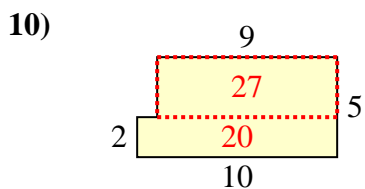
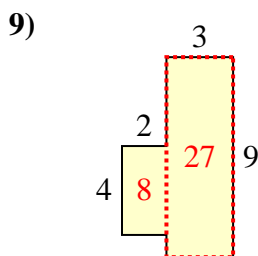
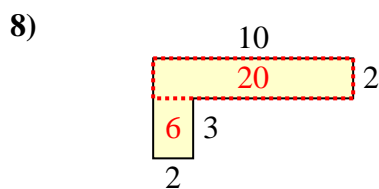
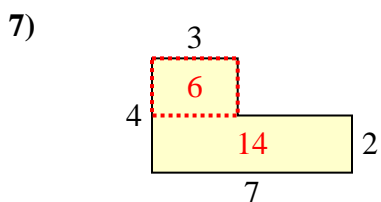
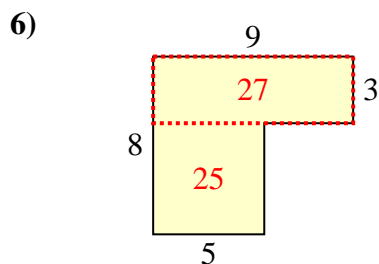
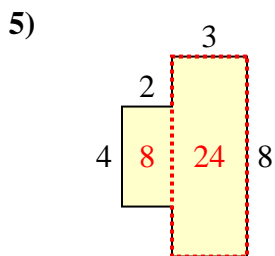
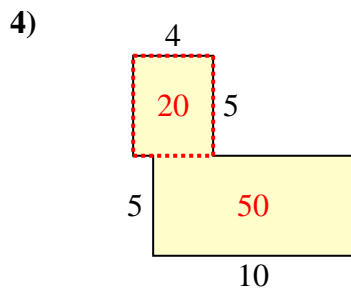
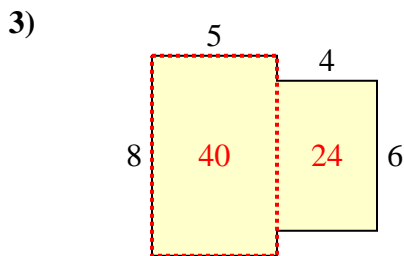
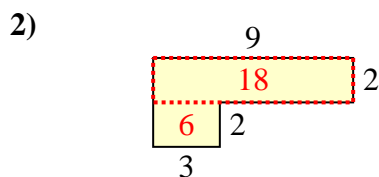
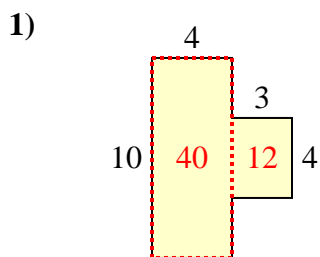
10)



- 1. \_\_\_\_\_
- 2. \_\_\_\_\_
- 3. \_\_\_\_\_
- 4. \_\_\_\_\_
- 5. \_\_\_\_\_
- 6. \_\_\_\_\_
- 7. \_\_\_\_\_
- 8. \_\_\_\_\_
- 9. \_\_\_\_\_
- 10. \_\_\_\_\_



Find the total area of each shape. Measurement is in millimeters (mm). Not to scale.



Answers

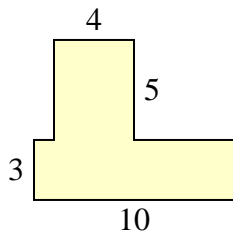
1. 52 mm<sup>2</sup>
2. 24 mm<sup>2</sup>
3. 64 mm<sup>2</sup>
4. 70 mm<sup>2</sup>
5. 32 mm<sup>2</sup>
6. 52 mm<sup>2</sup>
7. 20 mm<sup>2</sup>
8. 26 mm<sup>2</sup>
9. 35 mm<sup>2</sup>
10. 47 mm<sup>2</sup>



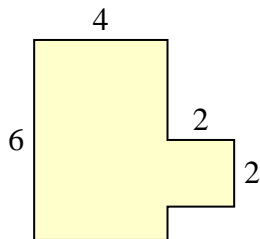
Find the total area of each shape. Measurement is in millimeters (mm). Not to scale.

Answers

1)



2)



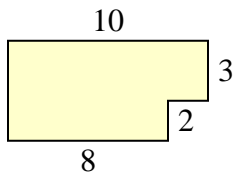
1. \_\_\_\_\_

2. \_\_\_\_\_

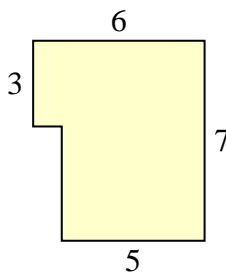
3. \_\_\_\_\_

4. \_\_\_\_\_

3)



4)



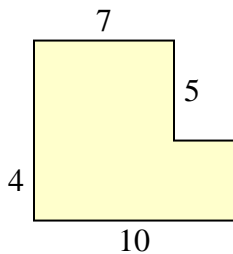
5. \_\_\_\_\_

6. \_\_\_\_\_

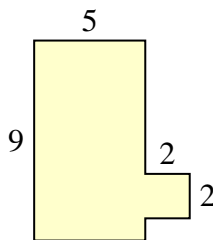
7. \_\_\_\_\_

8. \_\_\_\_\_

5)



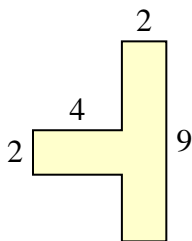
6)



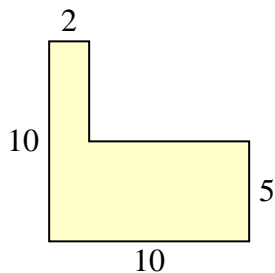
9. \_\_\_\_\_

10. \_\_\_\_\_

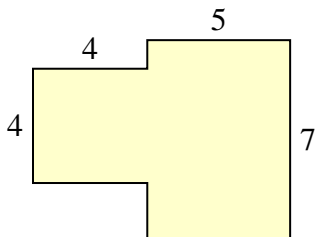
7)



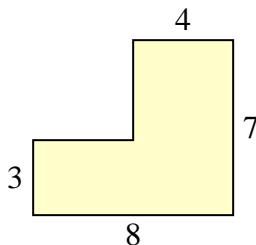
8)



9)

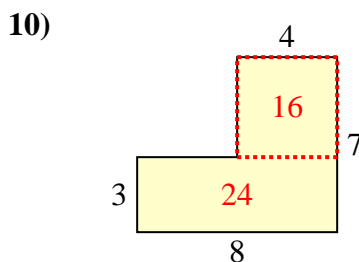
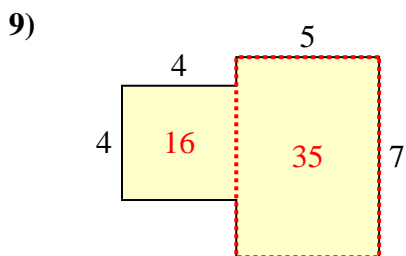
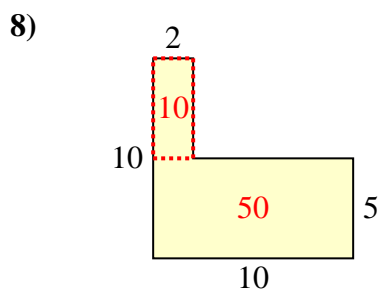
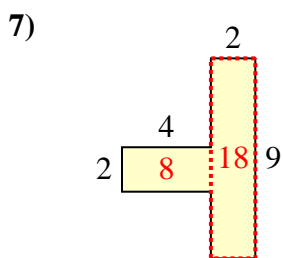
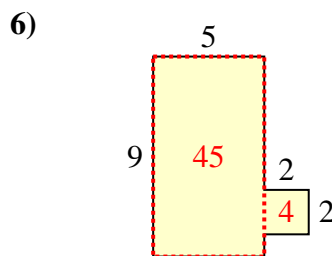
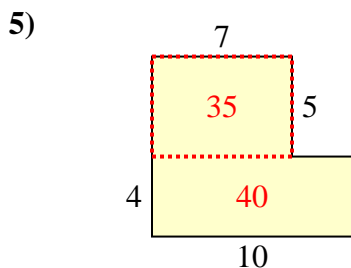
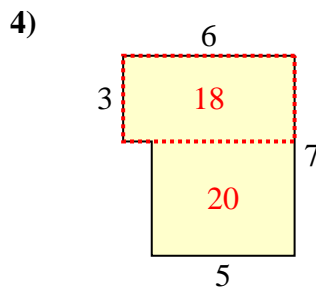
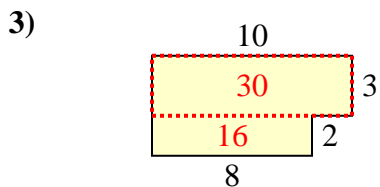
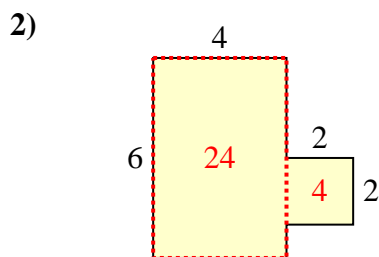
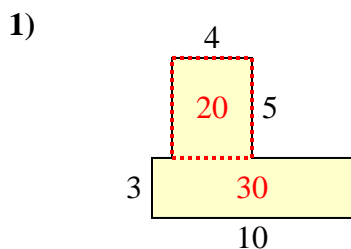


10)





Find the total area of each shape. Measurement is in millimeters (mm). Not to scale.



**Answers**

1. 50 mm<sup>2</sup>
2. 28 mm<sup>2</sup>
3. 46 mm<sup>2</sup>
4. 38 mm<sup>2</sup>
5. 75 mm<sup>2</sup>
6. 49 mm<sup>2</sup>
7. 26 mm<sup>2</sup>
8. 60 mm<sup>2</sup>
9. 51 mm<sup>2</sup>
10. 40 mm<sup>2</sup>

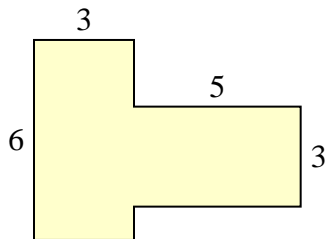




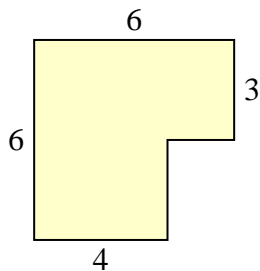
Find the total area of each shape. Measurement is in millimeters (mm). Not to scale.

Answers

1)



2)



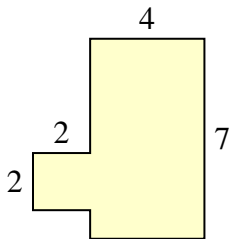
1. \_\_\_\_\_

2. \_\_\_\_\_

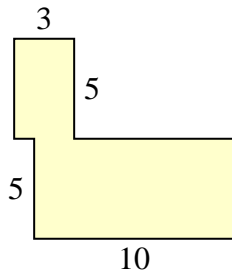
3. \_\_\_\_\_

4. \_\_\_\_\_

3)



4)



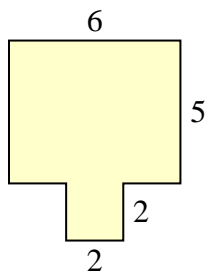
5. \_\_\_\_\_

6. \_\_\_\_\_

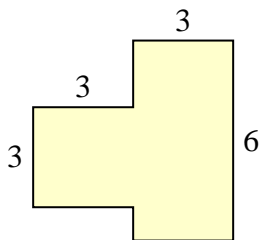
7. \_\_\_\_\_

8. \_\_\_\_\_

5)



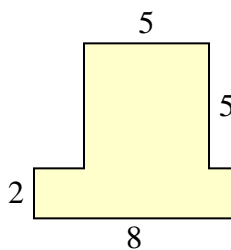
6)



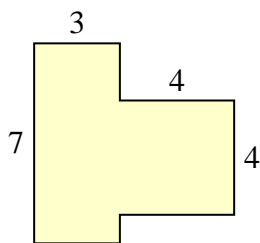
9. \_\_\_\_\_

10. \_\_\_\_\_

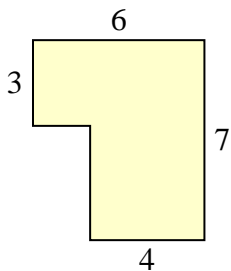
7)



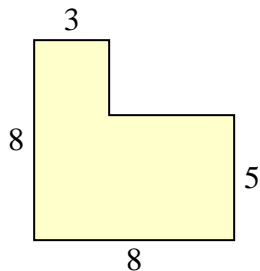
8)



9)



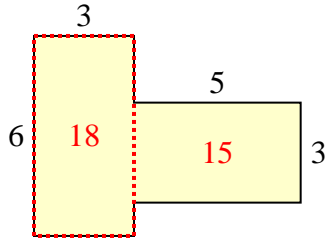
10)



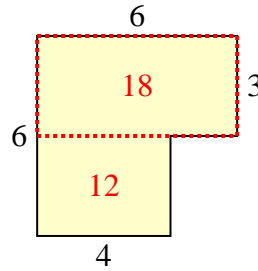


Find the total area of each shape. Measurement is in millimeters (mm). Not to scale.

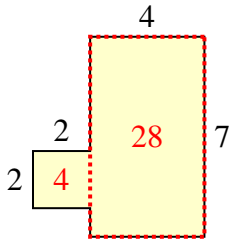
1)



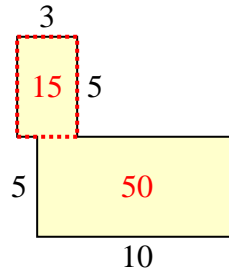
2)



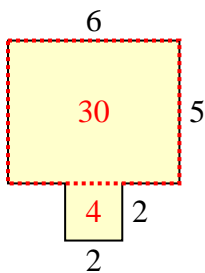
3)



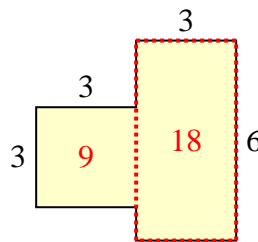
4)



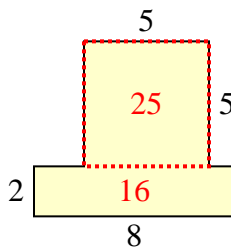
5)



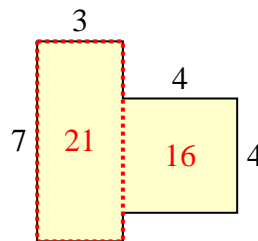
6)



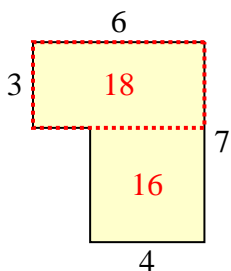
7)



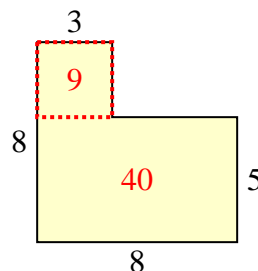
8)



9)



10)



**Answers**

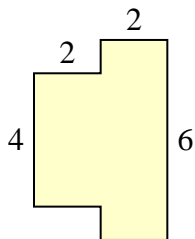
1. 33 mm<sup>2</sup>
2. 30 mm<sup>2</sup>
3. 32 mm<sup>2</sup>
4. 65 mm<sup>2</sup>
5. 34 mm<sup>2</sup>
6. 27 mm<sup>2</sup>
7. 41 mm<sup>2</sup>
8. 37 mm<sup>2</sup>
9. 34 mm<sup>2</sup>
10. 49 mm<sup>2</sup>



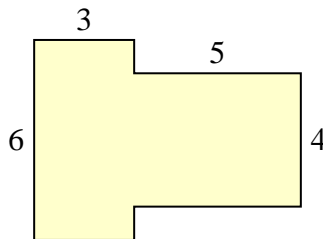
Find the total area of each shape. Measurement is in millimeters (mm). Not to scale.

Answers

1)

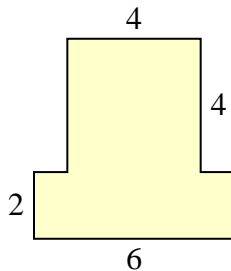


2)

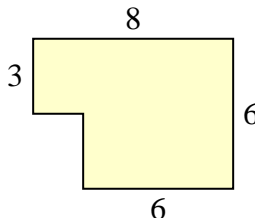


1. \_\_\_\_\_
2. \_\_\_\_\_
3. \_\_\_\_\_
4. \_\_\_\_\_
5. \_\_\_\_\_
6. \_\_\_\_\_
7. \_\_\_\_\_
8. \_\_\_\_\_
9. \_\_\_\_\_
10. \_\_\_\_\_

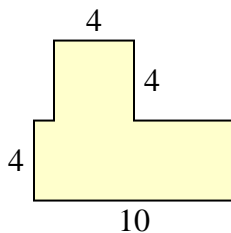
3)



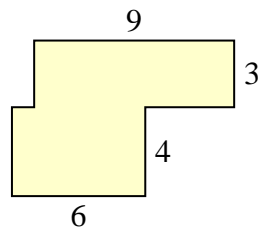
4)



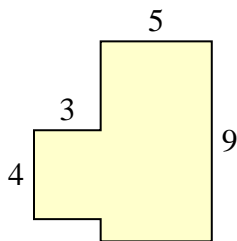
5)



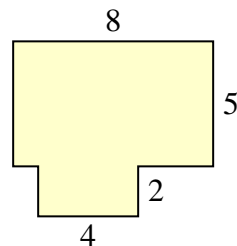
6)



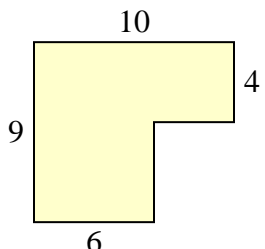
7)



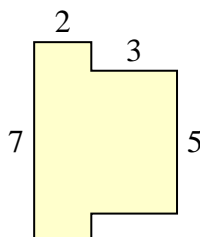
8)



9)

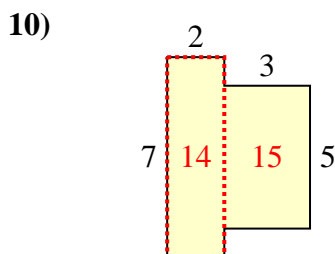
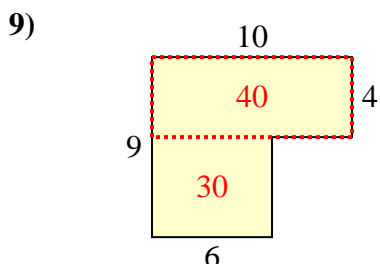
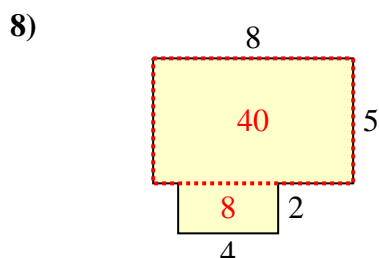
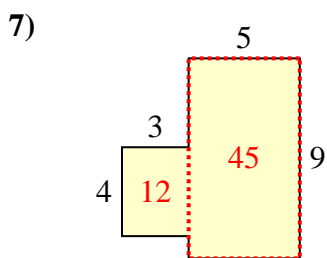
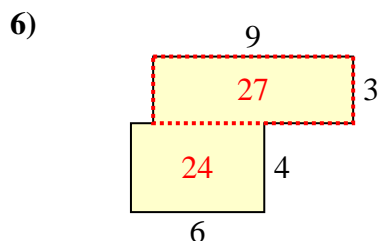
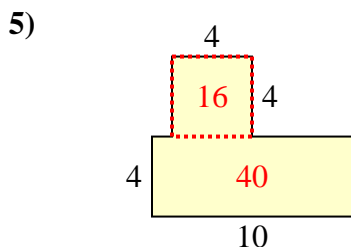
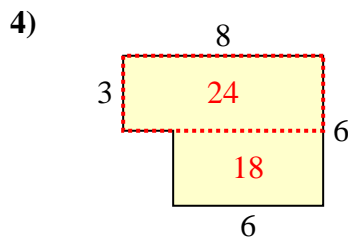
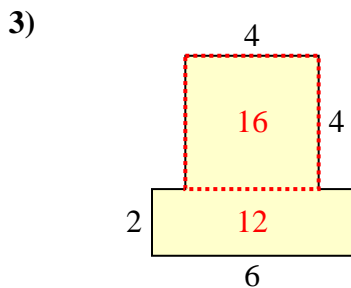
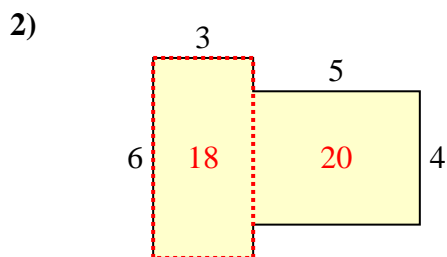
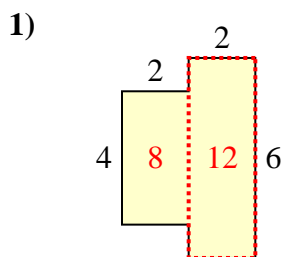


10)





Find the total area of each shape. Measurement is in millimeters (mm). Not to scale.



Answers

1. 20 mm<sup>2</sup>
2. 38 mm<sup>2</sup>
3. 28 mm<sup>2</sup>
4. 42 mm<sup>2</sup>
5. 56 mm<sup>2</sup>
6. 51 mm<sup>2</sup>
7. 57 mm<sup>2</sup>
8. 48 mm<sup>2</sup>
9. 70 mm<sup>2</sup>
10. 29 mm<sup>2</sup>